

## A crash course in linear algebra

**Example 1.** A typical  $2 \times 3$  matrix is  $\begin{bmatrix} 1 & 2 & 3 \\ 4 & 5 & 6 \end{bmatrix}$ .

It is composed of column vectors like  $\begin{bmatrix} 2 \\ 5 \end{bmatrix}$  and row vectors like  $[1 \ 2 \ 3]$ .

Matrices (and vectors) of the same dimensions can be added and multiplied by a scalar:

For instance,  $\begin{bmatrix} 1 & 2 & 3 \\ 4 & 5 & 6 \end{bmatrix} + \begin{bmatrix} 1 & 0 & 2 \\ 2 & 3 & -1 \end{bmatrix} = \begin{bmatrix} 2 & 2 & 5 \\ 6 & 8 & 5 \end{bmatrix}$  or  $3 \cdot \begin{bmatrix} 1 & 2 & 3 \\ 4 & 5 & 6 \end{bmatrix} = \begin{bmatrix} 3 & 6 & 9 \\ 12 & 15 & 18 \end{bmatrix}$ .

**Remark.** More generally, a **vector space** is an abstraction of a collection of objects that can be added and scaled: numbers, lists of numbers (like the above row and column vectors), arrays of numbers (like the above matrices), arrows, functions, polynomials, differential operators, solutions to homogeneous linear differential equations, ...

**Example 2.** The **transpose**  $A^T$  of  $A$  is obtained by interchanging roles of rows and columns.

For instance,  $\begin{bmatrix} 1 & 2 & 3 \\ 4 & 5 & 6 \end{bmatrix}^T = \begin{bmatrix} 1 & 4 \\ 2 & 5 \\ 3 & 6 \end{bmatrix}$

**Example 3.** Matrices of appropriate dimensions can also be **multiplied**.

This is based on the multiplication  $[a \ b \ c] \begin{bmatrix} x \\ y \\ z \end{bmatrix} = ax + by + cz$  of row and column vectors.

For instance,  $\begin{bmatrix} 1 & -1 & 1 \\ 2 & 1 & 3 \end{bmatrix} \begin{bmatrix} 1 & 0 \\ -1 & 1 \\ 2 & -2 \end{bmatrix} = \begin{bmatrix} 4 & -3 \\ 7 & -5 \end{bmatrix}$

In general, we can multiply a  $m \times n$  matrix  $A$  with a  $n \times r$  matrix  $B$  to get a  $m \times r$  matrix  $AB$ .

Its entry in row  $i$  and column  $j$  is defined to be  $(AB)_{ij} = (\text{row } i \text{ of } A) \begin{bmatrix} \text{column} \\ j \\ \text{of } B \end{bmatrix}$ .

**Comment.** One way to think about the multiplication  $A\mathbf{x}$  is that the resulting vector is a linear combination of the columns of  $A$  with coefficients from  $\mathbf{x}$ . Similarly, we can think of  $\mathbf{x}^T A$  as a combination of the rows of  $A$ .

Some nice properties of matrix multiplication are:

- There is an  $n \times n$  identity matrix  $I$  (all entries are zero except the diagonal ones which are 1). It satisfies  $AI = A$  and  $IA = A$ .
- The associative law  $A(BC) = (AB)C$  holds. Hence, we can write  $ABC$  without ambiguity.
- The distributive laws including  $A(B+C) = AB+AC$  hold.

**Example 4.**  $\begin{bmatrix} 2 & 0 \\ 0 & 1 \end{bmatrix} \begin{bmatrix} 1 & 2 \\ 3 & 4 \end{bmatrix} \neq \begin{bmatrix} 1 & 2 \\ 3 & 4 \end{bmatrix} \begin{bmatrix} 2 & 0 \\ 0 & 1 \end{bmatrix}$ , so we have no commutative law.

**Example 5.**  $\begin{bmatrix} 3 & 1 \\ 2 & 1 \end{bmatrix} \begin{bmatrix} 1 & -1 \\ -2 & 3 \end{bmatrix} = \begin{bmatrix} 1 & 0 \\ 0 & 1 \end{bmatrix}$

On the RHS we have the **identity matrix**, usually denoted  $I$  or  $I_2$  (since it's the  $2 \times 2$  identity matrix here).

Hence, the two matrices on the left are inverses of each other:  $\begin{bmatrix} 3 & 1 \\ 2 & 1 \end{bmatrix}^{-1} = \begin{bmatrix} 1 & -1 \\ -2 & 3 \end{bmatrix}$ ,  $\begin{bmatrix} 1 & -1 \\ -2 & 3 \end{bmatrix}^{-1} = \begin{bmatrix} 3 & 1 \\ 2 & 1 \end{bmatrix}$ .

The **inverse**  $A^{-1}$  of a matrix  $A$  is characterized by  $A^{-1}A = I$  and  $AA^{-1} = I$ .

**Example 6.** The following formula immediately gives us the inverse of a  $2 \times 2$  matrix (if it exists). It is worth remembering!

$$\begin{bmatrix} a & b \\ c & d \end{bmatrix}^{-1} = \frac{1}{ad-bc} \begin{bmatrix} d & -b \\ -c & a \end{bmatrix} \quad \text{provided that } ad-bc \neq 0$$

Let's check that!  $\frac{1}{ad-bc} \begin{bmatrix} d & -b \\ -c & a \end{bmatrix} \begin{bmatrix} a & b \\ c & d \end{bmatrix} = \frac{1}{ad-bc} \begin{bmatrix} ad-bc & 0 \\ 0 & -cb+ad \end{bmatrix} = I_2$

In particular, a  $2 \times 2$  matrix  $\begin{bmatrix} a & b \\ c & d \end{bmatrix}$  is invertible  $\iff ad-bc \neq 0$ .

Recall that this is the **determinant**:  $\det\left(\begin{bmatrix} a & b \\ c & d \end{bmatrix}\right) = ad-bc$ .

$$\det(A) = 0 \iff A \text{ is not invertible}$$

**Example 7.** The system  $\begin{cases} 7x_1 - 2x_2 = 3 \\ 2x_1 + x_2 = 5 \end{cases}$  is equivalent to  $\begin{bmatrix} 7 & -2 \\ 2 & 1 \end{bmatrix} \begin{bmatrix} x_1 \\ x_2 \end{bmatrix} = \begin{bmatrix} 3 \\ 5 \end{bmatrix}$ . Solve it.

**Solution.** Multiplying (from the left!) by  $\begin{bmatrix} 7 & -2 \\ 2 & 1 \end{bmatrix}^{-1} = \frac{1}{11} \begin{bmatrix} 1 & 2 \\ -2 & 7 \end{bmatrix}$  produces  $\begin{bmatrix} x_1 \\ x_2 \end{bmatrix} = \frac{1}{11} \begin{bmatrix} 1 & 2 \\ -2 & 7 \end{bmatrix} \begin{bmatrix} 3 \\ 5 \end{bmatrix} = \frac{1}{11} \begin{bmatrix} 13 \\ 29 \end{bmatrix}$ , which gives the solution of the original equations.

**Example 8. (homework)** Solve the system  $\begin{cases} x_1 + 2x_2 = 1 \\ 3x_1 + 4x_2 = -1 \end{cases}$  (using a matrix inverse).

**Solution.** The equations are equivalent to  $\begin{bmatrix} 1 & 2 \\ 3 & 4 \end{bmatrix} \begin{bmatrix} x_1 \\ x_2 \end{bmatrix} = \begin{bmatrix} 1 \\ -1 \end{bmatrix}$ .

Multiplying by  $\begin{bmatrix} 1 & 2 \\ 3 & 4 \end{bmatrix}^{-1} = -\frac{1}{2} \begin{bmatrix} 4 & -2 \\ -3 & 1 \end{bmatrix}$  produces  $\begin{bmatrix} x_1 \\ x_2 \end{bmatrix} = -\frac{1}{2} \begin{bmatrix} 4 & -2 \\ -3 & 1 \end{bmatrix} \begin{bmatrix} 1 \\ -1 \end{bmatrix} = -\frac{1}{2} \begin{bmatrix} 6 \\ -4 \end{bmatrix} = \begin{bmatrix} -3 \\ 2 \end{bmatrix}$ .

**Example 9. (homework)** Solve the system  $\begin{cases} x_1 + 2x_2 = 1 \\ 3x_1 + 4x_2 = 2 \end{cases}$  (using a matrix inverse).

**Solution.** The equations are equivalent to  $\begin{bmatrix} 1 & 2 \\ 3 & 4 \end{bmatrix} \begin{bmatrix} x_1 \\ x_2 \end{bmatrix} = \begin{bmatrix} 1 \\ 2 \end{bmatrix}$ .

Multiplying by  $\begin{bmatrix} 1 & 2 \\ 3 & 4 \end{bmatrix}^{-1} = -\frac{1}{2} \begin{bmatrix} 4 & -2 \\ -3 & 1 \end{bmatrix}$  produces  $\begin{bmatrix} x_1 \\ x_2 \end{bmatrix} = -\frac{1}{2} \begin{bmatrix} 4 & -2 \\ -3 & 1 \end{bmatrix} \begin{bmatrix} 1 \\ 2 \end{bmatrix} = -\frac{1}{2} \begin{bmatrix} 0 \\ -1 \end{bmatrix} = \begin{bmatrix} 0 \\ 1/2 \end{bmatrix}$ .

**Comment.** In hindsight, can you see this solution by staring at the equations?

**Comment.** Note how we can reuse the matrix inverse from the previous example.

The **determinant** of  $A$ , written as  $\det(A)$  or  $|A|$ , is a number with the property that:

$$\begin{aligned} \det(A) \neq 0 &\iff A \text{ is invertible} \\ &\iff Ax = b \text{ has a (unique) solution } x \text{ for all } b \\ &\iff Ax = 0 \text{ is only solved by } x = 0 \end{aligned}$$

**Example 10.**  $\det\left(\begin{bmatrix} a & b \\ c & d \end{bmatrix}\right) = ad-bc$ , which appeared in the formula for the inverse.

**Example 11. (review)**  $\begin{bmatrix} 1 & 2 & 3 \end{bmatrix} \begin{bmatrix} 1 \\ 2 \\ 3 \end{bmatrix} = \begin{bmatrix} 14 \end{bmatrix}$  whereas  $\begin{bmatrix} 1 \\ 2 \\ 3 \end{bmatrix} \begin{bmatrix} 1 & 2 & 3 \end{bmatrix} = \begin{bmatrix} 1 & 2 & 3 \\ 2 & 4 & 6 \\ 3 & 6 & 9 \end{bmatrix}$ .

### Review: Examples of differential equations we can solve

Let's start with one of the simplest (and most fundamental) differential equations (DE). It is **first-order** (only a first derivative) and **linear** with constant coefficients.

**Example 12.** Solve  $y' = 3y$ .

**Solution.**  $y(x) = Ce^{3x}$

**Check.** Indeed, if  $y(x) = Ce^{3x}$ , then  $y'(x) = 3Ce^{3x} = 3y(x)$ .

**Comment.** Recall we can always easily check whether a function solves a differential equation. This means that (although you might be unfamiliar with the techniques for solving) you can use computer algebra systems like Sage to solve differential equations without trust issues.

To describe a unique solution, additional constraints need to be imposed.

**Example 13.** Solve the **initial value problem** (IVP)  $y' = 3y$ ,  $y(0) = 5$ .

**Solution.** This has the unique solution  $y(x) = 5e^{3x}$ .

The following is a **nonlinear** differential equation. In general, such equations are much more complicated than linear ones. We can solve this particular one because it is **separable**.

**Example 14.** Solve  $y' = xy^2$ .

**Solution.** This DE is separable:  $\frac{1}{y^2}dy = x dx$ . Integrating, we find  $-\frac{1}{y} = \frac{1}{2}x^2 + C$ .

Hence,  $y = -\frac{1}{\frac{1}{2}x^2 + C} = \frac{2}{D - x^2}$ .

[Here,  $D = -2C$  but that relationship doesn't matter; it only matters that the solution has a free parameter.]

**Note.** Note that we did not find the solution  $y = 0$  (lost when dividing by  $y^2$ ). It is called a **singular solution** because it is not part of the **general solution** (the one-parameter family found above). [Although, we can obtain it from the general solution by letting  $D \rightarrow \infty$ .]

**Check.** Compute  $y'$  and verify that the DE is indeed satisfied.

## Review: Linear DEs

**Linear DEs** of order  $n$  are those that can be written in the form

$$y^{(n)} + P_{n-1}(x)y^{(n-1)} + \dots + P_1(x)y' + P_0(x)y = f(x).$$

The corresponding **homogeneous linear DE** is the DE

$$y^{(n)} + P_{n-1}(x)y^{(n-1)} + \dots + P_1(x)y' + P_0(x)y = 0,$$

and it plays an important role in solving the original linear DE.

**Important.** Note that a linear DE is **homogeneous** if and only if the zero function  $y(x) = 0$  is a solution.

In terms of  $D = \frac{d}{dx}$ , the original DE becomes:  $Ly = f(x)$  where  $L$  is the **differential operator**

$$L = D^n + P_{n-1}(x)D^{n-1} + \dots + P_1(x)D + P_0(x).$$

The corresponding homogeneous linear DE is  $Ly = 0$ .

Linear DEs have a lot of structure that makes it possible to understand them more deeply. Most notably, their general solution always has the following structure:

**(general solution of linear DEs)** For a linear DE  $Ly = f(x)$  of order  $n$ , the general solution always takes the form

$$y(x) = y_p(x) + C_1y_1(x) + \dots + C_ny_n(x),$$

where  $y_p$  is any single solution (called a **particular solution**) and  $y_1, y_2, \dots, y_n$  are solutions to the corresponding **homogeneous** linear DE  $Ly = 0$ .

**Comment.** If the linear DE is already homogeneous, then the zero function  $y(x) = 0$  is a solution and we can use  $y_p = 0$ . In that case, the general solution is of the form  $y(x) = C_1y_1 + C_2y_2 + \dots + C_ny_n$ .

**Why?** The key to this is that the differential operator  $L$  is **linear**, meaning that, for any functions  $f_1(x), f_2(x)$  and any constants  $c_1, c_2$ , we have

$$L(c_1f_1(x) + c_2f_2(x)) = c_1L(f_1(x)) + c_2L(f_2(x)).$$

If this is not clear, consider first a case like  $L = D^n$  or work through the next example for the order 2 case.

**Example 15. (extra)** Suppose that  $L = D^2 + P(x)D + Q(x)$ . Verify that the operator  $L$  is linear.

**Solution.** We need to show that the operator  $L$  satisfies

$$L(c_1f_1(x) + c_2f_2(x)) = c_1L(f_1(x)) + c_2L(f_2(x))$$

for any functions  $f_1(x), f_2(x)$  and any constants  $c_1, c_2$ . Indeed:

$$\begin{aligned} L(c_1f_1 + c_2f_2) &= (c_1f_1 + c_2f_2)'' + P(x)(c_1f_1 + c_2f_2)' + Q(x)(c_1f_1 + c_2f_2) \\ &= c_1\{f_1'' + P(x)f_1' + Q(x)f_1\} + c_2\{f_2'' + P(x)f_2' + Q(x)f_2\} \\ &= c_1 \cdot Lf_1 + c_2 \cdot Lf_2 \end{aligned}$$

**Example 16. (extra)** Consider the following DEs. If linear, write them in operator form as  $Ly = f(x)$ .

- (a)  $y'' = xy$   
 (b)  $x^2y'' + xy' = (x^2 + 4)y + x(x^2 + 3)$   
 (c)  $y'' = y' + 2y + 2(1 - x - x^2)$   
 (d)  $y'' = y' + 2y + 2(1 - x - y^2)$

**Solution.**

- (a) This is a homogeneous linear DE:  $\frac{(D^2 - x)y}{L} = \frac{0}{f(x)}$

**Note.** This is known as the Airy equation, which we will meet again later. The general solution is of the form  $C_1y_1(x) + C_2y_2(x)$  for two special solutions  $y_1, y_2$ . [In the literature, one usually chooses functions called  $\text{Ai}(x)$  and  $\text{Bi}(x)$  as  $y_1$  and  $y_2$ . See: [https://en.wikipedia.org/wiki/Airy\\_function](https://en.wikipedia.org/wiki/Airy_function)]

- (b) This is an inhomogeneous linear DE:  $\frac{(x^2D^2 + xD - (x^2 + 4))y}{L} = \frac{x(x^2 + 3)}{f(x)}$

**Note.** The corresponding homogeneous DE is an instance of the “modified Bessel equation”  $x^2y'' + xy' - (x^2 + \alpha^2)y = 0$ , namely the case  $\alpha = 2$ . Because they are important for applications (but cannot be written in terms of familiar functions), people have introduced names for two special solutions of this differential equation:  $I_\alpha(x)$  and  $K_\alpha(x)$  (called modified Bessel functions of the first and second kind).

It follows that the general solution of the modified Bessel equation is  $C_1I_\alpha(x) + C_2K_\alpha(x)$ .

**In our case.** The general solution of the homogeneous DE (which is the modified Bessel equation with  $\alpha = 2$ ) is  $C_1I_2(x) + C_2K_2(x)$ . On the other hand, we can (do it!) easily check (this is coming from nowhere at this point!) that  $y_p = -x$  is a particular solution to the original inhomogeneous DE.

It follows that the general solution to the original DE is  $C_1I_2(x) + C_2K_2(x) - x$ .

- (c) This is an inhomogeneous linear DE:  $\frac{(D^2 - D - 2)y}{L} = \frac{2(1 - x - x^2)}{f(x)}$

**Note.** We will recall in Example 17 that the corresponding homogeneous DE  $(D^2 - D - 2)y = 0$  has general solution  $C_1e^{2x} + C_2e^{-x}$ . On the other hand, we can check that  $y_p = x^2$  is a particular solution of the original inhomogeneous DE. (Do you recall from DE1 how to find this particular solution?)

It follows that the general solution to the original DE is  $x^2 + C_1e^{2x} + C_2e^{-x}$ .

- (d) This is not a linear DE because of the term  $y^2$ . It cannot be written in the form  $Ly = f(x)$ .

### Homogeneous linear DEs with constant coefficients

**Example 17.** Find the general solution to  $y'' - y' - 2y = 0$ .

**Solution.** We recall from *Differential Equations I* that  $e^{rx}$  solves this DE for the right choice of  $r$ .

Plugging  $e^{rx}$  into the DE, we get  $r^2e^{rx} - re^{rx} - 2e^{rx} = 0$ .

Equivalently,  $r^2 - r - 2 = 0$ . This is called the **characteristic equation**. Its solutions are  $r = 2, -1$ .

This means we found the two solutions  $y_1 = e^{2x}$ ,  $y_2 = e^{-x}$ .

Since this a homogeneous linear DE, the general solution is  $y = C_1e^{2x} + C_2e^{-x}$ .

**Solution. (operators)**  $y'' - y' - 2y = 0$  is equivalent to  $(D^2 - D - 2)y = 0$ .

Note that  $D^2 - D - 2 = (D - 2)(D + 1)$  is the **characteristic polynomial**.

It follows that we get solutions to  $(D - 2)(D + 1)y = 0$  from  $(D - 2)y = 0$  and  $(D + 1)y = 0$ .

$(D - 2)y = 0$  is solved by  $y_1 = e^{2x}$ , and  $(D + 1)y = 0$  is solved by  $y_2 = e^{-x}$ ; as in the previous solution.

**Example 18.** Solve  $y'' - y' - 2y = 0$  with initial conditions  $y(0) = 4$ ,  $y'(0) = 5$ .

**Solution.** From the previous example, we know that  $y(x) = C_1 e^{2x} + C_2 e^{-x}$ .

To match the initial conditions, we need to solve  $C_1 + C_2 = 4$ ,  $2C_1 - C_2 = 5$ . We find  $C_1 = 3$ ,  $C_2 = 1$ .

Hence the solution is  $y(x) = 3e^{2x} + e^{-x}$ .

Set  $D = \frac{d}{dx}$ . Every **homogeneous linear DE with constant coefficients** can be written as  $p(D)y = 0$ , where  $p(D)$  is a polynomial in  $D$ , called the **characteristic polynomial**.

**For instance.**  $y'' - y' - 2y = 0$  is equivalent to  $Ly = 0$  with  $L = D^2 - D - 2$ .

**Example 19.** Find the general solution of  $y''' + 7y'' + 14y' + 8y = 0$ .

**Solution.** This DE is of the form  $p(D)y = 0$  with characteristic polynomial  $p(D) = D^3 + 7D^2 + 14D + 8$ .

The characteristic polynomial factors as  $p(D) = (D + 1)(D + 2)(D + 4)$ . (Don't worry! You won't be asked to factor cubic polynomials by hand.)

Hence, by the same argument as in Example 17, we find the solutions  $y_1 = e^{-x}$ ,  $y_2 = e^{-2x}$ ,  $y_3 = e^{-4x}$ . That's enough (independent!) solutions for a third-order DE.

The general solution therefore is  $y(x) = C_1 e^{-x} + C_2 e^{-2x} + C_3 e^{-4x}$ .

This approach applies to any homogeneous linear DE with constant coefficients!

One issue is that roots might be repeated. In that case, we are currently missing solutions. The following result provides the missing solutions.

**Theorem 20.** Consider the homogeneous linear DE with constant coefficients  $p(D)y = 0$ .

- If  $r$  is a root of the characteristic polynomial and if  $k$  is its multiplicity, then  $k$  (independent) solutions of the DE are given by  $x^j e^{rx}$  for  $j = 0, 1, \dots, k - 1$ .
- Combining these solutions for all roots, gives the general solution.

This is because the order of the DE equals the degree of  $p(D)$ , and a polynomial of degree  $n$  has (counting with multiplicity) exactly  $n$  (possibly **complex**) roots.

**In the complex case.** If  $r = a \pm bi$  are roots of the characteristic polynomial and if  $k$  is its multiplicity, then  $2k$  (independent) **real solutions** of the DE are given by  $x^j e^{ax} \cos(bx)$  and  $x^j e^{ax} \sin(bx)$  for  $j = 0, 1, \dots, k - 1$ .

**Proof.** Let  $r$  be a root of the characteristic polynomial of multiplicity  $k$ . Then  $p(D) = q(D)(D - r)^k$ .

We need to find  $k$  solutions to the simpler DE  $(D - r)^k y = 0$ .

It is natural to look for solutions of the form  $y = c(x)e^{rx}$ .

[We know that  $c(x) = 1$  provides a solution. Note that this is the same idea as for variation of constants.]

Note that  $(D - r)[c(x)e^{rx}] = (c'(x)e^{rx} + c(x)re^{rx}) - rc(x)e^{rx} = c'(x)e^{rx}$ .

Repeating, we get  $(D - r)^2[c(x)e^{rx}] = (D - r)[c'(x)e^{rx}] = c''(x)e^{rx}$  and, eventually,  $(D - r)^k[c(x)e^{rx}] = c^{(k)}(x)e^{rx}$ .

In particular,  $(D - r)^k y = 0$  is solved by  $y = c(x)e^{rx}$  if and only if  $c^{(k)}(x) = 0$ .

The DE  $c^{(k)}(x) = 0$  is clearly solved by  $x^j$  for  $j = 0, 1, \dots, k - 1$ , and it follows that  $x^j e^{rx}$  solves the original DE.  $\square$

**Example 21.** Find the general solution of  $y''' = 0$ .

**Solution.** We know from Calculus that the general solution is  $y(x) = C_1 + C_2 x + C_3 x^2$ .

**Solution.** The characteristic polynomial  $p(D) = D^3$  has roots  $0, 0, 0$ . By Theorem 20, we have the solutions  $y(x) = x^j e^{0x} = x^j$  for  $j = 0, 1, 2$ , so that the general solution is  $y(x) = C_1 + C_2 x + C_3 x^2$ .

**Example 22.** Find the general solution of  $y''' - y'' - 5y' - 3y = 0$ .

**Solution.** The characteristic polynomial  $p(D) = D^3 - D^2 - 5D - 3 = (D - 3)(D + 1)^2$  has roots  $3, -1, -1$ .

By Theorem 20, the general solution is  $y(x) = C_1 e^{3x} + (C_2 + C_3 x) e^{-x}$ .

**Example 23.** Find the general solution of  $y'' + y = 0$ .

**Solution.** The characteristic polynomial is  $p(D) = D^2 + 1 = 0$  which has no solutions over the reals.

Over the **complex numbers**, by definition, the roots are  $i$  and  $-i$ .

So the general solution is  $y(x) = C_1 e^{ix} + C_2 e^{-ix}$ .

**Solution.** On the other hand, we easily check that  $y_1 = \cos(x)$  and  $y_2 = \sin(x)$  are two solutions.

Hence, the general solution can also be written as  $y(x) = D_1 \cos(x) + D_2 \sin(x)$ .

**Important comment.** That we have these two different representations is a consequence of **Euler's identity**

$$e^{ix} = \cos(x) + i \sin(x).$$

Note that  $e^{-ix} = \cos(x) - i \sin(x)$ .

On the other hand,  $\cos(x) = \frac{1}{2}(e^{ix} + e^{-ix})$  and  $\sin(x) = \frac{1}{2i}(e^{ix} - e^{-ix})$ .

[Recall that the first formula is an instance of  $\operatorname{Re}(z) = \frac{1}{2}(z + \bar{z})$  and the second of  $\operatorname{Im}(z) = \frac{1}{2i}(z - \bar{z})$ .]

**Example 24.** Find the general solution of  $y'' - 4y' + 13y = 0$ .

**Solution.** The characteristic polynomial  $p(D) = D^2 - 4D + 13$  has roots  $2 + 3i, 2 - 3i$ .

Hence, the general solution is  $y(x) = C_1 e^{2x} \cos(3x) + C_2 e^{2x} \sin(3x)$ .

**Note.**  $e^{(2+3i)x} = e^{2x} e^{3ix} = e^{2x} (\cos(3x) + i \sin(3x))$

**Example 25. (review)** Find the general solution of  $y''' - 3y' + 2y = 0$ .

**Solution.** The characteristic polynomial  $p(D) = D^3 - 3D + 2 = (D - 1)^2(D + 2)$  has roots  $1, 1, -2$ .  
By Theorem 20, the general solution is  $y(x) = (C_1 + C_2x)e^x + C_3e^{-2x}$ .

**Example 26. (review)** Consider the function  $y(x) = 7x - 5x^2e^{4x}$ . Find an operator  $p(D)$  such that  $p(D)y = 0$ .

**Comment.** This is the same as determining a homogeneous linear DE with constant coefficients solved by  $y(x)$ .

**Solution.** In order for  $y(x)$  to be a solution of  $p(D)y = 0$ , the characteristic roots must include  $0, 0, 4, 4, 4$ .  
The simplest choice for  $p(D)$  thus is  $p(D) = D^2(D - 4)^3$ .

**Inhomogeneous linear DEs: The method of undetermined coefficients**

The **method of undetermined coefficients** allows us to solve certain inhomogeneous linear DEs  $Ly = f(x)$  with constant coefficients..

It works if  $f(x)$  is itself a solution of a homogeneous linear DE with constant coefficients (see previous example).

**Example 27.** Determine the general solution of  $y'' + 4y = 12x$ .

**Solution.** The DE is  $p(D)y = 12x$  with  $p(D) = D^2 + 4$ , which has roots  $\pm 2i$ . Thus, the general solution is  $y(x) = y_p(x) + C_1\cos(2x) + C_2\sin(2x)$ . It remains to find a particular solution  $y_p$ .

Since  $D^2 \cdot (12x) = 0$ , we apply  $D^2$  to both sides of the DE to get the **homogeneous** DE  $D^2(D^2 + 4) \cdot y = 0$ .

Its general solution is  $C_1 + C_2x + C_3\cos(2x) + C_4\sin(2x)$  and  $y_p$  must be of this form. Indeed, there must be a particular solution of the simpler form  $y_p = C_1 + C_2x$  (because  $C_3\cos(2x) + C_4\sin(2x)$  can be added to any  $y_p$ ).

It remains to find appropriate values  $C_1, C_2$  such that  $y_p'' + 4y_p = 12x$ . Since  $y_p'' + 4y_p = 4C_1 + 4C_2x$ , comparing coefficients yields  $4C_1 = 0$  and  $4C_2 = 12$ , so that  $C_1 = 0$  and  $C_2 = 3$ . In other words,  $y_p = 3x$ .

Therefore, the general solution to the original DE is  $y(x) = 3x + C_1\cos(2x) + C_2\sin(2x)$ .

**Example 28.** Determine the general solution of  $y'' + 4y' + 4y = e^{3x}$ .

**Solution.** The DE is  $p(D)y = e^{3x}$  with  $p(D) = D^2 + 4D + 4 = (D + 2)^2$ , which has roots  $-2, -2$ . Thus, the general solution is  $y(x) = y_p(x) + (C_1 + C_2x)e^{-2x}$ . It remains to find a particular solution  $y_p$ .

Since  $(D - 3)e^{3x} = 0$ , we apply  $(D - 3)$  to the DE to get the **homogeneous** DE  $(D - 3)(D + 2)^2y = 0$ .

Its general solution is  $(C_1 + C_2x)e^{-2x} + C_3e^{3x}$  and  $y_p$  must be of this form. Indeed, there must be a particular solution of the simpler form  $y_p = Ae^{3x}$ .

To determine the value of  $C$ , we plug into the original DE:  $y_p'' + 4y_p' + 4y_p = (9 + 4 \cdot 3 + 4)Ae^{3x} \stackrel{!}{=} e^{3x}$ . Hence,  $A = 1/25$ . Therefore, the general solution to the original DE is  $y(x) = (C_1 + C_2x)e^{-2x} + \frac{1}{25}e^{3x}$ .

**Solution. (same, just shortened)** In schematic form:

	homogeneous DE	inhomogeneous part
characteristic roots	$-2, -2$	$3$
solutions	$e^{-2x}, xe^{-2x}$	$e^{3x}$

This tells us that there exists a particular solution of the form  $y_p = Ae^{3x}$ . Then the general solution is

$$y = y_p + C_1e^{-2x} + C_2xe^{-2x}.$$

So far, we didn't need to do any calculations (besides determining the roots)! However, we still need to determine the value of  $A$  (by plugging into the DE as above), namely  $A = \frac{1}{25}$ . For this reason, this approach is often called the **method of undetermined coefficients**.

We found the following recipe for solving nonhomogeneous linear DEs with constant coefficients:

That approach works for  $p(D)y = f(x)$  whenever the right-hand side  $f(x)$  is the solution of some homogeneous linear DE with constant coefficients:  $q(D)f(x) = 0$

**(method of undetermined coefficients)** To find a particular solution  $y_p$  to an inhomogeneous linear DE with constant coefficients  $p(D)y = f(x)$ :

- Determine the characteristic roots of the homogeneous DE and corresponding solutions.
- Find the roots of  $q(D)$  so that  $q(D)f(x) = 0$ . [This does not work for all  $f(x)$ .]  
Let  $y_{p,1}, y_{p,2}, \dots$  be the additional solutions (when the roots are added to those of the homogeneous DE).

Then there exist (unique)  $C_i$  so that

$$y_p = C_1 y_{p,1} + C_2 y_{p,2} + \dots$$

To find the values  $C_i$ , we need to plug  $y_p$  into the original DE.

**Why?** To see that this approach works, note that applying  $q(D)$  to both sides of the inhomogeneous DE  $p(D)y = f(x)$  results in  $q(D)p(D)y = 0$  which is homogeneous. We already know that the solutions to the homogeneous DE can be added to any particular solution  $y_p$ . Therefore, we can focus only on the additional solutions coming from the roots of  $q(D)$ .

**For which  $f(x)$  does this work?** By Theorem 20, we know exactly which  $f(x)$  are solutions to homogeneous linear DEs with constant coefficients: these are linear combinations of exponentials  $x^j e^{rx}$  (which includes  $x^j e^{ax} \cos(bx)$  and  $x^j e^{ax} \sin(bx)$ ).

**Example 29.** Determine the general solution of  $y'' + 4y' + 4y = 7e^{-2x}$ .

**Solution.** The homogeneous DE is  $y'' + 4y' + 4y = 0$  (note that  $D^2 + 4D + 4 = (D + 2)^2$ ) and the inhomogeneous part is  $7e^{-2x}$ .

	homogeneous DE	inhomogeneous part
characteristic roots	$-2, -2$	$-2$
solutions	$e^{-2x}, x e^{-2x}$	$x^2 e^{-2x}$

This tells us that there exists a particular solution of the form  $y_p = Cx^2 e^{-2x}$ . To find the value of  $C$ , we plug into the DE.

$$y_p' = C(-2x^2 + 2x)e^{-2x}$$

$$y_p'' = C(4x^2 - 8x + 2)e^{-2x}$$

$$y_p'' + 4y_p' + 4y_p = 2Ce^{-2x} \stackrel{!}{=} 7e^{-2x}$$

It follows that  $C = \frac{7}{2}$ , so that  $y_p = \frac{7}{2}x^2 e^{-2x}$ . Hence the general solution is

$$y(x) = \left( C_1 + C_2 x + \frac{7}{2} x^2 \right) e^{-2x}.$$

**Example 30.** Consider the DE  $y'' + 4y' + 4y = 2e^{3x} - 5e^{-2x}$ .

- What is the simplest form (with undetermined coefficients) of a particular solution?
- Determine a particular solution using our results from Examples 28 and 29.
- Determine the general solution.

**Solution.**

- (a) Note that  $D^2 + 4D + 4 = (D + 2)^2$ .

	homogeneous DE	inhomogeneous part
characteristic roots	$-2, -2$	$3, -2$
solutions	$e^{-2x}, xe^{-2x}$	$e^{3x}, x^2e^{-2x}$

Hence, there has to be a particular solution of the form  $y_p = Ae^{3x} + Bx^2e^{-2x}$ .

To find the (unique) values of  $A$  and  $B$ , we can plug into the DE. Alternatively, we can break the problem into two pieces as illustrated in the next part.

- (b) Write the DE as  $Ly = 2e^{3x} - 5e^{-2x}$  where  $L = D^2 + 4D + 4$ . In Example 28 we found that  $y_1 = \frac{1}{25}e^{3x}$  satisfies  $Ly_1 = e^{3x}$ . Also, in Example 29 we found that  $y_2 = \frac{7}{2}x^2e^{-2x}$  satisfies  $Ly_2 = 7e^{-2x}$ .

By linearity, it follows that  $L(Ay_1 + By_2) = ALy_1 + BLy_2 = Ae^{3x} + 7Be^{-2x}$ .

To get a particular solution  $y_p$  of our DE, we need  $A = 2$  and  $7B = -5$ .

Hence,  $y_p = 2y_1 - \frac{5}{7}y_2 = \frac{2}{25}e^{3x} - \frac{5}{2}x^2e^{-2x}$ .

**Comment.** Of course, if we hadn't previously solved Examples 28 and 29, we could have plugged the result from the first part into the DE to determine the coefficients  $A$  and  $B$ . On the other hand, breaking the inhomogeneous part ( $2e^{3x} - 5e^{-2x}$ ) up into pieces (here,  $e^{3x}$  and  $e^{-2x}$ ) can help keep things organized, especially when working by hand.

- (c) The general solution is  $\frac{2}{25}e^{3x} - \frac{5}{2}x^2e^{-2x} + (C_1 + C_2x)e^{2x}$ .

**Example 31.** Consider the DE  $y'' - 2y' + y = 5\sin(3x)$ .

- (a) What is the simplest form (with undetermined coefficients) of a particular solution?  
 (b) Determine a particular solution.  
 (c) Determine the general solution.

**Solution.** Note that  $D^2 - 2D + 1 = (D - 1)^2$ .

	homogeneous DE	inhomogeneous part
characteristic roots	$1, 1$	$\pm 3i$
solutions	$e^x, xe^x$	$\cos(3x), \sin(3x)$

- (a) This tells us that there exists a particular solution of the form  $y_p = A \cos(3x) + B \sin(3x)$ .

- (b) To find the values of  $A$  and  $B$ , we plug into the DE.

$$y'_p = -3A \sin(3x) + 3B \cos(3x)$$

$$y''_p = -9A \cos(3x) - 9B \sin(3x)$$

$$y''_p - 2y'_p + y_p = (-8A - 6B)\cos(3x) + (6A - 8B)\sin(3x) \stackrel{!}{=} 5\sin(3x)$$

Equating the coefficients of  $\cos(x)$ ,  $\sin(x)$ , we obtain the two equations  $-8A - 6B = 0$  and  $6A - 8B = 5$ .

Solving these, we find  $A = \frac{3}{10}$ ,  $B = -\frac{2}{5}$ . Accordingly, a particular solution is  $y_p = \frac{3}{10} \cos(3x) - \frac{2}{5} \sin(3x)$ .

- (c) The general solution is  $y(x) = \frac{3}{10} \cos(3x) - \frac{2}{5} \sin(3x) + (C_1 + C_2x)e^x$ .

**Example 32.** Consider the DE  $y'' - 2y' + y = 5e^{2x}\sin(3x) + 7xe^x$ . What is the simplest form (with undetermined coefficients) of a particular solution?

**Solution.** Since  $D^2 - 2D + 1 = (D - 1)^2$ , the characteristic roots are  $1, 1$ . The roots for the inhomogeneous part are  $2 \pm 3i, 1, 1$ . Hence, there has to be a particular solution of the form  $y_p = Ae^{2x}\cos(3x) + Be^{2x}\sin(3x) + Cx^2e^x + Dx^3e^x$ .

(We can then plug into the DE to determine the (unique) values of the coefficients  $A, B, C, D$ .)

**Example 33. (homework)** What is the shape of a particular solution of  $y'' + 4y' + 4y = x \cos(x)$ ?

**Solution.** The characteristic roots are  $-2, -2$ . The roots for the inhomogeneous part are  $\pm i, \pm i$ . Hence, there has to be a particular solution of the form  $y_p = (C_1 + C_2x)\cos(x) + (C_3 + C_4x)\sin(x)$ .

**Continuing to find a particular solution.** To find the value of the  $C_j$ 's, we plug into the DE.

$$y_p' = (C_2 + C_3 + C_4x)\cos(x) + (C_4 - C_1 - C_2x)\sin(x)$$

$$y_p'' = (2C_4 - C_1 - C_2x)\cos(x) + (-2C_2 - C_3 - C_4x)\sin(x)$$

$$y_p'' + 4y_p' + 4y_p = (3C_1 + 4C_2 + 4C_3 + 2C_4 + (3C_2 + 4C_4)x)\cos(x) \\ + (-4C_1 - 2C_2 + 3C_3 + 4C_4 + (-4C_2 + 3C_4)x)\sin(x) \stackrel{!}{=} x \cos(x).$$

Equating the coefficients of  $\cos(x)$ ,  $x \cos(x)$ ,  $\sin(x)$ ,  $x \sin(x)$ , we get the equations  $3C_1 + 4C_2 + 4C_3 + 2C_4 = 0$ ,  $3C_2 + 4C_4 = 1$ ,  $-4C_1 - 2C_2 + 3C_3 + 4C_4 = 0$ ,  $-4C_2 + 3C_4 = 0$ .

Solving (this is tedious!), we find  $C_1 = -\frac{4}{125}$ ,  $C_2 = \frac{3}{25}$ ,  $C_3 = -\frac{22}{125}$ ,  $C_4 = \frac{4}{25}$ .

Hence,  $y_p = \left(-\frac{4}{125} + \frac{3}{25}x\right)\cos(x) + \left(-\frac{22}{125} + \frac{4}{25}x\right)\sin(x)$ .

**Example 34. (review)** What is the shape of a particular solution of  $y'' + 4y' + 4y = 4e^{3x}\sin(2x) - x\sin(x)$ .

**Solution.** The characteristic roots are  $-2, -2$ . The roots for the inhomogeneous part roots are  $3 \pm 2i, \pm i, \pm i$ . Hence, there has to be a particular solution of the form

$$y_p = C_1 e^{3x} \cos(2x) + C_2 e^{3x} \sin(2x) + (C_3 + C_4 x) \cos(x) + (C_5 + C_6 x) \sin(x).$$

**Continuing to find a particular solution.** To find the values of  $C_1, \dots, C_6$ , we plug into the DE. But this final step is so boring that we don't go through it here. Computers (currently?) cannot afford to be as selective; mine obediently calculated:  $y_p = -\frac{4}{841}e^{3x}(20\cos(2x) - 21\sin(2x)) + \frac{1}{125}((-22 + 20x)\cos(x) + (4 - 15x)\sin(x))$

### Sage

In practice, we are happy to let a machine do tedious computations. Let us see how to use the open-source computer algebra system **Sage** to do basic computations for us.

Sage is freely available at [sagemath.org](http://sagemath.org). Instead of installing it locally (it's huge!) we can conveniently use it in the cloud at [cocalc.com](http://cocalc.com) from any browser.

[For basic computations, you can also simply use the textbox on our course website.]

Sage is built as a **Python** library, so any Python code is valid. For starters, we will use it as a fancy calculator.

**Example 35.** To solve the differential equation  $y'' + 4y' + 4y = 7e^{-2x}$ , as we did in Example 29, we can use the following:

```
>>> x = var('x')
>>> y = function('y')(x)
>>> desolve(diff(y,x,2) + 4*diff(y,x) + 4*y == 7*exp(-2*x), y)
```

$$\frac{7}{2} x^2 e^{(-2x)} + (K_2 x + K_1) e^{(-2x)}$$

This confirms, as we had found, that the general solution is  $y(x) = (C_1 + C_2 x + \frac{7}{2} x^2) e^{-2x}$ .

**Example 36.** Similarly, Sage can solve initial value problems such as  $y'' - y' - 2y = 0$  with initial conditions  $y(0) = 4$ ,  $y'(0) = 5$ .

```
>>> x = var('x')
>>> y = function('y')(x)
>>> desolve(diff(y,x,2) - diff(y,x) - 2*y == 0, y, ics=[0,4,5])
```

$$3 e^{(2x)} + e^{(-x)}$$

This matches the (unique) solution  $y(x) = 3e^{2x} + e^{-x}$  that we derived in Example 18.

**Higher order.** Unfortunately, the command `desolve` currently only works like this for differential equations of first and second order. To likewise solve a third-order differential equation, we can use the function `desolve_laplace` instead. For instance, to solve the IVP  $y''' = 3y'' - 4y$  with  $y(0) = 1$ ,  $y'(0) = -2$ ,  $y''(0) = 3$ , use

```
>>> desolve_laplace(diff(y,x,3) == 3*diff(y,x,2) - 4*y, y, ics=[0,1,-2,3])
```

$$x e^{(2x)} - \frac{2}{3} e^{(2x)} + \frac{5}{3} e^{(-x)}$$

to find that the unique solution is  $y(x) = \frac{1}{3}(3x - 2)e^{2x} + \frac{5}{3}e^{-x}$ .

## More on differential operators

**Example 37.** We have been factoring differential operators like  $D^2 + 4D + 4 = (D + 2)^2$ .

Things become much more complicated when the coefficients are not constant!

For instance, the linear DE  $y'' + 4y' + 4xy = 0$  can be written as  $Ly = 0$  with  $L = D^2 + 4D + 4x$ . However, in general, such operators cannot be factored (unless we allow as coefficients functions in  $x$  that we are not familiar with). [On the other hand, any ordinary polynomial can be factored over the complex numbers.]

One indication that things become much more complicated is that  $x$  and  $D$  do not commute:  $xD \neq Dx$ !!

Indeed,  $(xD)f(x) = xf'(x)$  while  $(Dx)f(x) = \frac{d}{dx}[xf(x)] = f(x) + xf'(x) = (1 + xD)f(x)$ .

This computation shows that, in fact,  $Dx = xD + 1$ .

**Review.** Linear DEs are those that can be written as  $Ly = f(x)$  where  $L$  is a linear differential operator: namely,

$$L = p_n(x)D^n + p_{n-1}(x)D^{n-1} + \dots + p_1(x)D + p_0(x). \quad (1)$$

Recall that the operators  $xD$  and  $Dx$  are not the same: instead,  $Dx = xD + 1$ .

We say that an operator of the form (1) is in **normal form**.

**For instance.**  $xD$  is in normal form, whereas  $Dx$  is not in normal form. It follows from the previous example that the normal form of  $Dx$  is  $xD + 1$ .

**Example 38.** Let  $a = a(x)$  be some function.

- (a) Write the operator  $Da$  in normal form [normal form means as in (1)].  
 (b) Write the operator  $D^2a$  in normal form.

**Solution.**

(a)  $(Da)f(x) = \frac{d}{dx}[a(x)f(x)] = a'(x)f(x) + a(x)f'(x) = (a' + aD)f(x)$

Hence,  $Da = aD + a'$ .

(b)  $(D^2a)f(x) = \frac{d^2}{dx^2}[a(x)f(x)] = \frac{d}{dx}[a'(x)f(x) + a(x)f'(x)] = a''(x)f(x) + 2a'(x)f'(x) + a(x)f''(x)$   
 $= (a'' + 2a'D + aD^2)f(x)$

Hence,  $D^2a = aD^2 + 2a'D + a''$ .

**Alternatively.** We can also use  $Da = aD + a'$  from the previous part and work with the operators directly:  
 $D^2a = D(Da) = D(aD + a') = DaD + Da' = (aD + a')D + a'D + a'' = aD^2 + 2a'D + a''$ .

**Example 39.** Suppose that  $a$  and  $b$  depend on  $x$ . Expand  $(D + a)(D + b)$  in normal form.

**Solution.**  $(D + a)(D + b) = D^2 + Db + aD + ab = D^2 + (bD + b') + aD + ab = D^2 + (a + b)D + ab + b'$

**Comment.** Of course, if  $b$  is a constant, then  $b' = 0$  and we just get the familiar expansion.

**Comment.** At this point, it is not surprising that, in general,  $(D + a)(D + b) \neq (D + b)(D + a)$ .

**Example 40.** Suppose we want to factor  $D^2 + pD + q$  as  $(D + a)(D + b)$ . [ $p, q, a, b$  depend on  $x$ ]

(a) Spell out equations to find  $a$  and  $b$ .

(b) Find all factorizations of  $D^2$ . [An obvious one is  $D^2 = D \cdot D$  but there are others!]

**Solution.**

(a) Matching coefficients with  $(D + a)(D + b) = D^2 + (a + b)D + ab + b'$  (we expanded this in the previous example), we find that we need

$$p = a + b, \quad q = ab + b'.$$

Equivalently,  $a = p - b$  and  $q = (p - b)b + b'$ . The latter is a nonlinear (!) DE for  $b$ . Once solved for  $b$ , we obtain  $a$  as  $a = p - b$ .

(b) This is the case  $p = q = 0$ . The DE for  $b$  becomes  $b' = b^2$ .

Because it is separable (show all details!), we find that  $b(x) = \frac{1}{C - x}$  or  $b(x) = 0$ .

Since  $a = -b$ , we obtain the factorizations  $D^2 = \left(D - \frac{1}{C - x}\right)\left(D + \frac{1}{C - x}\right)$  and  $D^2 = D \cdot D$ .

Our computations show that there are no further factorizations.

**Comment.** Note that this example illustrates that factorization of differential operators is not unique!

For instance,  $D^2 = D \cdot D$  and  $D^2 = \left(D + \frac{1}{x}\right) \cdot \left(D - \frac{1}{x}\right)$  (the case  $C = 0$  above).

**Comment.** In general, the nonlinear DE for  $b$  does not have any polynomial or rational solution (or, in fact, any solution that can be expressed in terms of functions that we are familiar with).

## Solving linear recurrences with constant coefficients

## Motivation: Fibonacci numbers

The numbers  $0, 1, 1, 2, 3, 5, 8, 13, 21, 34, \dots$  are called **Fibonacci numbers**.

They are defined by the recursion  $F_{n+1} = F_n + F_{n-1}$  and  $F_0 = 0, F_1 = 1$ .

How fast are they growing?

Have a look at ratios of Fibonacci numbers:  $\frac{2}{1} = 2, \frac{3}{2} = 1.5, \frac{5}{3} \approx 1.667, \frac{8}{5} = 1.6, \frac{13}{8} = 1.625, \frac{21}{13} = 1.615, \frac{34}{21} = 1.619, \dots$

These ratios approach the **golden ratio**  $\varphi = \frac{1+\sqrt{5}}{2} = 1.618\dots$

In other words, it appears that  $\lim_{n \rightarrow \infty} \frac{F_{n+1}}{F_n} = \frac{1+\sqrt{5}}{2}$ .

We will soon understand where this is coming from.

We can derive all of that using the same ideas as in the case of linear differential equations. The crucial observation that we can write the recursion in operator form:

$$F_{n+1} = F_n + F_{n-1} \quad \text{is equivalent to} \quad (N^2 - N - 1)F_n = 0.$$

Here,  $N$  is the shift operator:  $Na_n = a_{n+1}$ .

**Comment.** Recurrence equations are discrete analogs of differential equations.

For instance, recall that  $f'(x) = \lim_{h \rightarrow 0} \frac{1}{h}[f(x+h) - f(x)]$ .

Setting  $h=1$ , we get the rough estimate  $f'(x) \approx f(x+1) - f(x)$  so that  $D$  is (roughly) approximated by  $N-1$ .

**Example 41.** Find the general solution to the recursion  $a_{n+1} = 7a_n$ .

**Solution.** Note that  $a_n = 7a_{n-1} = 7 \cdot 7a_{n-2} = \dots = 7^n a_0$ .

Hence, the general solution is  $a_n = C \cdot 7^n$ .

**Comment.** This is analogous to  $y' = 7y$  having the general solution  $y(x) = Ce^{7x}$ .

## Solving recurrence equations

**Example 42. ("warmup")** Find the general solution to the recursion  $a_{n+2} = a_{n+1} + 6a_n$ .

**Solution.** The recursion can be written as  $p(N)a_n = 0$  where  $p(N) = N^2 - N - 6 = (N-3)(N+2)$ .

Since  $(N-3)a_n = 0$  has solution  $a_n = C \cdot 3^n$ , and since  $(N+2)a_n = 0$  has solution  $a_n = C \cdot (-2)^n$  (compare previous example), we conclude that the general solution is  $a_n = C_1 \cdot 3^n + C_2 \cdot (-2)^n$ .

**Comment.** This must indeed be the general solution, because the two degrees of freedom  $C_1, C_2$  allow us to match any initial conditions  $a_0 = A, a_1 = B$ : the two equations  $C_1 + C_2 = A$  and  $3C_1 - 2C_2 = B$  in matrix form are  $\begin{bmatrix} 1 & 1 \\ 3 & -2 \end{bmatrix} \begin{bmatrix} C_1 \\ C_2 \end{bmatrix} = \begin{bmatrix} A \\ B \end{bmatrix}$ , which always has a (unique) solution because  $\det\left(\begin{bmatrix} 1 & 1 \\ 3 & -2 \end{bmatrix}\right) = -5 \neq 0$ .

**Example 43.** Let the sequence  $a_n$  be defined by  $a_{n+2} = a_{n+1} + 6a_n$  and  $a_0 = 1, a_1 = 8$ .

- Determine the first few terms of the sequence.
- Find a formula for  $a_n$ .
- Determine  $\lim_{n \rightarrow \infty} \frac{a_{n+1}}{a_n}$ .

**Solution.**

(a)  $a_2 = a_1 + 6a_0 = 14, a_3 = a_2 + 6a_1 = 62, a_4 = 146, \dots$

- (b) The recursion can be written as  $p(N)a_n = 0$  where  $p(N) = N^2 - N - 6$  has roots 3, -2.

Hence,  $a_n = C_1 3^n + C_2 (-2)^n$  and we only need to figure out the two unknowns  $C_1, C_2$ . We can do that using the two initial conditions:  $a_0 = C_1 + C_2 = 1, a_1 = 3C_1 - 2C_2 = 8$ .

Solving, we find  $C_1 = 2$  and  $C_2 = -1$  so that, in conclusion,  $a_n = 2 \cdot 3^n - (-2)^n$ .

**Comment.** Such a formula is sometimes called a **Binet-like formula** (because it is of the same kind as the Binet formula for the Fibonacci numbers that we can derive in the same manner).

- (c) It follows from our formula that  $\lim_{n \rightarrow \infty} \frac{a_{n+1}}{a_n} = 3$  (because  $|3| > |-2|$  so that  $3^n$  dominates  $(-2)^n$ ).

To see this, we need to realize that, for large  $n$ ,  $3^n$  is much larger than  $(-2)^n$  so that we have  $a_n \approx 2 \cdot 3^n$  when  $n$  is large. Hence,  $\frac{a_{n+1}}{a_n} \approx \frac{2 \cdot 3^{n+1}}{2 \cdot 3^n} = 3$ .

Alternatively, to be very precise, we can observe that (by dividing each term by  $3^n$ )

$$\frac{a_{n+1}}{a_n} = \frac{2 \cdot 3^{n+1} - (-2)^{n+1}}{2 \cdot 3^n - (-2)^n} = \frac{2 \cdot 3 + 2 \left(-\frac{2}{3}\right)^n}{2 \cdot 1 - \left(-\frac{2}{3}\right)^n} \quad \text{as } n \rightarrow \infty \quad \frac{2 \cdot 3 + 0}{2 \cdot 1 - 0} = 3.$$

**Example 44.** Consider the sequence  $a_n$  defined by  $a_{n+2} = a_{n+1} + 2a_n$  and  $a_0 = 1, a_1 = 8$ .

- Determine the first few terms of the sequence.
- Find a formula for  $a_n$ .
- Determine  $\lim_{n \rightarrow \infty} \frac{a_{n+1}}{a_n}$ .

**Solution.**

(a)  $a_2 = 10, a_3 = 26$

- (b) The recursion can be written as  $p(N)a_n = 0$  where  $p(N) = N^2 - N - 2$  has roots 2, -1.

Hence,  $a_n = C_1 2^n + C_2 (-1)^n$  and we only need to figure out the two unknowns  $C_1, C_2$ . We can do that using the two initial conditions:  $a_0 = C_1 + C_2 = 1, a_1 = 2C_1 - C_2 = 8$ .

Solving, we find  $C_1 = 3$  and  $C_2 = -2$  so that, in conclusion,  $a_n = 3 \cdot 2^n - 2(-1)^n$ .

- (c) It follows from our formula that  $\lim_{n \rightarrow \infty} \frac{a_{n+1}}{a_n} = 2$  (because  $|2| > |-1|$  so that  $2^n$  dominates  $(-1)^n$ ).

**Comment.** In fact, this already follows from  $a_n = C_1 2^n + C_2 (-1)^n$  provided that  $C_1 \neq 0$ . Since  $a_n = C_2 (-1)^n$  (the case  $C_1 = 0$ ) is not compatible with  $a_0 = 1, a_1 = 8$ , we can conclude  $\lim_{n \rightarrow \infty} \frac{a_{n+1}}{a_n} = 2$  without computing the actual values of  $C_1$  and  $C_2$ .

**Review.** The recurrence  $a_{n+1} = 5a_n$  has general solution  $a_n = C \cdot 5^n$ .

In operator form, the recurrence is  $(N - 5)a_n = 0$ , where  $p(N) = N - 5$  is the characteristic polynomial. The characteristic root 5 corresponds to the solution  $5^n$ .

This is analogous to the case of DEs  $p(D)y = 0$  where a root  $r$  of  $p(D)$  corresponds to the solution  $e^{rx}$ .

**Example 45. (“warmup”)** Find the general solution to the recursion  $a_{n+2} = 4a_{n+1} - 4a_n$ .

**Solution.** The recursion can be written as  $p(N)a_n = 0$  where  $p(N) = N^2 - 4N + 4$  has roots 2, 2.

So a solution is  $2^n$  and, from our discussion of DEs, it is probably not surprising that a second solution is  $n \cdot 2^n$ .

Hence, the general solution is  $a_n = C_1 \cdot 2^n + C_2 \cdot n \cdot 2^n = (C_1 + C_2 n) \cdot 2^n$ .

**Comment.** This is analogous to  $(D - 2)^2 y' = 0$  having the general solution  $y(x) = (C_1 + C_2 x)e^{2x}$ .

**Check!** Let's check that  $a_n = n \cdot 2^n$  indeed satisfies the recursion  $(N - 2)^2 a_n = 0$ .

$(N - 2)n \cdot 2^n = (n + 1)2^{n+1} - 2n \cdot 2^n = 2^{n+1}$ , so that  $(N - 2)^2 n \cdot 2^n = (N - 2)2^{n+1} = 0$ .

Combined, we obtain the following analog of Theorem 20 for recurrence equations (RE):

**Comment.** Sequences that are solutions to such recurrences are called **constant recursive** or **C-finite**.

**Theorem 46.** Consider the homogeneous linear RE with constant coefficients  $p(N)a_n = 0$ .

- If  $r$  is a root of the characteristic polynomial and if  $k$  is its multiplicity, then  $k$  (independent) solutions of the RE are given by  $n^j r^n$  for  $j = 0, 1, \dots, k - 1$ .
- Combining these solutions for all roots, gives the general solution.

**Moreover.** If  $r$  is the sole largest root by absolute value among the roots contributing to  $a_n$ , then  $a_n \approx Cr^n$  (if  $r$  is not repeated—what if it is?) for large  $n$ . In particular, it follows that

$$\lim_{n \rightarrow \infty} \frac{a_{n+1}}{a_n} = r.$$

**Advanced comment.** Things can get weird if there are several roots of the same absolute value. Consider, for instance, the case  $a_n = 2^n + (-2)^n$ . Can you see that, in this case, the limit  $\lim_{n \rightarrow \infty} \frac{a_{n+1}}{a_n}$  doesn't even exist?

**Example 47.** Find the general solution to the recursion  $a_{n+3} = 2a_{n+2} + a_{n+1} - 2a_n$ .

**Solution.** The recursion can be written as  $p(N)a_n = 0$  where  $p(N) = N^3 - 2N^2 - N + 2$  has roots 2, 1, -1. (Here, we may use some help from a computer algebra system to find the roots.)

Hence, the general solution is  $a_n = C_1 \cdot 2^n + C_2 + C_3 \cdot (-1)^n$ .

**Example 48.** Find the general solution to the recursion  $a_{n+3} = 3a_{n+2} - 4a_n$ .

**Solution.** The recursion can be written as  $p(N)a_n = 0$  where  $p(N) = N^3 - 3N^2 + 4$  has roots 2, 2, -1. (Again, we may use some help from a computer algebra system to find the roots.)

Hence, the general solution is  $a_n = (C_1 + C_2 n) \cdot 2^n + C_3 \cdot (-1)^n$ .

**Theorem 49. (Binet's formula)**  $F_n = \frac{1}{\sqrt{5}} \left[ \left( \frac{1+\sqrt{5}}{2} \right)^n - \left( \frac{1-\sqrt{5}}{2} \right)^n \right]$

**Proof.** The recursion  $F_{n+1} = F_n + F_{n-1}$  can be written as  $p(N)a_n = 0$  where  $p(N) = N^2 - N - 1$  has roots

$$\lambda_1 = \frac{1+\sqrt{5}}{2} \approx 1.618, \quad \lambda_2 = \frac{1-\sqrt{5}}{2} \approx -0.618.$$

Hence,  $F_n = C_1 \cdot \lambda_1^n + C_2 \cdot \lambda_2^n$  and we only need to figure out the two unknowns  $C_1, C_2$ . We can do that using the two initial conditions:  $F_0 = C_1 + C_2 \stackrel{!}{=} 0$ ,  $F_1 = C_1 \cdot \frac{1+\sqrt{5}}{2} + C_2 \cdot \frac{1-\sqrt{5}}{2} \stackrel{!}{=} 1$ .

Solving, we find  $C_1 = \frac{1}{\sqrt{5}}$  and  $C_2 = -\frac{1}{\sqrt{5}}$  so that, in conclusion,  $F_n = \frac{1}{\sqrt{5}}(\lambda_1^n - \lambda_2^n)$ , as claimed.  $\square$

**Comment.** For large  $n$ ,  $F_n \approx \frac{1}{\sqrt{5}} \lambda_1^n$  (because  $\lambda_2^n$  becomes very small). In fact,  $F_n = \text{round}\left(\frac{1}{\sqrt{5}} \left(\frac{1+\sqrt{5}}{2}\right)^n\right)$ .

**Back to the quotient of Fibonacci numbers.** In particular, because  $\lambda_1^n$  dominates  $\lambda_2^n$ , it is now transparent that the ratios  $\frac{F_{n+1}}{F_n}$  approach  $\lambda_1 = \frac{1+\sqrt{5}}{2} \approx 1.618$ . To be precise, note that

$$\frac{F_{n+1}}{F_n} = \frac{\frac{1}{\sqrt{5}}(\lambda_1^{n+1} - \lambda_2^{n+1})}{\frac{1}{\sqrt{5}}(\lambda_1^n - \lambda_2^n)} = \frac{\lambda_1^{n+1} - \lambda_2^{n+1}}{\lambda_1^n - \lambda_2^n} = \frac{\lambda_1 - \lambda_2 \left(\frac{\lambda_2}{\lambda_1}\right)^n}{1 - \left(\frac{\lambda_2}{\lambda_1}\right)^n} \xrightarrow{n \rightarrow \infty} \frac{\lambda_1 - 0}{1 - 0} = \lambda_1.$$

In fact, it follows from  $\lambda_2 < 0$  that the ratios  $\frac{F_{n+1}}{F_n}$  approach  $\lambda_1$  in the alternating fashion that we observed numerically earlier. Can you see that?

**Example 50.** Consider the sequence  $a_n$  defined by  $a_{n+2} = 4a_{n+1} + 9a_n$  and  $a_0 = 1, a_1 = 2$ . Determine  $\lim_{n \rightarrow \infty} \frac{a_{n+1}}{a_n}$ .

**Solution.** The recursion can be written as  $p(N)a_n = 0$  where  $p(N) = N^2 - 4N - 9$  has roots  $\frac{4 \pm \sqrt{52}}{2} \approx 5.6056, -1.6056$ . Both roots have to be involved in the solution in order to get integer values.

We conclude that  $\lim_{n \rightarrow \infty} \frac{a_{n+1}}{a_n} = 2 + \sqrt{13} \approx 5.6056$  (because  $|5.6056| > |-1.6056|$ ).

**Example 51. (extra)** Consider the sequence  $a_n$  defined by  $a_{n+2} = 2a_{n+1} + 4a_n$  and  $a_0 = 0, a_1 = 1$ . Determine  $\lim_{n \rightarrow \infty} \frac{a_{n+1}}{a_n}$ .

**First few terms of sequence.** 0, 1, 2, 8, 24, 80, 256, 832, ...

These are actually related to Fibonacci numbers. Indeed,  $a_n = 2^{n-1}F_n$ . Can you prove this directly from the recursions? Alternatively, this follows from comparing the Binet-like formulas.

**Solution.** Proceeding as in the previous example, we find  $\lim_{n \rightarrow \infty} \frac{a_{n+1}}{a_n} = 1 + \sqrt{5} \approx 3.23607$ .

**Comment.** With just a little more work, we find the Binet-like formula  $a_n = \frac{(1+\sqrt{5})^n - (1-\sqrt{5})^n}{2\sqrt{5}}$ .

## Crash course: Eigenvalues and eigenvectors

If  $A\mathbf{x} = \lambda\mathbf{x}$  (and  $\mathbf{x} \neq \mathbf{0}$ ), then  $\mathbf{x}$  is an **eigenvector** of  $A$  with **eigenvalue**  $\lambda$  (just a number).

Note that, for the equation  $A\mathbf{x} = \lambda\mathbf{x}$  to make sense,  $A$  needs to be a square matrix (i.e.  $n \times n$ ).

Key observation:

$$\begin{aligned} A\mathbf{x} &= \lambda\mathbf{x} \\ \iff A\mathbf{x} - \lambda\mathbf{x} &= \mathbf{0} \\ \iff (A - \lambda I)\mathbf{x} &= \mathbf{0} \end{aligned}$$

This homogeneous system has a nontrivial solution  $\mathbf{x}$  if and only if  $\det(A - \lambda I) = 0$ .

To find eigenvectors and eigenvalues of  $A$ :

(a) First, find the eigenvalues  $\lambda$  by solving  $\det(A - \lambda I) = 0$ .

$\det(A - \lambda I)$  is a polynomial in  $\lambda$ , called the **characteristic polynomial** of  $A$ .

(b) Then, for each eigenvalue  $\lambda$ , find corresponding eigenvectors by solving  $(A - \lambda I)\mathbf{x} = \mathbf{0}$ .

**Example 52.** Determine the eigenvalues and eigenvectors of  $A = \begin{bmatrix} 8 & -10 \\ 5 & -7 \end{bmatrix}$ .

**Solution.** The characteristic polynomial is:

$$\det(A - \lambda I) = \det\left(\begin{bmatrix} 8 - \lambda & -10 \\ 5 & -7 - \lambda \end{bmatrix}\right) = (8 - \lambda)(-7 - \lambda) + 50 = \lambda^2 - \lambda - 6 = (\lambda - 3)(\lambda + 2)$$

Hence, the eigenvalues are  $\lambda = 3$  and  $\lambda = -2$ .

- To find an eigenvector for  $\lambda = 3$ , we need to solve  $\begin{bmatrix} 5 & -10 \\ 5 & -10 \end{bmatrix}\mathbf{x} = \mathbf{0}$ .  
Hence,  $\mathbf{x} = \begin{bmatrix} 2 \\ 1 \end{bmatrix}$  is an eigenvector for  $\lambda = 3$ .
- To find an eigenvector for  $\lambda = -2$ , we need to solve  $\begin{bmatrix} 10 & -10 \\ 5 & -5 \end{bmatrix}\mathbf{x} = \mathbf{0}$ .  
Hence,  $\mathbf{x} = \begin{bmatrix} 1 \\ 1 \end{bmatrix}$  is an eigenvector for  $\lambda = -2$ .

**Check!**  $\begin{bmatrix} 8 & -10 \\ 5 & -7 \end{bmatrix} \begin{bmatrix} 2 \\ 1 \end{bmatrix} = \begin{bmatrix} 6 \\ 3 \end{bmatrix} = 3 \cdot \begin{bmatrix} 2 \\ 1 \end{bmatrix}$  and  $\begin{bmatrix} 8 & -10 \\ 5 & -7 \end{bmatrix} \begin{bmatrix} 1 \\ 1 \end{bmatrix} = \begin{bmatrix} -2 \\ -2 \end{bmatrix} = -2 \cdot \begin{bmatrix} 1 \\ 1 \end{bmatrix}$

On the other hand, a random other vector like  $\begin{bmatrix} 1 \\ 2 \end{bmatrix}$  is not an eigenvector:  $\begin{bmatrix} 8 & -10 \\ 5 & -7 \end{bmatrix} \begin{bmatrix} 1 \\ 2 \end{bmatrix} = \begin{bmatrix} -12 \\ -9 \end{bmatrix} \neq \lambda \begin{bmatrix} 1 \\ 2 \end{bmatrix}$ .

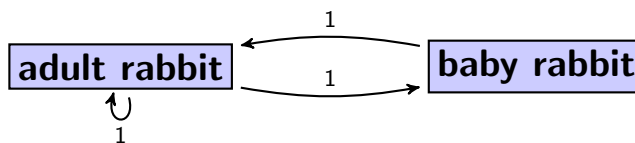
**Example 53. (homework)** Determine the eigenvalues and eigenvectors of  $A = \begin{bmatrix} 1 & -6 \\ 1 & -4 \end{bmatrix}$ .

**Solution. (final answer only)**  $\mathbf{x} = \begin{bmatrix} 2 \\ 1 \end{bmatrix}$  is an eigenvector for  $\lambda = -2$ , and  $\mathbf{x} = \begin{bmatrix} 3 \\ 1 \end{bmatrix}$  is an eigenvector for  $\lambda = -1$ .

**Preview: A system of recurrence equations equivalent to the Fibonacci recurrence**

**Example 54.** We model rabbit reproduction as follows.

Each month, every pair of adult rabbits produces one pair of baby rabbit as offspring. Meanwhile, it takes baby rabbits one month to mature to adults.



**Comment.** In this simplified model, rabbits always come in male/female pairs and no rabbits die. Though these features might make it sound fairly useless, the model may have some merit when describing populations under ideal conditions (unlimited resources) and over short time (no deaths).

**Historical comment.** The question how many rabbits there are after one year, when starting out with a pair of baby rabbits is famously included in the 1202 textbook of the Italian mathematician Leonardo of Pisa, known as Fibonacci.

If we start with one baby rabbit pair, how many adult rabbit pairs are there after  $n$  months?

**Solution.** Let  $a_n$  be the number of adult rabbit pairs after  $n$  months. Likewise,  $b_n$  is the number of baby rabbit pairs. The transition from one month to the next is given by  $a_{n+1} = a_n + b_n$  and  $b_{n+1} = a_n$ . Using  $b_n = a_{n-1}$  (from the second equation) in the first equation, we obtain  $a_{n+1} = a_n + a_{n-1}$ .

The initial conditions are  $a_0 = 0$  and  $a_1 = 1$  (the latter follows from  $b_0 = 1$ ).

It follows that the number  $b_n$  of adult rabbit pairs are precisely the Fibonacci numbers  $F_n$ .

**Comment.** Note that the transition from one month to the next is described by in matrix-vector form as

$$\begin{bmatrix} a_{n+1} \\ b_{n+1} \end{bmatrix} = \begin{bmatrix} a_n + b_n \\ a_n \end{bmatrix} = \begin{bmatrix} 1 & 1 \\ 1 & 0 \end{bmatrix} \begin{bmatrix} a_n \\ b_n \end{bmatrix}.$$

Writing  $\mathbf{a}_n = \begin{bmatrix} a_n \\ b_n \end{bmatrix}$ , this becomes  $\mathbf{a}_{n+1} = \begin{bmatrix} 1 & 1 \\ 1 & 0 \end{bmatrix} \mathbf{a}_n$  with  $\mathbf{a}_0 = \begin{bmatrix} 0 \\ 1 \end{bmatrix}$ .

Consequently,  $\mathbf{a}_n = \begin{bmatrix} 1 & 1 \\ 1 & 0 \end{bmatrix}^n \mathbf{a}_0 = \begin{bmatrix} 1 & 1 \\ 1 & 0 \end{bmatrix}^n \begin{bmatrix} 0 \\ 1 \end{bmatrix}$ .

**Looking ahead.** Can you see how, starting with the Fibonacci recurrence  $F_{n+2} = F_{n+1} + F_n$ , we can arrive at this same system?

**Solution.** Set  $\mathbf{a}_n = \begin{bmatrix} F_{n+1} \\ F_n \end{bmatrix}$ . Then  $\mathbf{a}_{n+1} = \begin{bmatrix} F_{n+2} \\ F_{n+1} \end{bmatrix} = \begin{bmatrix} F_{n+1} + F_n \\ F_{n+1} \end{bmatrix} = \begin{bmatrix} 1 & 1 \\ 1 & 0 \end{bmatrix} \begin{bmatrix} F_{n+1} \\ F_n \end{bmatrix} = \begin{bmatrix} 1 & 1 \\ 1 & 0 \end{bmatrix} \mathbf{a}_n$ .

## Systems of recurrence equations

**Example 55. (review)** Consider the sequence  $a_n$  defined by  $a_{n+2} = 4a_n - 3a_{n+1}$  and  $a_0 = 1$ ,  $a_1 = 2$ . Determine  $\lim_{n \rightarrow \infty} \frac{a_{n+1}}{a_n}$ .

**Solution.** The recursion can be written as  $p(N)a_n = 0$  where  $p(N) = N^2 + 3N - 4$  has roots  $1, -4$ . Hence, the general solution is  $a_n = C_1 + C_2 \cdot (-4)^n$ . We can see that both roots have to be involved in the solution (in other words,  $C_1 \neq 0$  and  $C_2 \neq 0$ ) because  $a_n = C_1$  and  $a_n = C_2 \cdot (-4)^n$  are not consistent with the initial conditions.

We conclude that  $\lim_{n \rightarrow \infty} \frac{a_{n+1}}{a_n} = -4$  (because  $|-4| > |1|$ ).

**Example 56.** Write the (second-order) RE  $a_{n+2} = 4a_n - 3a_{n+1}$ , with  $a_0 = 1$ ,  $a_1 = 2$ , as a system of (first-order) recurrences.

**Solution.** Write  $b_n = a_{n+1}$ .

Then,  $a_{n+2} = 4a_n - 3a_{n+1}$  translates into the first-order system  $\begin{cases} a_{n+1} = b_n \\ b_{n+1} = 4a_n - 3b_n \end{cases}$ .

Let  $\mathbf{a}_n = \begin{bmatrix} a_n \\ b_n \end{bmatrix}$ . Then, in matrix form, the RE is  $\mathbf{a}_{n+1} = \begin{bmatrix} 0 & 1 \\ 4 & -3 \end{bmatrix} \mathbf{a}_n$ , with  $\mathbf{a}_0 = \begin{bmatrix} 1 \\ 2 \end{bmatrix}$ .

**Equivalently.** Write  $\mathbf{a}_n = \begin{bmatrix} a_n \\ a_{n+1} \end{bmatrix}$ . Then we obtain the above system as

$$\mathbf{a}_{n+1} = \begin{bmatrix} a_{n+1} \\ a_{n+2} \end{bmatrix} = \begin{bmatrix} a_{n+1} \\ 4a_n - 3a_{n+1} \end{bmatrix} = \begin{bmatrix} 0 & 1 \\ 4 & -3 \end{bmatrix} \begin{bmatrix} a_n \\ a_{n+1} \end{bmatrix} = \begin{bmatrix} 0 & 1 \\ 4 & -3 \end{bmatrix} \mathbf{a}_n, \quad \mathbf{a}_0 = \begin{bmatrix} 1 \\ 2 \end{bmatrix}.$$

**Comment.** It follows that  $\mathbf{a}_n = \begin{bmatrix} 0 & 1 \\ 4 & -3 \end{bmatrix}^n \mathbf{a}_0 = \begin{bmatrix} 0 & 1 \\ 4 & -3 \end{bmatrix}^n \begin{bmatrix} 1 \\ 2 \end{bmatrix}$ . Solving (systems of) REs is equivalent to computing powers of matrices!

**Comment.** We could also write  $\mathbf{a}_n = \begin{bmatrix} a_{n+1} \\ a_n \end{bmatrix}$  (with the order of the entries reversed). In that case, the system is

$$\mathbf{a}_{n+1} = \begin{bmatrix} a_{n+2} \\ a_{n+1} \end{bmatrix} = \begin{bmatrix} 4a_n - 3a_{n+1} \\ a_{n+1} \end{bmatrix} = \begin{bmatrix} -3 & 4 \\ 1 & 0 \end{bmatrix} \begin{bmatrix} a_{n+1} \\ a_n \end{bmatrix} = \begin{bmatrix} -3 & 4 \\ 1 & 0 \end{bmatrix} \mathbf{a}_n, \quad \mathbf{a}_0 = \begin{bmatrix} 2 \\ 1 \end{bmatrix}.$$

**Comment.** Recall that the **characteristic polynomial** of a matrix  $M$  is  $\det(M - \lambda I)$ . Compute the characteristic polynomial of both  $M = \begin{bmatrix} 0 & 1 \\ 4 & -3 \end{bmatrix}$  and  $M = \begin{bmatrix} -3 & 4 \\ 1 & 0 \end{bmatrix}$ . In both cases, we get  $\lambda^2 + 3\lambda - 4$ , which matches the polynomial  $p(N)$  (also called characteristic polynomial!) in the previous example. This will always happen and explains why both are referred to as the characteristic polynomial.

**Example 57.** Write  $a_{n+3} - 4a_{n+2} + a_{n+1} + 6a_n = 0$  as a system of (first-order) recurrences.

**Solution.** Write  $\mathbf{a}_n = \begin{bmatrix} a_n \\ a_{n+1} \\ a_{n+2} \end{bmatrix}$ . Then we obtain the system

$$\mathbf{a}_{n+1} = \begin{bmatrix} a_{n+1} \\ a_{n+2} \\ a_{n+3} \end{bmatrix} = \begin{bmatrix} a_{n+1} \\ a_{n+2} \\ 4a_{n+2} - a_{n+1} - 6a_n \end{bmatrix} = \begin{bmatrix} 0 & 1 & 0 \\ 0 & 0 & 1 \\ -6 & -1 & 4 \end{bmatrix} \begin{bmatrix} a_n \\ a_{n+1} \\ a_{n+2} \end{bmatrix} = \begin{bmatrix} 0 & 1 & 0 \\ 0 & 0 & 1 \\ -6 & -1 & 4 \end{bmatrix} \mathbf{a}_n.$$

In summary, the RE in matrix form is  $\mathbf{a}_{n+1} = M\mathbf{a}_n$  with  $M$  the matrix above.

**Important comment.** Given a first-order system  $\mathbf{a}_{n+1} = M\mathbf{a}_n$ , it is clear that the solution satisfies  $\mathbf{a}_n = M^n \mathbf{a}_0$ . If you know how to compute matrix powers  $M^n$ , this means you can solve recurrences! On the other hand, we will proceed the other way around. We solve the recurrence and then use that to determine  $M^n$ .

## Solving systems of recurrence equations

The following summarizes how we can solve systems of recurrence equations using eigenvectors. As a bonus, we obtain a way to compute matrix powers.

Each step is spelled out in Example 58 below.

**(solving systems of REs)** To solve  $\mathbf{a}_{n+1} = M\mathbf{a}_n$ , determine the eigenvectors of  $M$ .

- Each  $\lambda$ -eigenvector  $\mathbf{v}$  provides a solution:  $\mathbf{a}_n = \mathbf{v}\lambda^n$  [assuming that  $\lambda \neq 0$ ]
- If there are enough eigenvectors, these combine to the general solution. In that case, we get a **fundamental matrix (solution)**  $\Phi_n$  by placing each solution vector into one column of  $\Phi_n$ .
- If desired, we can compute the **matrix powers**  $M^n$  using any fundamental matrix  $\Phi_n$  as

$$M^n = \Phi_n \Phi_0^{-1}.$$

Note that  $M^n$  is the unique matrix solution to  $\mathbf{a}_{n+1} = M\mathbf{a}_n$  with  $\mathbf{a}_0 = I$  (the identity matrix).

Application: the unique solution to  $\mathbf{a}_{n+1} = M\mathbf{a}_n$ ,  $\mathbf{a}_0 = \mathbf{c}$  is given by  $\mathbf{a}_n = M^n \mathbf{c}$ .

**Why?** If  $\mathbf{a}_n = \mathbf{v}\lambda^n$  for a  $\lambda$ -eigenvector  $\mathbf{v}$ , then  $\mathbf{a}_{n+1} = \mathbf{v}\lambda^{n+1}$  and  $M\mathbf{a}_n = M\mathbf{v}\lambda^n = \lambda\mathbf{v} \cdot \lambda^n = \mathbf{v}\lambda^{n+1}$ .

**Where is this coming from?** When solving single linear recurrences, we found that the basic solutions are of the form  $cr^n$  where  $r \neq 0$  is a root of the characteristic polynomials. To solve  $\mathbf{a}_{n+1} = M\mathbf{a}_n$ , it is therefore natural to look for solutions of the form  $\mathbf{a}_n = \mathbf{c}r^n$  (where  $\mathbf{c} = \begin{bmatrix} c_1 \\ c_2 \end{bmatrix}$ ). Note that  $\mathbf{a}_{n+1} = \mathbf{c}r^{n+1} = r\mathbf{a}_n$ .

Plugging into  $\mathbf{a}_{n+1} = M\mathbf{a}_n$  we find  $\mathbf{c}r^{n+1} = M\mathbf{c}r^n$ .

Cancelling  $r^n$  (just a nonzero number!), this simplifies to  $r\mathbf{c} = M\mathbf{c}$ .

In other words,  $\mathbf{a}_n = \mathbf{c}r^n$  is a solution if and only if  $\mathbf{c}$  is an  $r$ -eigenvector of  $M$ .

**Not enough eigenvectors?** In that case, we know what to do as well (at least in principle): instead of looking only for solutions of the type  $\mathbf{a}_n = \mathbf{v}\lambda^n$ , we also need to look for solutions of the type  $\mathbf{a}_n = (\mathbf{v}n + \mathbf{w})\lambda^n$ . Note that this can only happen if an eigenvalue is a repeated root of the characteristic polynomial.

**Matrix solutions.** A matrix  $\Phi_n$  is a **matrix solution** to  $\mathbf{a}_{n+1} = M\mathbf{a}_n$  if  $\Phi_{n+1} = M\Phi_n$ .  $\Phi_n$  being a matrix solution is equivalent to each column of  $\Phi_n$  being a normal (vector) solution. If the general solution of  $\mathbf{a}_{n+1} = M\mathbf{a}_n$  can be obtained as the linear combination of the columns of  $\Phi_n$ , then  $\Phi_n$  is a **fundamental matrix solution**.

**Why can we compute matrix powers this way?** Recall that, given a first-order system  $\mathbf{a}_{n+1} = M\mathbf{a}_n$ , it is clear that the solution satisfies  $\mathbf{a}_n = M^n \mathbf{a}_0$ . Likewise, a fundamental matrix solution  $\Phi_n$  to the same recurrence satisfies  $\Phi_n = M^n \Phi_0$ . Multiplying both sides by  $\Phi_0^{-1}$  (on the right!) we conclude that  $\Phi_n \Phi_0^{-1} = M^n$ .

**Already know how to compute matrix powers?** If you have taken linear algebra classes, you may have learned that matrix powers  $M^n$  can be computed by diagonalizing the matrix  $M$ . The latter hinges on computing eigenvalues and eigenvectors of  $M$  as well. Compare the two approaches!

**Example 58.** Let  $M = \begin{bmatrix} 8 & -10 \\ 5 & -7 \end{bmatrix}$ .

- Determine the general solution to  $\mathbf{a}_{n+1} = M\mathbf{a}_n$ .
- Determine a **fundamental matrix solution** to  $\mathbf{a}_{n+1} = M\mathbf{a}_n$ .
- Compute  $M^n$ .
- Solve  $\mathbf{a}_{n+1} = M\mathbf{a}_n$ ,  $\mathbf{a}_0 = \begin{bmatrix} 1 \\ 2 \end{bmatrix}$ .

**Solution.**

- (a) Recall that each  $\lambda$ -eigenvector  $\mathbf{v}$  of  $M$  provides us with a solution:  $\mathbf{a}_n = \mathbf{v}\lambda^n$

We computed in Example 52 that  $\begin{bmatrix} 2 \\ 1 \end{bmatrix}$  is an eigenvector for  $\lambda = 3$ , and  $\begin{bmatrix} 1 \\ 1 \end{bmatrix}$  is an eigenvector for  $\lambda = -2$ .

Hence, the general solution is  $C_1 \begin{bmatrix} 2 \\ 1 \end{bmatrix} 3^n + C_2 \begin{bmatrix} 1 \\ 1 \end{bmatrix} (-2)^n$ .

- (b) Note that we can write the general solution as

$$\mathbf{a}_n = C_1 \begin{bmatrix} 2 \\ 1 \end{bmatrix} 3^n + C_2 \begin{bmatrix} 1 \\ 1 \end{bmatrix} (-2)^n = \begin{bmatrix} 2 \cdot 3^n & (-2)^n \\ 3^n & (-2)^n \end{bmatrix} \begin{bmatrix} C_1 \\ C_2 \end{bmatrix}.$$

We call  $\Phi_n = \begin{bmatrix} 2 \cdot 3^n & (-2)^n \\ 3^n & (-2)^n \end{bmatrix}$  the corresponding **fundamental matrix (solution)**.

Note that our general solution is precisely  $\Phi_n \mathbf{c}$  with  $\mathbf{c} = \begin{bmatrix} C_1 \\ C_2 \end{bmatrix}$ .

**Observations.**

- (a) The columns of  $\Phi_n$  are (independent) solutions of the system.
- (b)  $\Phi_n$  solves the RE itself:  $\Phi_{n+1} = M\Phi_n$ .  
[Spell this out in this example! That  $\Phi_n$  solves the RE follows from the definition of matrix multiplication.]
- (c) It follows that  $\Phi_n = M^n \Phi_0$ . Equivalently,  $\Phi_n \Phi_0^{-1} = M^n$ . (See next part!)
- (c) Note that  $\Phi_0 = \begin{bmatrix} 2 & 1 \\ 1 & 1 \end{bmatrix}$ , so that  $\Phi_0^{-1} = \begin{bmatrix} 1 & -1 \\ -1 & 2 \end{bmatrix}$ . It follows that

$$M^n = \Phi_n \Phi_0^{-1} = \begin{bmatrix} 2 \cdot 3^n & (-2)^n \\ 3^n & (-2)^n \end{bmatrix} \begin{bmatrix} 1 & -1 \\ -1 & 2 \end{bmatrix} = \begin{bmatrix} 2 \cdot 3^n - (-2)^n & -2 \cdot 3^n + 2(-2)^n \\ 3^n - (-2)^n & -3^n + 2(-2)^n \end{bmatrix}.$$

**Check.** Let us verify the formula for  $M^n$  in the cases  $n = 0$  and  $n = 1$ :

$$M^0 = \begin{bmatrix} 2-1 & -2+2 \\ 1-1 & -1+2 \end{bmatrix} = \begin{bmatrix} 1 & 0 \\ 0 & 1 \end{bmatrix}$$

$$M^1 = \begin{bmatrix} 2 \cdot 3 - (-2) & -2 \cdot 3 + 2(-2) \\ 3 - (-2) & -3 + 2(-2) \end{bmatrix} = \begin{bmatrix} 8 & -10 \\ 5 & -7 \end{bmatrix}$$

- (d)  $\mathbf{a}_n = M^n \mathbf{a}_0 = \begin{bmatrix} 2 \cdot 3^n - (-2)^n & -2 \cdot 3^n + 2(-2)^n \\ 3^n - (-2)^n & -3^n + 2(-2)^n \end{bmatrix} \begin{bmatrix} 1 \\ 2 \end{bmatrix} = \begin{bmatrix} -2 \cdot 3^n + 3(-2)^n \\ -3^n + 3(-2)^n \end{bmatrix}$

**Sage.** Once we are comfortable with these computations, we can let Sage do them for us.

```
>>> M = matrix([[8,-10],[5,-7]])
```

```
>>> M^2
```

$$\begin{pmatrix} 14 & -10 \\ 5 & -1 \end{pmatrix}$$

Verify that this matrix matches what our formula for  $M^n$  produces for  $n = 2$ . In order to reproduce the general formula for  $M^n$ , we need to first define  $n$  as a symbolic variable:

```
>>> n = var('n')
```

```
>>> M^n
```

$$\begin{pmatrix} 2 \cdot 3^n - (-2)^n & -2 \cdot 3^n + 2(-2)^n \\ 3^n - (-2)^n & -3^n + 2(-2)^n \end{pmatrix}$$

Note that this indeed matches our earlier formula. Can you see how we can read off the eigenvalues and eigenvectors of  $M$  from this formula for  $M^n$ ? Of course, Sage can readily compute these for us directly using, for instance, `M.eigenvectors_right()`. Try it! Can you interpret the output?

**Example 59. (review)** Write the (second-order) RE  $a_{n+2} = a_{n+1} + 2a_n$ , with  $a_0 = 0$ ,  $a_1 = 1$ , as a system of (first-order) recurrences.

**Solution.** If  $\mathbf{a}_n = \begin{bmatrix} a_n \\ a_{n+1} \end{bmatrix}$ , then  $\mathbf{a}_{n+1} = \begin{bmatrix} a_{n+1} \\ a_{n+2} \end{bmatrix} = \begin{bmatrix} a_{n+1} \\ a_{n+1} + 2a_n \end{bmatrix} = \begin{bmatrix} 0 & 1 \\ 2 & 1 \end{bmatrix} \mathbf{a}_n$  with  $\mathbf{a}_0 = \begin{bmatrix} 0 \\ 1 \end{bmatrix}$ .

**Example 60.** Let  $M = \begin{bmatrix} 0 & 1 \\ 2 & 1 \end{bmatrix}$ .

- Determine the general solution to  $\mathbf{a}_{n+1} = M\mathbf{a}_n$ .
- Determine a fundamental matrix solution to  $\mathbf{a}_{n+1} = M\mathbf{a}_n$ .
- Compute  $M^n$ .
- Solve  $\mathbf{a}_{n+1} = M\mathbf{a}_n$ ,  $\mathbf{a}_0 = \begin{bmatrix} 0 \\ 1 \end{bmatrix}$ .

**Solution.**

- Recall that each  $\lambda$ -eigenvector  $\mathbf{v}$  of  $M$  provides us with a solution: namely,  $\mathbf{a}_n = \mathbf{v}\lambda^n$ .

The characteristic polynomial is:  $\det(A - \lambda I) = \det\left(\begin{bmatrix} -\lambda & 1 \\ 2 & 1-\lambda \end{bmatrix}\right) = \lambda^2 - \lambda - 2 = (\lambda - 2)(\lambda + 1)$ .

Hence, the eigenvalues are  $\lambda = 2$  and  $\lambda = -1$ .

- $\lambda = 2$ : Solving  $\begin{bmatrix} -2 & 1 \\ 2 & -1 \end{bmatrix} \mathbf{v} = \mathbf{0}$ , we find that  $\mathbf{v} = \begin{bmatrix} 1 \\ 2 \end{bmatrix}$  is an eigenvector for  $\lambda = 2$ .
- $\lambda = -1$ : Solving  $\begin{bmatrix} 1 & 1 \\ 2 & 2 \end{bmatrix} \mathbf{v} = \mathbf{0}$ , we find that  $\mathbf{v} = \begin{bmatrix} -1 \\ 1 \end{bmatrix}$  is an eigenvector for  $\lambda = -1$ .

Hence, the general solution is  $C_1 \begin{bmatrix} 1 \\ 2 \end{bmatrix} 2^n + C_2 \begin{bmatrix} -1 \\ 1 \end{bmatrix} (-1)^n$ .

- Note that  $C_1 \begin{bmatrix} 1 \\ 2 \end{bmatrix} 2^n + C_2 \begin{bmatrix} -1 \\ 1 \end{bmatrix} (-1)^n = \begin{bmatrix} 2^n & -(-1)^n \\ 2 \cdot 2^n & (-1)^n \end{bmatrix} \begin{bmatrix} C_1 \\ C_2 \end{bmatrix}$ .

Hence, a fundamental matrix solution is  $\Phi_n = \begin{bmatrix} 2^n & -(-1)^n \\ 2 \cdot 2^n & (-1)^n \end{bmatrix}$ .

**Comment.** Other choices are possible and natural. For instance, the order of the two columns is based on our choice of starting with  $\lambda = 2$ . Also, the columns can be scaled by any constant (for instance, using  $-\mathbf{v}$  instead of  $\mathbf{v}$  for  $\lambda = -1$  above, we end up with the same  $\Phi_n$  but with the second column scaled by  $-1$ ). In general, if  $\Phi_n$  is a fundamental matrix solution, then so is  $\Phi_n C$  where  $C$  is an invertible  $2 \times 2$  matrix.

- We compute  $M^n = \Phi_n \Phi_0^{-1}$  using  $\Phi_n = \begin{bmatrix} 2^n & -(-1)^n \\ 2 \cdot 2^n & (-1)^n \end{bmatrix}$ . Since  $\Phi_0^{-1} = \begin{bmatrix} 1 & -1 \\ 2 & 1 \end{bmatrix}^{-1} = \frac{1}{3} \begin{bmatrix} 1 & 1 \\ -2 & 1 \end{bmatrix}$ , we have

$$M^n = \Phi_n \Phi_0^{-1} = \begin{bmatrix} 2^n & -(-1)^n \\ 2 \cdot 2^n & (-1)^n \end{bmatrix} \frac{1}{3} \begin{bmatrix} 1 & 1 \\ -2 & 1 \end{bmatrix} = \frac{1}{3} \begin{bmatrix} 2^n + 2(-1)^n & 2^n - (-1)^n \\ 2 \cdot 2^n - 2(-1)^n & 2 \cdot 2^n + (-1)^n \end{bmatrix}$$

- $\mathbf{a}_n = M^n \mathbf{a}_0 = \frac{1}{3} \begin{bmatrix} 2^n + 2(-1)^n & 2^n - (-1)^n \\ 2 \cdot 2^n - 2(-1)^n & 2 \cdot 2^n + (-1)^n \end{bmatrix} \begin{bmatrix} 0 \\ 1 \end{bmatrix} = \frac{1}{3} \begin{bmatrix} 2^n - (-1)^n \\ 2 \cdot 2^n + (-1)^n \end{bmatrix}$

**Alternative solution of the first part.** We saw in Example 59 that this system can be obtained from  $a_{n+2} = a_{n+1} + 2a_n$  if we set  $\mathbf{a} = \begin{bmatrix} a_n \\ a_{n+1} \end{bmatrix}$ . In Example 44, we found that this RE has solutions  $a_n = 2^n$  and  $a_n = (-1)^n$ .

Correspondingly,  $\mathbf{a}_{n+1} = \begin{bmatrix} 0 & 1 \\ 2 & 1 \end{bmatrix} \mathbf{a}_n$  has solutions  $\mathbf{a}_n = \begin{bmatrix} 2^n \\ 2^{n+1} \end{bmatrix}$  and  $\mathbf{a}_n = \begin{bmatrix} (-1)^n \\ (-1)^{n+1} \end{bmatrix}$ .

These combine to the general solution  $C_1 \begin{bmatrix} 2^n \\ 2^{n+1} \end{bmatrix} + C_2 \begin{bmatrix} (-1)^n \\ (-1)^{n+1} \end{bmatrix}$  (equivalent to our solution above).

**Alternative for last part.** Solve the RE from Example 59 to find  $a_n = \frac{1}{3}(2^n - (-1)^n)$ . The above is  $\mathbf{a}_n = \begin{bmatrix} a_n \\ a_{n+1} \end{bmatrix}$ .

We have learned how to compute  $M^n$  for a matrix  $M$  using its eigenvalues and eigenvectors, as well as solve the system  $\mathbf{a}_{n+1} = M\mathbf{a}_n$ . For diagonal matrices, all this is much simpler:

**Example 61.** If  $M = \begin{bmatrix} 3 & & & \\ & -2 & & \\ & & 5 & \\ & & & 1 \end{bmatrix}$ , what is  $M^n$ ?

Also: what is the solution to  $\mathbf{a}_{n+1} = M\mathbf{a}_n$ ?

**Comment.** Entries that are not printed are meant to be zero (to make the structure of the  $4 \times 4$  matrix more visibly transparent).

**Solution.**  $M^n = \begin{bmatrix} 3^n & & & \\ & (-2)^n & & \\ & & 5^n & \\ & & & 1 \end{bmatrix}$

If this isn't clear to you, multiply out  $M^2$ . What happens?

Also:  $\mathbf{a}_{n+1} = M\mathbf{a}_n$  with  $\mathbf{a}_n = \begin{bmatrix} a_n \\ b_n \\ c_n \\ d_n \end{bmatrix}$  decouples into  $\begin{cases} a_{n+1} = 3a_n \\ b_{n+1} = -2b_n \\ c_{n+1} = 5c_n \\ d_{n+1} = d_n \end{cases}$  which is solved by  $\mathbf{a}_n = \begin{bmatrix} a_n \\ b_n \\ c_n \\ d_n \end{bmatrix} = \begin{bmatrix} 3^n a_0 \\ (-2)^n b_0 \\ 5^n c_0 \\ d_0 \end{bmatrix}$ .

### Example 62. (extra practice)

- Write the recurrence  $a_{n+3} - 4a_{n+2} + a_{n+1} + 6a_n = 0$  as a system  $\mathbf{a}_{n+1} = M\mathbf{a}_n$  of (first-order) recurrences.
- Determine a fundamental matrix solution to  $\mathbf{a}_{n+1} = M\mathbf{a}_n$ .
- Compute  $M^n$ .

**Solution.**

(a) If  $\mathbf{a}_n = \begin{bmatrix} a_n \\ a_{n+1} \\ a_{n+2} \end{bmatrix}$ , then the RE becomes  $\mathbf{a}_{n+1} = M\mathbf{a}_n$  with  $M = \begin{bmatrix} 0 & 1 & 0 \\ 0 & 0 & 1 \\ -6 & -1 & 4 \end{bmatrix}$ .

(b) Because we started with a single (third-order) equation, we can avoid computing eigenvectors and eigenvalues (indeed, we will find these as a byproduct).

By factoring the characteristic equation  $N^3 - 4N^2 + N + 6 = (N - 3)(N - 2)(N + 1)$ , we find that the characteristic roots are  $3, 2, -1$  (these are also precisely the eigenvalues of  $M$ ).

Hence,  $a_n = C_1 \cdot 3^n + C_2 \cdot 2^n + C_3 \cdot (-1)^n$  is the general solution to the initial RE.

Correspondingly, a fundamental matrix solution of the system is  $\Phi_n = \begin{bmatrix} 3^n & 2^n & (-1)^n \\ 3 \cdot 3^n & 2 \cdot 2^n & -(-1)^n \\ 9 \cdot 3^n & 4 \cdot 2^n & (-1)^n \end{bmatrix}$ .

**Note.** This tells us that  $\begin{bmatrix} 1 \\ 3 \\ 9 \end{bmatrix}$  is a 3-eigenvector,  $\begin{bmatrix} 1 \\ 2 \\ 4 \end{bmatrix}$  a 2-eigenvector, and  $\begin{bmatrix} 1 \\ -1 \\ 1 \end{bmatrix}$  a  $-1$ -eigenvector of  $M$ .

(c) Since  $\Phi_{n+1} = M\Phi_n$ , we have  $\Phi_n = M^n\Phi_0$  so that  $M^n = \Phi_n\Phi_0^{-1}$ . This allows us to compute that:

$$M^n = \frac{1}{12} \begin{bmatrix} -6 \cdot 3^n + 12 \cdot 2^n + 6(-1)^n & -3 \cdot 3^n + 8 \cdot 2^n - 5(-1)^n & 3 \cdot 3^n - 4 \cdot 2^n + (-1)^n \\ -18 \cdot 3^n + 24 \cdot 2^n - 6(-1)^n & \dots & \dots \\ -54 \cdot 3^n + 48 \cdot 2^n + 6(-1)^n & \dots & \dots \end{bmatrix}$$

## Systems of differential equations

**Review.** Check out Examples 59 and 60 again. Below we will repeat the same steps, replacing recurrences with differential equations as well as  $\lambda^n$  with  $e^{\lambda x}$ .

**Example 63.** Write the (second-order) initial value problem  $y'' = y' + 2y$ ,  $y(0) = 0$ ,  $y'(0) = 1$  as a first-order system.

**Solution.** If  $\mathbf{y} = \begin{bmatrix} y \\ y' \end{bmatrix}$ , then  $\mathbf{y}' = \begin{bmatrix} y' \\ y'' \end{bmatrix} = \begin{bmatrix} y' \\ y' + 2y \end{bmatrix} = \begin{bmatrix} 0 & 1 \\ 2 & 1 \end{bmatrix} \begin{bmatrix} y \\ y' \end{bmatrix} = \begin{bmatrix} 0 & 1 \\ 2 & 1 \end{bmatrix} \mathbf{y}$  with  $\mathbf{y}(0) = \begin{bmatrix} 0 \\ 1 \end{bmatrix}$ .

This is exactly how we proceeded in Example 59.

**Homework.** Solve this IVP to find  $y(x) = \frac{1}{3}(e^{2x} - e^{-x})$ . Then compare with the next example.

**Example 64. (preview)** Let  $M = \begin{bmatrix} 0 & 1 \\ 2 & 1 \end{bmatrix}$ .

- Determine the general solution to  $\mathbf{y}' = M\mathbf{y}$ .
- Determine a fundamental matrix solution to  $\mathbf{y}' = M\mathbf{y}$ .
- Solve  $\mathbf{y}' = M\mathbf{y}$ ,  $\mathbf{y}(0) = \begin{bmatrix} 0 \\ 1 \end{bmatrix}$ .

**Solution.** In Example 60, we only need to replace  $2^n$  by  $e^{2x}$  (root 2) and  $(-1)^n$  by  $e^{-x}$  (root -1)!

- The general solution is  $C_1 \begin{bmatrix} 1 \\ 2 \end{bmatrix} e^{2x} + C_2 \begin{bmatrix} -1 \\ 1 \end{bmatrix} e^{-x}$ .
- A fundamental matrix solution is  $\Phi(x) = \begin{bmatrix} e^{2x} & -e^{-x} \\ 2 \cdot e^{2x} & e^{-x} \end{bmatrix}$ .
- $\mathbf{y}(x) = \frac{1}{3} \begin{bmatrix} e^{2x} - e^{-x} \\ 2 \cdot e^{2x} + e^{-x} \end{bmatrix}$

**Preview.** The special fundamental matrix  $M^n$  will be replaced by  $e^{Mx}$ , the **matrix exponential**.

**Example 65.** Write the (third-order) differential equation  $y''' = 3y'' - 2y' + y$  as a system of (first-order) differential equations.

**Solution.** If  $\mathbf{y} = \begin{bmatrix} y \\ y' \\ y'' \end{bmatrix}$ , then  $\mathbf{y}' = \begin{bmatrix} y' \\ y'' \\ y''' \end{bmatrix} = \begin{bmatrix} y' \\ y'' \\ 3y'' - 2y' + y \end{bmatrix} = \begin{bmatrix} 0 & 1 & 0 \\ 0 & 0 & 1 \\ 1 & -2 & 3 \end{bmatrix} \begin{bmatrix} y \\ y' \\ y'' \end{bmatrix} = \begin{bmatrix} 0 & 1 & 0 \\ 0 & 0 & 1 \\ 1 & -2 & 3 \end{bmatrix} \mathbf{y}$ .

For short,  $\mathbf{y}' = \begin{bmatrix} 0 & 1 & 0 \\ 0 & 0 & 1 \\ 1 & -2 & 3 \end{bmatrix} \mathbf{y}$

**Comment.** This is one reason why we care about systems of DEs, even if we work with just one function.

**Example 66.** Consider the following system of (second-order) initial value problems:

$$\begin{aligned} y_1'' &= 2y_1' - 3y_2' + 7y_2 & y_1(0) &= 2, \quad y_1'(0) = 3, \quad y_2(0) = -1, \quad y_2'(0) = 1 \\ y_2'' &= 4y_1' + y_2' - 5y_1 \end{aligned}$$

Write it as a first-order initial value problem in the form  $\mathbf{y}' = M\mathbf{y}$ ,  $\mathbf{y}(0) = \mathbf{y}_0$ .

**Solution.** If  $\mathbf{y} = \begin{bmatrix} y_1 \\ y_2 \\ y_1' \\ y_2' \end{bmatrix}$ , then  $\mathbf{y}' = \begin{bmatrix} y_1' \\ y_2' \\ y_1'' \\ y_2'' \end{bmatrix} = \begin{bmatrix} y_1' \\ y_2' \\ 2y_1' - 3y_2' + 7y_2 \\ 4y_1' + y_2' - 5y_1 \end{bmatrix} = \begin{bmatrix} 0 & 0 & 1 & 0 \\ 0 & 0 & 0 & 1 \\ 0 & 7 & 2 & -3 \\ -5 & 0 & 4 & 1 \end{bmatrix} \begin{bmatrix} y_1 \\ y_2 \\ y_1' \\ y_2' \end{bmatrix} = \begin{bmatrix} 0 & 0 & 1 & 0 \\ 0 & 0 & 0 & 1 \\ 0 & 7 & 2 & -3 \\ -5 & 0 & 4 & 1 \end{bmatrix} \mathbf{y}$ .

For short, the system translates into  $\mathbf{y}' = \begin{bmatrix} 0 & 0 & 1 & 0 \\ 0 & 0 & 0 & 1 \\ 0 & 7 & 2 & -3 \\ -5 & 0 & 4 & 1 \end{bmatrix} \mathbf{y}$  with  $\mathbf{y}(0) = \begin{bmatrix} 2 \\ -1 \\ 3 \\ 1 \end{bmatrix}$ .

## Solving systems of differential equations

We can solve the system  $\mathbf{y}' = M\mathbf{y}$  exactly as we solved  $\mathbf{a}_{n+1} = M\mathbf{a}_n$ .

The only difference is that we replace each  $\lambda^n$  (for characteristic root / eigenvalue  $\lambda$ ) with  $e^{\lambda x}$ . In fact, as shown in the examples below, we can translate back and forth at any stage.

**(solving systems of DEs)** To solve  $\mathbf{y}' = M\mathbf{y}$ , determine the eigenvectors of  $M$ .

- Each  $\lambda$ -eigenvector  $\mathbf{v}$  provides a solution:  $\mathbf{y}(x) = \mathbf{v}e^{\lambda x}$
- If there are enough eigenvectors, these combine to the general solution.  
In that case, we get a **fundamental matrix (solution)**  $\Phi(x)$  by placing each solution vector into one column of  $\Phi(x)$ .
- If desired, we can find the **matrix exponential**  $e^{Mx}$  using any fundamental matrix  $\Phi(x)$ :

$$e^{Mx} = \Phi(x)\Phi(0)^{-1}.$$

Note that  $e^{Mx}$  is the unique matrix solution to  $\mathbf{y}' = M\mathbf{y}$ ,  $\mathbf{y}(0) = I$  (the identity matrix).

Application: the unique solution to  $\mathbf{y}' = M\mathbf{y}$ ,  $\mathbf{y}(0) = \mathbf{c}$  is given by  $\mathbf{y}(x) = e^{Mx}\mathbf{c}$ .

**Note.** Unlike with  $M^n$ , it might not be clear what the **matrix exponential**  $e^{Mx}$  really is. One way to think about it is that we are defining  $e^{Mx}$  as the solution to the IVP  $\mathbf{y}' = M\mathbf{y}$ ,  $\mathbf{y}(0) = I$ . This is equivalent to how one can define the ordinary exponential  $e^x$  as the solution to  $y' = y$ ,  $y(0) = 1$ .

[In a little bit, we will also discuss how to think about the matrix exponential  $e^{Mx}$  using power series.]

**Comment.** If there are not enough eigenvectors, then we know what to do (at least in principle): instead of looking only for solutions of the type  $\mathbf{y}(x) = \mathbf{v}e^{\lambda x}$ , we also need to look for solutions of the type  $\mathbf{y}(x) = (\mathbf{v}x + \mathbf{w})e^{\lambda x}$ . Note that this can only happen if an eigenvalue is a repeated root of the characteristic polynomial.

**Why does this work?** Compare this to our method of solving systems of REs and for computing matrix powers  $M^n$ . The above conclusion about systems of DEs can be deduced along the same lines as what we did for REs:

- For instance, for the first part, let us look for solutions of  $\mathbf{y}' = M\mathbf{y}$  of the form  $\mathbf{y}(x) = \mathbf{v}e^{\lambda x}$ .  
Note that  $\mathbf{y}' = \lambda \mathbf{v}e^{\lambda x} = \lambda \mathbf{y}$ . Plugging into  $\mathbf{y}' = M\mathbf{y}$ , we find  $\lambda \mathbf{y} = M\mathbf{y}$ .  
In other words,  $\mathbf{y}(x) = \mathbf{v}e^{\lambda x}$  is a solution if and only if  $\mathbf{v}$  is a  $\lambda$ -eigenvector of  $M$ .
- If  $\Phi(x)$  is a fundamental matrix solution, then so is  $\Psi(x) = \Phi(x)C$  for every constant matrix  $C$ . (Why?!)  
Therefore,  $\Psi(x) = \Phi(x)\Phi(0)^{-1}$  is a fundamental matrix solution with  $\Psi(0) = \Phi(0)\Phi(0)^{-1} = I$ .  
But  $e^{Mx}$  is defined to be the unique such solution, so that  $\Psi(x) = e^{Mx}$ .

**Example 67.** Let  $M = \begin{bmatrix} -1 & 6 \\ -1 & 4 \end{bmatrix}$ .

- Determine the general solution to  $\mathbf{y}' = M\mathbf{y}$ .
- Determine a fundamental matrix solution to  $\mathbf{y}' = M\mathbf{y}$ .
- Compute  $e^{Mx}$ .
- Solve the initial value problem  $\mathbf{y}' = M\mathbf{y}$  with  $\mathbf{y}(0) = \begin{bmatrix} 1 \\ 1 \end{bmatrix}$ .
- Compute  $M^n$ .
- Solve  $\mathbf{a}_{n+1} = M\mathbf{a}_n$  with  $\mathbf{a}_0 = \begin{bmatrix} 1 \\ 1 \end{bmatrix}$ .

**Solution.**

- (a) We determine the eigenvectors of  $M$ . The characteristic polynomial is:

$$\det(M - \lambda I) = \det\left(\begin{bmatrix} -1-\lambda & 6 \\ -1 & 4-\lambda \end{bmatrix}\right) = (-1-\lambda)(4-\lambda) + 6 = \lambda^2 - 3\lambda + 2 = (\lambda-1)(\lambda-2)$$

Hence, the eigenvalues are  $\lambda = 1$  and  $\lambda = 2$ .

- $\lambda = 1$ : Solving  $\begin{bmatrix} -2 & 6 \\ -1 & 3 \end{bmatrix}\mathbf{v} = \mathbf{0}$ , we find that  $\mathbf{v} = \begin{bmatrix} 3 \\ 1 \end{bmatrix}$  is an eigenvector for  $\lambda = 1$ .
- $\lambda = 2$ : Solving  $\begin{bmatrix} -3 & 6 \\ -1 & 2 \end{bmatrix}\mathbf{v} = \mathbf{0}$ , we find that  $\mathbf{v} = \begin{bmatrix} 2 \\ 1 \end{bmatrix}$  is an eigenvector for  $\lambda = 2$ .

Hence, the general solution is  $C_1 \begin{bmatrix} 3 \\ 1 \end{bmatrix} e^x + C_2 \begin{bmatrix} 2 \\ 1 \end{bmatrix} e^{2x}$ .

- (b) The corresponding fundamental matrix solution is  $\Phi = \begin{bmatrix} 3e^x & 2e^{2x} \\ e^x & e^{2x} \end{bmatrix}$ .
- (c) Note that  $\Phi(0) = \begin{bmatrix} 3 & 2 \\ 1 & 1 \end{bmatrix}$ , so that  $\Phi(0)^{-1} = \begin{bmatrix} 1 & -2 \\ -1 & 3 \end{bmatrix}$ . It follows that

$$e^{Mx} = \Phi(x)\Phi(0)^{-1} = \begin{bmatrix} 3e^x & 2e^{2x} \\ e^x & e^{2x} \end{bmatrix} \begin{bmatrix} 1 & -2 \\ -1 & 3 \end{bmatrix} = \begin{bmatrix} 3e^x - 2e^{2x} & -6e^x + 6e^{2x} \\ e^x - e^{2x} & -2e^x + 3e^{2x} \end{bmatrix}.$$

- (d) The solution to the IVP is  $\mathbf{y}(x) = e^{Mx} \begin{bmatrix} 1 \\ 1 \end{bmatrix} = \begin{bmatrix} 3e^x - 2e^{2x} & -6e^x + 6e^{2x} \\ e^x - e^{2x} & -2e^x + 3e^{2x} \end{bmatrix} \begin{bmatrix} 1 \\ 1 \end{bmatrix} = \begin{bmatrix} -3e^x + 4e^{2x} \\ -e^x + 2e^{2x} \end{bmatrix}$ .

**Note.** If we hadn't already computed  $e^{Mx}$ , we would use the general solution and solve for the appropriate values of  $C_1$  and  $C_2$ . Do it that way as well!

- (e) From the first part, it follows that  $\mathbf{a}_{n+1} = M\mathbf{a}_n$  has general solution  $C_1 \begin{bmatrix} 3 \\ 1 \end{bmatrix} + C_2 \begin{bmatrix} 2 \\ 1 \end{bmatrix} 2^n$ .  
(Note that  $1^n = 1$ .)

The corresponding fundamental matrix solution is  $\Phi_n = \begin{bmatrix} 3 & 2 \cdot 2^n \\ 1 & 2^n \end{bmatrix}$ .

As above,  $\Phi_0 = \begin{bmatrix} 3 & 2 \\ 1 & 1 \end{bmatrix}$ , so that  $\Phi(0)^{-1} = \begin{bmatrix} 1 & -2 \\ -1 & 3 \end{bmatrix}$  and

$$M^n = \Phi_n \Phi_0^{-1} = \begin{bmatrix} 3 & 2 \cdot 2^n \\ 1 & 2^n \end{bmatrix} \begin{bmatrix} 1 & -2 \\ -1 & 3 \end{bmatrix} = \begin{bmatrix} 3 - 2 \cdot 2^n & -6 + 6 \cdot 2^n \\ 1 - 2^n & -2 + 3 \cdot 2^n \end{bmatrix}.$$

**Important.** Compare with our computation for  $e^{Mx}$ . Can you see how this was basically the same computation? Write down  $M^n$  directly from  $e^{Mx}$ .

- (f) The (unique) solution is  $\mathbf{a}_n = M^n \begin{bmatrix} 1 \\ 1 \end{bmatrix} = \begin{bmatrix} 3 - 2 \cdot 2^n & -6 + 6 \cdot 2^n \\ 1 - 2^n & -2 + 3 \cdot 2^n \end{bmatrix} \begin{bmatrix} 1 \\ 1 \end{bmatrix} = \begin{bmatrix} -3 + 4 \cdot 2^n \\ -1 + 2 \cdot 2^n \end{bmatrix}$ .

**Important.** Again, compare with the earlier IVP! Without work, we can write down one from the other.

We purposefully omit details of some computations in the next example to highlight how it proceeds along the same lines as Example 58.

**Important.** In fact, we can translate back and forth (without additional computations) by simply replacing  $3^n$  and  $(-2)^n$  by  $e^{3x}$  and  $e^{-2x}$ .

**Example 68. (extra practice)** Let  $M = \begin{bmatrix} 8 & -10 \\ 5 & -7 \end{bmatrix}$ .

- Determine the general solution to  $\mathbf{y}' = M\mathbf{y}$ .
- Determine a fundamental matrix solution to  $\mathbf{y}' = M\mathbf{y}$ .
- Compute  $e^{Mx}$ .
- Solve the initial value problem  $\mathbf{y}' = M\mathbf{y}$  with  $\mathbf{y}(0) = \begin{bmatrix} 0 \\ 1 \end{bmatrix}$ .

**Solution.** (See Example 58 for more details on the analogous computations.)

- Recall that each  $\lambda$ -eigenvector  $\mathbf{v}$  of  $M$  provides us with a solution: namely,  $\mathbf{y}(x) = \mathbf{v}e^{\lambda x}$ .  
We computed earlier that  $\begin{bmatrix} 2 \\ 1 \end{bmatrix}$  is an eigenvector for  $\lambda = 3$ , and  $\begin{bmatrix} 1 \\ 1 \end{bmatrix}$  is an eigenvector for  $\lambda = -2$ .  
Hence, the general solution is  $C_1 \begin{bmatrix} 2 \\ 1 \end{bmatrix} e^{3x} + C_2 \begin{bmatrix} 1 \\ 1 \end{bmatrix} e^{-2x}$ .
- The corresponding fundamental matrix solution is  $\Phi(x) = \begin{bmatrix} 2 \cdot e^{3x} & e^{-2x} \\ e^{3x} & e^{-2x} \end{bmatrix}$ .  
[Note that our general solution is precisely  $\Phi(x) \begin{bmatrix} C_1 \\ C_2 \end{bmatrix}$ .]
- Since  $\Phi(0) = \begin{bmatrix} 2 & 1 \\ 1 & 1 \end{bmatrix}$ , we have  $\Phi(0)^{-1} = \begin{bmatrix} 1 & -1 \\ -1 & 2 \end{bmatrix}$ . It follows that

$$e^{Mx} = \Phi(x)\Phi(0)^{-1} = \begin{bmatrix} 2 \cdot e^{3x} & e^{-2x} \\ e^{3x} & e^{-2x} \end{bmatrix} \begin{bmatrix} 1 & -1 \\ -1 & 2 \end{bmatrix} = \begin{bmatrix} 2 \cdot e^{3x} - e^{-2x} & -2 \cdot e^{3x} + 2e^{-2x} \\ e^{3x} - e^{-2x} & -e^{3x} + 2e^{-2x} \end{bmatrix}.$$

**Check.** Let us verify the formula for  $e^{Mx}$  in the simple case  $x = 0$ :  $e^{M0} = \begin{bmatrix} 2-1 & -2+2 \\ 1-1 & -1+2 \end{bmatrix} = \begin{bmatrix} 1 & 0 \\ 0 & 1 \end{bmatrix}$

- The solution to the IVP is  $\mathbf{y}(x) = e^{Mx} \begin{bmatrix} 0 \\ 1 \end{bmatrix} = \begin{bmatrix} -2 \cdot e^{3x} + 2e^{-2x} \\ -e^{3x} + 2e^{-2x} \end{bmatrix}$  (the second column of  $e^{Mx}$ ).

**Sage.** We can compute the matrix exponential in Sage as follows:

```
>>> M = matrix([[8,-10],[5,-7]])
```

```
>>> exp(M*x)
```

$$\begin{pmatrix} (2e^{5x} - 1)e^{-2x} & -2(e^{5x} - 1)e^{-2x} \\ (e^{5x} - 1)e^{-2x} & -(e^{5x} - 2)e^{-2x} \end{pmatrix}$$

Note that this indeed matches the result of our computation.

[By the way, the variable  $x$  is pre-defined as a symbolic variable in Sage. That's why, unlike for  $n$  in the computation of  $M^n$ , we did not need to use `x = var('x')` first.]

**Example 69.** Suppose that  $e^{Mx} = \frac{1}{10} \begin{bmatrix} e^x + 9e^{2x} & 3e^x - 3e^{2x} \\ 3e^x - 3e^{2x} & 9e^x + e^{2x} \end{bmatrix}$ .

- Without doing any computations, determine  $M^n$ .
- What is  $M$ ?
- Without doing any computations, determine the eigenvalues and eigenvectors of  $M$ .
- From those, write down a simple fundamental matrix solution to  $\mathbf{y}' = M\mathbf{y}$ .
- From that fundamental matrix solution, how can we compute  $e^{Mx}$ ? (If we didn't know it already...)
- Having computed  $e^{Mx}$ , what is a simple check that we can (should!) make?

**Solution.**

- Since  $e^x$  and  $e^{2x}$  correspond to eigenvalues 1 and 2, we just need to replace these by  $1^n = 1$  and  $2^n$ :

$$M^n = \frac{1}{10} \begin{bmatrix} 1 + 9 \cdot 2^n & 3 - 3 \cdot 2^n \\ 3 - 3 \cdot 2^n & 9 + 2^n \end{bmatrix}$$

- We can simply set  $n = 1$  in our formula for  $M^n$ , to get  $M = \frac{1}{10} \begin{bmatrix} 19 & -3 \\ -3 & 11 \end{bmatrix}$ .

- The eigenvalues are 1 and 2 (because  $e^{Mx}$  contains the exponentials  $e^x$  and  $e^{2x}$ ).

Looking at the coefficients of  $e^x$  in the first column of  $e^{Mx}$ , we see that  $\begin{bmatrix} 1 \\ 3 \end{bmatrix}$  is a 1-eigenvector.

[We can also look the second column of  $e^{Mx}$ , to obtain  $\begin{bmatrix} 3 \\ 9 \end{bmatrix}$  which is a multiple and thus equivalent.]

Likewise, by looking at the coefficients of  $e^{2x}$ , we see that  $\begin{bmatrix} 9 \\ -3 \end{bmatrix}$  or, equivalently,  $\begin{bmatrix} -3 \\ 1 \end{bmatrix}$  is a 2-eigenvector.

**Comment.** To see where this is coming from, keep in mind that, associated to a  $\lambda$ -eigenvector  $\mathbf{v}$ , we have the corresponding solution  $\mathbf{y}(x) = \mathbf{v}e^{\lambda x}$  of the DE  $\mathbf{y}' = M\mathbf{y}$ . On the other hand, the columns of  $e^{Mx}$  are solutions to that DE and, therefore, must be linear combinations of these  $\mathbf{v}e^{\lambda x}$ .

- From the eigenvalues and eigenvectors, we know that  $\begin{bmatrix} 1 \\ 3 \end{bmatrix}e^x$  and  $\begin{bmatrix} -3 \\ 1 \end{bmatrix}e^{2x}$  are solutions (and that the general solutions consists of the linear combinations of these two).

Selecting these as the columns, we obtain the fundamental matrix solution  $\Phi(x) = \begin{bmatrix} e^x & -3e^{2x} \\ 3e^x & e^{2x} \end{bmatrix}$ .

**Comment.** The *fundamental* refers to the fact that the columns combine to the general solution.

The *matrix solution* means that  $\Phi(x)$  itself satisfies the DE: namely, we have  $\Phi' = M\Phi$ . That this is the case is a consequence of matrix multiplication (namely, say, the second column of  $M\Phi$  is defined to be  $M$  times the second column of  $\Phi$ ; but that column is a vector solution and therefore solves the DE).

- We can compute  $e^{Mx}$  as  $e^{Mx} = \Phi(x)\Phi(0)^{-1}$ .

If  $\Phi(x) = \begin{bmatrix} e^x & -3e^{2x} \\ 3e^x & e^{2x} \end{bmatrix}$ , then  $\Phi(0) = \begin{bmatrix} 1 & -3 \\ 3 & 1 \end{bmatrix}$  and, hence,  $\Phi(0)^{-1} = \frac{1}{10} \begin{bmatrix} 1 & 3 \\ -3 & 1 \end{bmatrix}$ . It follows that

$$e^{Mx} = \Phi(x)\Phi(0)^{-1} = \begin{bmatrix} e^x & -3e^{2x} \\ 3e^x & e^{2x} \end{bmatrix} \frac{1}{10} \begin{bmatrix} 1 & 3 \\ -3 & 1 \end{bmatrix} = \frac{1}{10} \begin{bmatrix} e^x + 9e^{2x} & 3e^x - 3e^{2x} \\ 3e^x - 3e^{2x} & 9e^x + e^{2x} \end{bmatrix}.$$

- We can check that  $e^{Mx}$  equals the identity matrix if we set  $x = 0$ :

$$\frac{1}{10} \begin{bmatrix} e^x + 9e^{2x} & 3e^x - 3e^{2x} \\ 3e^x - 3e^{2x} & 9e^x + e^{2x} \end{bmatrix} \xrightarrow{x=0} \frac{1}{10} \begin{bmatrix} 1+9 & 3-3 \\ 3-3 & 9+1 \end{bmatrix} = \begin{bmatrix} 1 & 0 \\ 0 & 1 \end{bmatrix}$$

This check does not require much effort and can even be done in our head while writing down  $e^{Mx}$ . There is really no excuse for not doing it!

### Another perspective on the matrix exponential

**Review.** We achieved the milestone to introduce a **matrix exponential** in such a way that we can treat a system of DEs, say  $\mathbf{y}' = M\mathbf{y}$  with  $\mathbf{y}(0) = \mathbf{c}$ , just as if the matrix  $M$  was a number: namely, the unique solution is simply  $\mathbf{y} = e^{Mx}\mathbf{c}$ .

The price to pay is that the matrix  $e^{Mx}$  requires some work to actually compute (and proceeds by first determining a different matrix solution  $\Phi(x)$  using eigenvectors and eigenvalues). We offer below another way to think about  $e^{Mx}$  (using Taylor series).

**(exponential function)**  $e^x$  is the unique solution to  $y' = y$ ,  $y(0) = 1$ .

From here, it follows that  $e^x = 1 + x + \frac{x^2}{2!} + \frac{x^3}{3!} + \dots$

The latter is the Taylor series for  $e^x$  at  $x = 0$  that we have seen in Calculus II.

**Important note.** We can actually construct this infinite sum directly from  $y' = y$  and  $y(0) = 1$ .

Indeed, observe how each term, when differentiated, produces the term before it. For instance,  $\frac{d}{dx} \frac{x^3}{3!} = \frac{x^2}{2!}$ .

**Review.** We defined the **matrix exponential**  $e^{Mx}$  as the unique matrix solution to the IVP

$$\mathbf{y}' = M\mathbf{y}, \quad \mathbf{y}(0) = I.$$

We next observe that we can also make sense of the matrix exponential  $e^{Mx}$  as a power series.

**Theorem 70.** Let  $M$  be  $n \times n$ . Then the **matrix exponential** satisfies

$$e^M = I + M + \frac{1}{2!}M^2 + \frac{1}{3!}M^3 + \dots$$

**Proof.** Define  $\Phi(x) = I + Mx + \frac{1}{2!}M^2x^2 + \frac{1}{3!}M^3x^3 + \dots$

$$\begin{aligned} \Phi'(x) &= \frac{d}{dx} \left[ I + Mx + \frac{1}{2!}M^2x^2 + \frac{1}{3!}M^3x^3 + \dots \right] \\ &= 0 + M + M^2x + \frac{1}{2!}M^3x^2 + \dots = M\Phi(x). \end{aligned}$$

Clearly,  $\Phi(0) = I$ . Therefore,  $\Phi(x)$  is the fundamental matrix solution to  $\mathbf{y}' = M\mathbf{y}$ ,  $\mathbf{y}(0) = I$ .

But that's precisely how we defined  $e^{Mx}$  earlier. It follows that  $\Phi(x) = e^{Mx}$ . Now set  $x = 1$ . □

**Example 71.** If  $A = \begin{bmatrix} 2 & 0 \\ 0 & 5 \end{bmatrix}$ , then  $A^{100} = \begin{bmatrix} 2^{100} & 0 \\ 0 & 5^{100} \end{bmatrix}$ .

**Example 72.** If  $A = \begin{bmatrix} 2 & 0 \\ 0 & 5 \end{bmatrix}$ , then  $e^A = \begin{bmatrix} 1 & 0 \\ 0 & 1 \end{bmatrix} + \begin{bmatrix} 2 & 0 \\ 0 & 5 \end{bmatrix} + \frac{1}{2!} \begin{bmatrix} 2^2 & 0 \\ 0 & 5^2 \end{bmatrix} + \dots = \begin{bmatrix} e^2 & 0 \\ 0 & e^5 \end{bmatrix}$ .

Clearly, this works to obtain  $e^D$  for every diagonal matrix  $D$ .

In particular, for  $Ax = \begin{bmatrix} 2x & 0 \\ 0 & 5x \end{bmatrix}$ ,  $e^{Ax} = \begin{bmatrix} 1 & 0 \\ 0 & 1 \end{bmatrix} + \begin{bmatrix} 2x & 0 \\ 0 & 5x \end{bmatrix} + \frac{1}{2!} \begin{bmatrix} (2x)^2 & 0 \\ 0 & (5x)^2 \end{bmatrix} + \dots = \begin{bmatrix} e^{2x} & 0 \\ 0 & e^{5x} \end{bmatrix}$ .

The following is a preview of how the matrix exponential deals with repeated characteristic roots.

**Example 73.** Determine  $e^{Ax}$  for  $A = \begin{bmatrix} 0 & 1 \\ 0 & 0 \end{bmatrix}$ .

**Solution.** If we compute eigenvalues, we find that we get  $\lambda = 0, 0$  (multiplicity 2) but there is only one 0-eigenvector (up to multiples). This means we are stuck with this approach—however, see next extra section.

The key here is to observe that  $A^2 = \begin{bmatrix} 0 & 0 \\ 0 & 0 \end{bmatrix}$ . It follows that  $e^{Ax} = I + Ax = \begin{bmatrix} 1 & 0 \\ 0 & 1 \end{bmatrix} + \begin{bmatrix} 0 & x \\ 0 & 0 \end{bmatrix} = \begin{bmatrix} 1 & x \\ 0 & 1 \end{bmatrix}$ .

**Extra: The case of repeated eigenvalues with too few eigenvectors**

**Review.** To construct a fundamental matrix solution  $\Phi(x)$  to  $\mathbf{y}' = M\mathbf{y}$ , we compute eigenvectors: Given a  $\lambda$ -eigenvector  $\mathbf{v}$ , we have the corresponding solution  $\mathbf{y}(x) = \mathbf{v}e^{\lambda x}$ .

If there are enough eigenvectors, we can collect these as columns to obtain  $\Phi(x)$ .

The next example illustrates how to proceed if there are not enough eigenvectors.

In that case, instead of looking only for solutions of the type  $\mathbf{y}(x) = \mathbf{v}e^{\lambda x}$ , we also need to look for solutions of the type  $\mathbf{y}(x) = (\mathbf{v}x + \mathbf{w})e^{\lambda x}$ . This can only happen if an eigenvalue is a repeated root of the characteristic polynomial.

**Example 74.** Let  $M = \begin{bmatrix} 8 & 4 \\ -1 & 4 \end{bmatrix}$ .

- Determine the general solution to  $\mathbf{y}' = M\mathbf{y}$ .
- Determine a fundamental matrix solution to  $\mathbf{y}' = M\mathbf{y}$ .
- Compute  $e^{Mx}$ .
- Solve the initial value problem  $\mathbf{y}' = M\mathbf{y}$  with  $\mathbf{y}(0) = \begin{bmatrix} 1 \\ 0 \end{bmatrix}$ .

**Solution.**

- We determine the eigenvectors of  $M$ . The characteristic polynomial is:

$$\det(M - \lambda I) = \det\left(\begin{bmatrix} 8 - \lambda & 4 \\ -1 & 4 - \lambda \end{bmatrix}\right) = (8 - \lambda)(4 - \lambda) + 4 = \lambda^2 - 12\lambda + 36 = (\lambda - 6)(\lambda - 6)$$

Hence, the eigenvalues are  $\lambda = 6, 6$  (meaning that 6 has multiplicity 2).

- To find eigenvectors  $\mathbf{v}$  for  $\lambda = 6$ , we need to solve  $\begin{bmatrix} 2 & 4 \\ -1 & -2 \end{bmatrix}\mathbf{v} = \mathbf{0}$ .  
Hence,  $\mathbf{v} = \begin{bmatrix} -2 \\ 1 \end{bmatrix}$  is an eigenvector for  $\lambda = 6$ . There is no independent second eigenvector.

- We therefore search for a solution of the form  $\mathbf{y}(x) = (\mathbf{v}x + \mathbf{w})e^{\lambda x}$  with  $\lambda = 6$ .

$$\mathbf{y}'(x) = (\lambda \mathbf{v}x + \lambda \mathbf{w} + \mathbf{v})e^{\lambda x} \stackrel{!}{=} M\mathbf{y} = (M\mathbf{v}x + M\mathbf{w})e^{\lambda x}$$

Equating coefficients of  $x$ , we need  $\lambda \mathbf{v} = M\mathbf{v}$  and  $\lambda \mathbf{w} + \mathbf{v} = M\mathbf{w}$ .

Hence,  $\mathbf{v}$  must be an eigenvector (which we already computed); we choose  $\mathbf{v} = \begin{bmatrix} -2 \\ 1 \end{bmatrix}$ .

[Note that any multiple of  $\mathbf{y}(x)$  will be another solution, so it doesn't matter which multiple of  $\begin{bmatrix} -2 \\ 1 \end{bmatrix}$  we choose.]

$$\lambda \mathbf{w} + \mathbf{v} = M\mathbf{w} \text{ or } (M - \lambda)\mathbf{w} = \mathbf{v} \text{ then becomes } \begin{bmatrix} 2 & 4 \\ -1 & -2 \end{bmatrix}\mathbf{w} = \begin{bmatrix} -2 \\ 1 \end{bmatrix}.$$

One solution is  $\mathbf{w} = \begin{bmatrix} -1 \\ 0 \end{bmatrix}$ . [We only need one.]

Hence, the general solution is  $C_1 \begin{bmatrix} -2 \\ 1 \end{bmatrix} e^{6x} + C_2 \left( \begin{bmatrix} -2 \\ 1 \end{bmatrix} x + \begin{bmatrix} -1 \\ 0 \end{bmatrix} \right) e^{6x}$ .

- The corresponding fundamental matrix solution is  $\Phi = \begin{bmatrix} -2e^{6x} & -(2x+1)e^{6x} \\ e^{6x} & xe^{6x} \end{bmatrix}$ .

- Note that  $\Phi(0) = \begin{bmatrix} -2 & -1 \\ 1 & 0 \end{bmatrix}$ , so that  $\Phi(0)^{-1} = \begin{bmatrix} 0 & 1 \\ -1 & -2 \end{bmatrix}$ . It follows that

$$e^{Mx} = \Phi(x)\Phi(0)^{-1} = \begin{bmatrix} -2e^{6x} & -(2x+1)e^{6x} \\ e^{6x} & xe^{6x} \end{bmatrix} \begin{bmatrix} 0 & 1 \\ -1 & -2 \end{bmatrix} = \begin{bmatrix} (2x+1)e^{6x} & 4xe^{6x} \\ -xe^{6x} & -(2x-1)e^{6x} \end{bmatrix}.$$

- The solution to the IVP is  $\mathbf{y}(x) = e^{Mx} \begin{bmatrix} 1 \\ 0 \end{bmatrix} = \begin{bmatrix} (2x+1)e^{6x} & 4xe^{6x} \\ -xe^{6x} & -(2x-1)e^{6x} \end{bmatrix} \begin{bmatrix} 1 \\ 0 \end{bmatrix} = \begin{bmatrix} (2x+1)e^{6x} \\ -xe^{6x} \end{bmatrix}$ .

## Phase portraits and phase plane analysis

Our goal is to visualize the solutions to systems of equations. This works particularly well in the case of systems of two differential equations. A system that can be written as

$$\begin{aligned}\frac{dx}{dt} &= f(x, y) \\ \frac{dy}{dt} &= g(x, y)\end{aligned}$$

is called **autonomous** because it doesn't depend on the independent variable  $t$ .

**Comment.** Can you show that if  $x(t)$  and  $y(t)$  are a pair of solutions, then so is the pair  $x(t+t_0)$  and  $y(t+t_0)$ ?

We can visualize solutions to such a system by plotting the points  $(x(t), y(t))$  for increasing values of  $t$  so that we get a curve (and we can attach an arrow to indicate the direction we're flowing along that curve). Each such curve is called the **trajectory** of a solution.

Even better, we can do such a **phase portrait** without solving to get a formula for  $(x(t), y(t))$ ! That's because we can combine the two equations to get  $\frac{dy}{dx} = \frac{g(x, y)}{f(x, y)}$ , which allows us to make a slope field! If a trajectory passes through a point  $(x, y)$ , then we know that the slope at that point must be  $\frac{dy}{dx} = \frac{g(x, y)}{f(x, y)}$ .

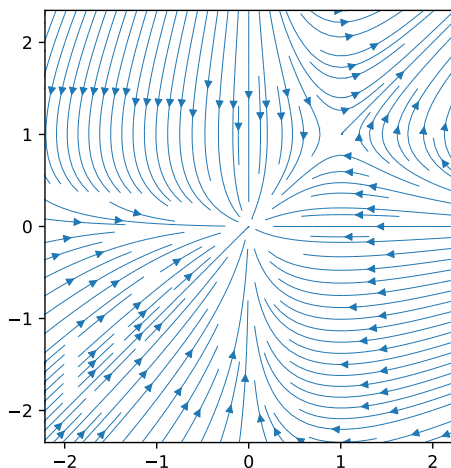
This allows us to sketch trajectories. However, it does not tell us everything about the corresponding solution  $(x(t), y(t))$  because we don't know at which times  $t$  the solution passes through the points on the curve.

However, we can visualize the speed with which a solution passes through the trajectory by attaching to a point  $(x, y)$  not only the slope  $\frac{g(x, y)}{f(x, y)}$  but the vector  $\begin{bmatrix} f(x, y) \\ g(x, y) \end{bmatrix}$ . That vector has the same direction as the slope but it also tells us in which direction we are moving and how fast (by its magnitude).

**Example 75.** Sketch some trajectories for the system  $\frac{dx}{dt} = x \cdot (y - 1)$ ,  $\frac{dy}{dt} = y \cdot (x - 1)$ .

**Solution.** Let's look at the point  $(x, y) = (2, -1)$ , for instance. Then the DEs tell us that  $\frac{dx}{dt} = x \cdot (y - 1) = -4$  and  $\frac{dy}{dt} = y \cdot (x - 1) = -1$ . We therefore attach the vector  $\left(\frac{dx}{dt}, \frac{dy}{dt}\right) = (-4, -1)$  to  $(x, y) = (2, -1)$ .

Note that if we use  $\frac{dy}{dx} = \frac{y \cdot (x - 1)}{x \cdot (y - 1)}$  directly, we find the slope  $\frac{dy}{dx} = \frac{-1}{-4} = \frac{1}{4}$ . This is slightly less information because it doesn't tell us that we are moving "left and down" as the arrows in the following plot indicate:



**Comment.** In this example, we can solve the slope-field equation  $\frac{dy}{dx} = \frac{y(x-1)}{x(y-1)}$  using separation of variables.

Do it! We end up with the implicit solutions  $y - \ln|y| = x - \ln|x| + C$ .

If we plot these curves for various values of  $C$ , we get trajectories in the plot above. However, note that none of this solving is needed for plotting by itself.

**Sage.** We can make Sage create such phase portraits for us!

```
>>> x,y = var('x y')
```

```
>>> streamline_plot((x*(y-1),y*(x-1)), (x,-3,3), (y,-3,3))
```

### Equilibrium solutions

$(x_0, y_0)$  is an **equilibrium point** of the system  $\frac{dx}{dt} = f(x, y)$ ,  $\frac{dy}{dt} = g(x, y)$  if

$$f(x_0, y_0) = 0 \quad \text{and} \quad g(x_0, y_0) = 0.$$

In that case, we have the **constant (equilibrium) solution**  $x(t) = x_0$ ,  $y(t) = y_0$ .

**Comment.** Equilibrium points are also called **critical points** (or stationary points or rest points).

In a phase portrait, the equilibrium solutions are just a single point.

Recall that every other solution  $(x(t), y(t))$  corresponds to a curve (parametrized by  $t$ ), called the **trajectory** of the solution (and we can adorn it with an arrow that indicates the direction of the “flow” of the solution).

We can learn a lot from how solutions behave near equilibrium points.

An equilibrium point is called:

- **stable** if all nearby solutions remain close to the equilibrium point;
- **asymptotically stable** if all nearby solutions remain close and “flow into” the equilibrium;
- **unstable** if it is not stable (some nearby solutions “flow away” from the equilibrium).

**Comment.** Note that asymptotically stable is a stronger condition than stable. A typical example of a stable, but not asymptotically stable, equilibrium point is one where nearby solutions loop around the equilibrium point without coming closer to it.

**Advanced comment.** For asymptotically stable, we kept the condition that nearby solutions remain close because there are “weird” instances where trajectories come arbitrarily close to the equilibrium, then “flow away” but eventually “flow into” (this would constitute an unstable equilibrium point).

**Example 76. (cont’d)** Consider again the system  $\frac{dx}{dt} = x \cdot (y - 1)$ ,  $\frac{dy}{dt} = y \cdot (x - 1)$ .

- (a) Determine the equilibrium points.
- (b) Using the phase portrait from Example 75, classify the stability of each equilibrium point.

**Solution.**

- (a) We solve  $x(y - 1) = 0$  (that is,  $x = 0$  or  $y = 1$ ) and  $y(x - 1) = 0$  (that is,  $x = 1$  or  $y = 0$ ).

We conclude that the equilibrium points are  $(0, 0)$  and  $(1, 1)$ .

- (b)  $(0, 0)$  is asymptotically stable (because all nearby solutions “flow into”  $(0, 0)$ ).

$(1, 1)$  is unstable (because some nearby solutions “flow away” from  $(1, 1)$ ).

**Comment.** We will soon learn how to determine stability without the need for a plot.

**Comment.** If you look carefully at the phase portrait near  $(1, 1)$ , you can see that certain solutions get attracted at first to  $(1, 1)$  and then “flow away” at the last moment. This suggests that there is a single trajectory which actually “flows into”  $(1, 1)$ . This constellation is typical and is called a **saddle point**.

## Phase portraits of autonomous linear differential equations

**Example 77.** Consider the system  $\frac{dx}{dt} = y - 5x$ ,  $\frac{dy}{dt} = 4x - 2y$ .

- Determine the general solution.
- Make a phase portrait. Can you connect it with the general solution?
- Determine all equilibrium points and their stability.

**Solution.**

(a) Note that we can write this in matrix form as  $\begin{bmatrix} x \\ y \end{bmatrix}' = M \begin{bmatrix} x \\ y \end{bmatrix}$  with  $M = \begin{bmatrix} -5 & 1 \\ 4 & -2 \end{bmatrix}$ .

$M$  has  $-1$ -eigenvector  $\begin{bmatrix} 1 \\ 4 \end{bmatrix}$  as well as  $-6$ -eigenvector  $\begin{bmatrix} -1 \\ 1 \end{bmatrix}$ .

Hence, the general solution is  $\begin{bmatrix} x(t) \\ y(t) \end{bmatrix} = C_1 \begin{bmatrix} 1 \\ 4 \end{bmatrix} e^{-t} + C_2 \begin{bmatrix} -1 \\ 1 \end{bmatrix} e^{-6t}$ .

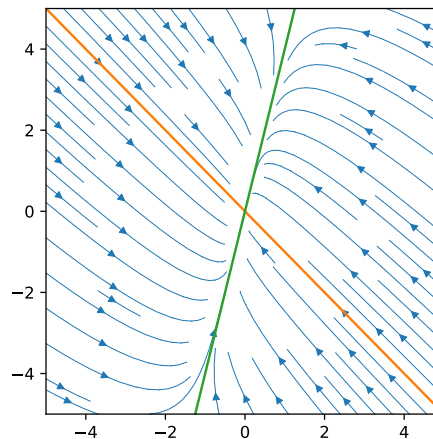
(b) We can have Sage make such a plot for us:

```
>>> x,y = var('x y')
streamline_plot((-5*x+y,4*x-2*y), (x,-4,4), (y,-4,4))
```

**Question.** In our plot, we also highlighted two lines through the origin. Can you explain their significance?

**Explanation.** The lines correspond to the special solutions  $C_1 \begin{bmatrix} 1 \\ 4 \end{bmatrix} e^{-t}$  (green) and  $C_2 \begin{bmatrix} -1 \\ 1 \end{bmatrix} e^{-6t}$  (orange). For each, the trajectories consist of points that are multiples of the vectors  $\begin{bmatrix} 1 \\ 4 \end{bmatrix}$  and  $\begin{bmatrix} -1 \\ 1 \end{bmatrix}$ , respectively.

Note that each such solution starts at a point on one of the lines and then “flows” into the origin. (Because  $e^{-t}$  and  $e^{-6t}$  approach zero for large  $t$ .)



**Question.** Consider a point like  $(4, 4)$ . Can you explain why the trajectory through that point doesn't go somewhat straight to  $(0, 0)$  but rather flows nearly parallel to the orange line towards the green line?

**Explanation.** A solution through  $(4, 4)$  is of the form  $\begin{bmatrix} x(t) \\ y(t) \end{bmatrix} = C_1 \begin{bmatrix} 1 \\ 4 \end{bmatrix} e^{-t} + C_2 \begin{bmatrix} -1 \\ 1 \end{bmatrix} e^{-6t}$  (like any other solution). Note that, if we increase  $t$ , then  $e^{-6t}$  becomes small much faster than  $e^{-t}$ .

As a consequence, we quickly get  $\begin{bmatrix} x(t) \\ y(t) \end{bmatrix} \approx C_1 \begin{bmatrix} 1 \\ 4 \end{bmatrix} e^{-t}$ , where the right-hand side is on the green line.

(c) The only equilibrium point is  $(0, 0)$  and it is asymptotically stable.

We can see this from the phase portrait but we can also determine it from the DE and our solution: first, solving  $y - 5x = 0$  and  $4x - 2y = 0$  we only get the unique solution  $x = 0, y = 0$ , which means that only  $(0, 0)$  is an equilibrium point. On the other hand, the general solution shows that every solution approaches  $(0, 0)$  as  $t \rightarrow \infty$  because both  $e^{-t}$  and  $e^{-6t}$  approach 0.

**In general.** This is typical: if both eigenvalues are negative, then the equilibrium is asymptotically stable. If at least one eigenvalue is positive, then the equilibrium is unstable.

**Example 78.** Consider the system  $\frac{dx}{dt} = 5x - y$ ,  $\frac{dy}{dt} = 2y - 4x$ .

- Determine the general solution.
- Make a phase portrait.
- Determine all equilibrium points and their stability.

**Solution.**

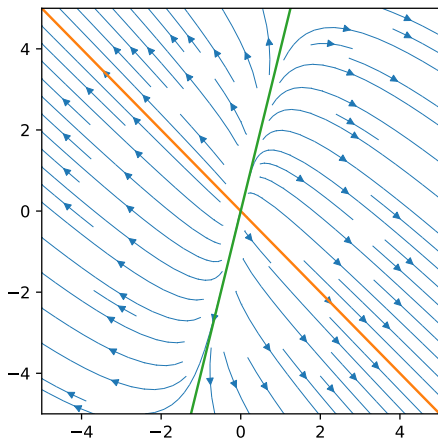
- (a) Note that we can write this in matrix form as  $\begin{bmatrix} x \\ y \end{bmatrix}' = M \begin{bmatrix} x \\ y \end{bmatrix}$  with  $M = -\begin{bmatrix} -5 & 1 \\ 4 & -2 \end{bmatrix}$ , where the matrix is exactly  $-1$  times what it was in Example 77.

Consequently,  $M$  has  $1$ -eigenvector  $\begin{bmatrix} 1 \\ 4 \end{bmatrix}$  as well as  $6$ -eigenvector  $\begin{bmatrix} -1 \\ 1 \end{bmatrix}$ . (Can you explain why the eigenvectors are the same and the eigenvalues changed sign?)

Thus, the general solution is  $\begin{bmatrix} x(t) \\ y(t) \end{bmatrix} = C_1 \begin{bmatrix} 1 \\ 4 \end{bmatrix} e^t + C_2 \begin{bmatrix} -1 \\ 1 \end{bmatrix} e^{6t}$ .

- (b) We again have Sage make the plot for us:

```
>>> x,y = var('x y')
streamline_plot((5*x-y,-4*x+2*y), (x,-4,4), (y,-4,4))
```



Note that the phase portrait is identical to the one in Example 77, except that the arrows are reversed.

- (c) The only equilibrium point is  $(0,0)$  and it is unstable.

We can see this from the phase portrait but we can also see it readily from our general solution  $\begin{bmatrix} x(t) \\ y(t) \end{bmatrix} = C_1 \begin{bmatrix} 1 \\ 4 \end{bmatrix} e^t + C_2 \begin{bmatrix} -1 \\ 1 \end{bmatrix} e^{6t}$  because  $e^t$  and  $e^{6t}$  go to  $\infty$  as  $t \rightarrow \infty$ .

**In general.** If at least one eigenvalue is positive, then the equilibrium is unstable.

**Example 79.** Suppose the system  $\frac{dx}{dt} = f(x, y)$ ,  $\frac{dy}{dt} = g(x, y)$  has general solution  $\begin{bmatrix} x(t) \\ y(t) \end{bmatrix} = C_1 \begin{bmatrix} 1 \\ 4 \end{bmatrix} e^{-t} + C_2 \begin{bmatrix} -1 \\ 1 \end{bmatrix} e^{6t}$ . Determine all equilibrium points and their stability.

**Solution.** Recall that equilibrium points correspond to constant solutions. Clearly, the only constant solution is the zero solution  $\begin{bmatrix} x(t) \\ y(t) \end{bmatrix} = \begin{bmatrix} 0 \\ 0 \end{bmatrix}$ . Equivalently, the only equilibrium point is  $(0,0)$ .

Since  $e^{6t} \rightarrow \infty$  as  $t \rightarrow \infty$ , we conclude that the equilibrium is unstable. (Note that the solution  $C_2 \begin{bmatrix} -1 \\ 1 \end{bmatrix} e^{6t}$  starts arbitrarily near to  $(0,0)$  but always “flows away”).

## Review: Linearizations of nonlinear functions

Recall from Calculus I that a function  $f(x)$  around a point  $x_0$  has the linearization

$$f(x) \approx f(x_0) + f'(x_0)(x - x_0).$$

Here, the right-hand side is the linearization and we also know it as the tangent line to  $f(x)$  at  $x_0$ .

Recall from Calculus III that a function  $f(x, y)$  around a point  $(x_0, y_0)$  has the linearization

$$f(x, y) \approx f(x_0, y_0) + f_x(x_0, y_0)(x - x_0) + f_y(x_0, y_0)(y - y_0).$$

Again, the right-hand side is the linearization. This time, it describes the tangent plane to  $f(x, y)$  at  $(x_0, y_0)$ .

Recall that  $f_x = \frac{\partial}{\partial x} f(x, y)$  and  $f_y = \frac{\partial}{\partial y} f(x, y)$  are the partial derivatives of  $f$ .

**Example 80.** Determine the linearization of the function  $3 + 2xy^2$  at  $(2, 1)$ .

**Solution.** If  $f(x, y) = 3 + 2xy^2$ , then  $f_x = 2y^2$  and  $f_y = 4xy$ . In particular,  $f_x(2, 1) = 2$  and  $f_y(2, 1) = 8$ . Accordingly, the linearization is  $f(2, 1) + f_x(2, 1)(x - 2) + f_y(2, 1)(y - 1) = 7 + 2(x - 2) + 8(y - 1)$ .

It follows that a vector function  $\mathbf{f}(x, y) = \begin{bmatrix} f(x, y) \\ g(x, y) \end{bmatrix}$  around a point  $(x_0, y_0)$  has the linearization

$$\begin{aligned} \begin{bmatrix} f(x, y) \\ g(x, y) \end{bmatrix} &\approx \begin{bmatrix} f(x_0, y_0) \\ g(x_0, y_0) \end{bmatrix} + \begin{bmatrix} f_x(x_0, y_0) \\ g_x(x_0, y_0) \end{bmatrix} (x - x_0) + \begin{bmatrix} f_y(x_0, y_0) \\ g_y(x_0, y_0) \end{bmatrix} (y - y_0) \\ &= \begin{bmatrix} f(x_0, y_0) \\ g(x_0, y_0) \end{bmatrix} + \underbrace{\begin{bmatrix} f_x(x_0, y_0) & f_y(x_0, y_0) \\ g_x(x_0, y_0) & g_y(x_0, y_0) \end{bmatrix}}_{=J(x_0, y_0)} \begin{bmatrix} x - x_0 \\ y - y_0 \end{bmatrix}. \end{aligned}$$

The matrix  $J(x, y) = \begin{bmatrix} f_x & f_y \\ g_x & g_y \end{bmatrix}$  is called the **Jacobian matrix** of  $\mathbf{f}(x, y)$ .

**Example 81.** Determine the linearization of the vector function  $\begin{bmatrix} 3 + 2xy^2 \\ x(y^3 - 2x) \end{bmatrix}$  at  $(2, 1)$ .

**Solution.** If  $\begin{bmatrix} f(x, y) \\ g(x, y) \end{bmatrix} = \begin{bmatrix} 3 + 2xy^2 \\ x(y^3 - 2x) \end{bmatrix}$ , then the Jacobian matrix is

$$J(x, y) = \begin{bmatrix} f_x & f_y \\ g_x & g_y \end{bmatrix} = \begin{bmatrix} 2y^2 & 4xy \\ y^3 - 4x & 3xy^2 \end{bmatrix}.$$

In particular,  $J(2, 1) = \begin{bmatrix} 2 & 8 \\ -7 & 6 \end{bmatrix}$ . The linearization is  $\begin{bmatrix} f(2, 1) \\ g(2, 1) \end{bmatrix} + J(2, 1) \begin{bmatrix} x - 2 \\ y - 1 \end{bmatrix} = \begin{bmatrix} 7 \\ -6 \end{bmatrix} + \begin{bmatrix} 2 & 8 \\ -7 & 6 \end{bmatrix} \begin{bmatrix} x - 2 \\ y - 1 \end{bmatrix}$ .

**Important comment.** If we multiply out the matrix-vector product, then we get  $\begin{bmatrix} 7 + 2(x - 2) + 8(y - 1) \\ -6 - 7(x - 2) + 6(y - 1) \end{bmatrix}$ .

In the first component we get exactly what we got for the linearization of  $f(x, y)$  in the previous example. Likewise, the second component is the linearization of  $g(x, y)$  by itself.

**Stability of autonomous linear differential equations**

**Example 82. (spiral source, spiral sink, center point)**

- (a) Analyze the system  $\frac{d}{dt} \begin{bmatrix} x \\ y \end{bmatrix} = \begin{bmatrix} 1 & 1 \\ -4 & 1 \end{bmatrix} \begin{bmatrix} x \\ y \end{bmatrix}$ .
- (b) Analyze the system  $\frac{d}{dt} \begin{bmatrix} x \\ y \end{bmatrix} = -\begin{bmatrix} 1 & 1 \\ -4 & 1 \end{bmatrix} \begin{bmatrix} x \\ y \end{bmatrix}$ .
- (c) Analyze the system  $\frac{d}{dt} \begin{bmatrix} x \\ y \end{bmatrix} = \begin{bmatrix} 0 & 1 \\ -4 & 0 \end{bmatrix} \begin{bmatrix} x \\ y \end{bmatrix}$ .

**Solution.**

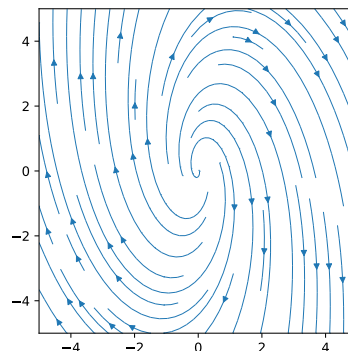
- (a) The eigenvalues are  $\lambda = 1 \pm 2i$  and the general solution, in real form, is:

$$\begin{bmatrix} x(t) \\ y(t) \end{bmatrix} = C_1 \begin{bmatrix} \cos(2t) \\ -2\sin(2t) \end{bmatrix} e^t + C_2 \begin{bmatrix} \sin(2t) \\ 2\cos(2t) \end{bmatrix} e^t$$

In this case, the origin is a **spiral source** which is an unstable equilibrium (note that it follows from  $e^t \rightarrow \infty$  as  $t \rightarrow \infty$  that all solutions “flow away” from the origin because they have increasing amplitude).

**Review.**  $\begin{bmatrix} \cos(t) \\ \sin(t) \end{bmatrix}$  parametrizes the unit circle.

Similarly,  $\begin{bmatrix} \cos(t) \\ 2\sin(t) \end{bmatrix}$  parametrizes an ellipse.

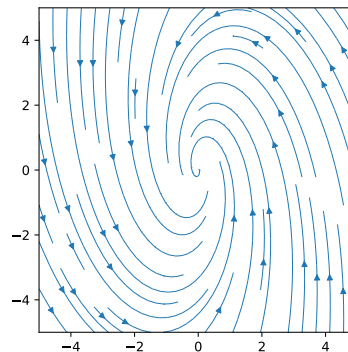


- (b) The eigenvalues are  $\lambda = -1 \pm 2i$  and the general solution, in real form, is:

$$\begin{bmatrix} x(t) \\ y(t) \end{bmatrix} = C_1 \begin{bmatrix} \cos(2t) \\ -2\sin(2t) \end{bmatrix} e^{-t} + C_2 \begin{bmatrix} \sin(2t) \\ 2\cos(2t) \end{bmatrix} e^{-t}$$

In this case, the origin is a **spiral sink** which is an asymptotically stable equilibrium (note that it follows from  $e^{-t} \rightarrow 0$  as  $t \rightarrow \infty$  that all solutions “flow into” the origin because their amplitude goes to zero).

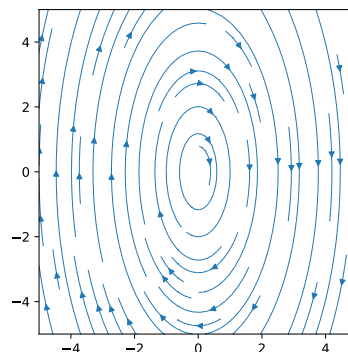
**Comment.** Note that  $\begin{bmatrix} x(t) \\ y(t) \end{bmatrix}$  solves the first system if and only if  $\begin{bmatrix} x(-t) \\ y(-t) \end{bmatrix}$  is a solution to the second. Consequently, the phase portraits look alike but all arrows are reversed.



- (c) The eigenvalues are  $\lambda = \pm 2i$  and the general solution, in real form, is:

$$\begin{bmatrix} x(t) \\ y(t) \end{bmatrix} = C_1 \begin{bmatrix} \cos(2t) \\ -2\sin(2t) \end{bmatrix} + C_2 \begin{bmatrix} \sin(2t) \\ 2\cos(2t) \end{bmatrix}$$

In this case, the origin is a **center point** which is a stable equilibrium (note that the solutions are periodic with period  $\pi$  and therefore loop around the origin; with each trajectory a perfect ellipse).



**Review.** In Example 77, we considered the system  $\frac{dx}{dt} = y - 5x$ ,  $\frac{dy}{dt} = 4x - 2y$ .

We found that it has general solution  $\begin{bmatrix} x(t) \\ y(t) \end{bmatrix} = C_1 \begin{bmatrix} 1 \\ 4 \end{bmatrix} e^{-t} + C_2 \begin{bmatrix} -1 \\ 1 \end{bmatrix} e^{-6t}$ .

In particular, the only equilibrium point is  $(0, 0)$  and it is asymptotically stable.

The following example is an inhomogeneous version of Example 77:

**Example 83.** Analyze the system  $\frac{dx}{dt} = y - 5x + 3$ ,  $\frac{dy}{dt} = 4x - 2y$ .

In particular, determine the general solution as well as all equilibrium points and their stability.

**Solution.** As reviewed above, we looked at the corresponding homogeneous system in Example 77 and found that its general solution is  $\begin{bmatrix} x(t) \\ y(t) \end{bmatrix} = C_1 \begin{bmatrix} 1 \\ 4 \end{bmatrix} e^{-t} + C_2 \begin{bmatrix} -1 \\ 1 \end{bmatrix} e^{-6t}$ .

Note that we can write the present system in matrix form as  $\begin{bmatrix} x \\ y \end{bmatrix}' = M \begin{bmatrix} x \\ y \end{bmatrix} + \begin{bmatrix} 3 \\ 0 \end{bmatrix}$  with  $M = \begin{bmatrix} -5 & 1 \\ 4 & -2 \end{bmatrix}$ .

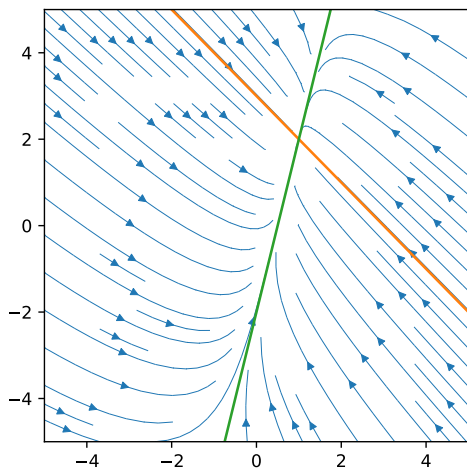
To find the equilibrium point, we solve  $M \begin{bmatrix} x \\ y \end{bmatrix} + \begin{bmatrix} 3 \\ 0 \end{bmatrix} = 0$  to find  $\begin{bmatrix} x \\ y \end{bmatrix} = -M^{-1} \begin{bmatrix} 3 \\ 0 \end{bmatrix} = -\frac{1}{6} \begin{bmatrix} -2 & -1 \\ -4 & -5 \end{bmatrix} \begin{bmatrix} 3 \\ 0 \end{bmatrix} = \begin{bmatrix} 1 \\ 2 \end{bmatrix}$ .

The fact that  $\begin{bmatrix} 1 \\ 2 \end{bmatrix}$  is an equilibrium point means that  $\begin{bmatrix} x \\ y \end{bmatrix} = \begin{bmatrix} 1 \\ 2 \end{bmatrix}$  is a particular solution!

(Make sure that you see that it has exactly the form we expect from the method of undetermined coefficients!)

Thus, the general solution must be  $\begin{bmatrix} x(t) \\ y(t) \end{bmatrix} = \begin{bmatrix} 1 \\ 2 \end{bmatrix} + C_1 \begin{bmatrix} 1 \\ 4 \end{bmatrix} e^{-t} + C_2 \begin{bmatrix} -1 \\ 1 \end{bmatrix} e^{-6t}$  (that is, the particular solution plus the general solution of the homogeneous system that we solved in Example 77).

As a result, the phase portrait is going to look just as in Example 77 but shifted by  $\begin{bmatrix} 1 \\ 2 \end{bmatrix}$ :



Because both eigenvalues ( $-1$  and  $-6$ ) are negative,  $\begin{bmatrix} 1 \\ 2 \end{bmatrix}$  is an asymptotically stable equilibrium point. More precisely, it is what is called a **nodal source**.

As we have started to observe, the eigenvalues determine the stability of the equilibrium point in the case of an autonomous linear 2-dimensional systems. The following table gives an overview.

**Important.** Note that such a system must be of the form  $\frac{d}{dt} \begin{bmatrix} x \\ y \end{bmatrix} = M \begin{bmatrix} x \\ y \end{bmatrix} + \mathbf{c}$ , where  $\mathbf{c} = \begin{bmatrix} c_1 \\ c_2 \end{bmatrix}$  is a constant vector. Because the system is autonomous, the matrix  $M$  and the inhomogeneous part  $\mathbf{c}$  cannot depend on  $t$ .

**(stability of autonomous linear 2-dimensional systems)**

eigenvalues	behaviour	stability	solutions have terms like
real and both positive	nodal source	unstable	$e^{3t}, e^{7t}$
real and both negative	nodal sink	asymptotically stable	$e^{-3t}, e^{-7t}$
real and opposite signs	saddle	unstable	$e^{-3t}, e^{7t}$
complex with positive real part	spiral source	unstable	$e^{3t}\cos(7t), e^{3t}\sin(7t)$
complex with negative real part	spiral sink	asymptotically stable	$e^{-3t}\cos(7t), e^{-3t}\sin(7t)$
purely imaginary	center point	stable (not asymptotically stable)	$\cos(7t), \sin(7t)$

**Stability of nonlinear autonomous systems**

We now observe that we can (typically) determine the stability of an equilibrium point of a nonlinear system by simply linearizing at that point.

**(stability of autonomous nonlinear 2-dimensional systems)**

Suppose that  $(x_0, y_0)$  is an equilibrium point of the system  $\frac{d}{dt} \begin{bmatrix} x \\ y \end{bmatrix} = \begin{bmatrix} f(x, y) \\ g(x, y) \end{bmatrix}$ .

If the Jacobian matrix  $J(x_0, y_0)$  is invertible, then its eigenvalues determine the stability and behaviour of the equilibrium point as for a linear system except in the following cases:

- If the eigenvalues are pure imaginary, we cannot predict stability (the equilibrium point could be either a center or a spiral source/sink; whereas the equilibrium point of the linearization is a center).
- If the eigenvalues are real and equal, then the equilibrium point could be either nodal or spiral (whereas the linearization has a nodal equilibrium point). The stability, however, is the same.

**Comment.** We need the Jacobian matrix  $J(x_0, y_0)$  to be invertible, so that the linearized system has a unique equilibrium point.

Plot, for instance, the phase portrait of  $\frac{d}{dt} \begin{bmatrix} x \\ y \end{bmatrix} = \begin{bmatrix} (x - 2y)x \\ (x - 2)y \end{bmatrix}$ .

**Purely imaginary eigenvalues?** The issue with pure imaginary eigenvalues here comes from the fact that the linearization is only an approximation, with the true (nonlinear) behaviour slightly deviating. Slightly perturbing purely imaginary roots can also lead to (small but) positive real part (unstable; spiral source) or negative real part (asymptotically stable; spiral sink).

**Real repeated eigenvalue?** The issue with a real repeated eigenvalue is similar. Slightly perturbing such a root can lead to real eigenvalues (nodal) or a pair of complex conjugate eigenvalues (spiral). However, the real part of these perturbations still has the same sign so that we can still predict the stability itself.

The following is a continuation of Example 75:

**Example 84. (cont'd)** Consider again the system  $\frac{dx}{dt} = x \cdot (y - 1)$ ,  $\frac{dy}{dt} = y \cdot (x - 1)$ . Without consulting a plot, determine the equilibrium points and classify their stability.

**Solution.** See Example 75 for the phase portrait. However, we will not use it in the following.

To find the equilibrium points, we solve  $x(y - 1) = 0$  (that is,  $x = 0$  or  $y = 1$ ) and  $y(x - 1) = 0$  (that is,  $x = 1$  or  $y = 0$ ). We conclude that the equilibrium points are  $(0, 0)$  and  $(1, 1)$ .

Our system is  $\frac{d}{dt} \begin{bmatrix} x \\ y \end{bmatrix} = \begin{bmatrix} f(x, y) \\ g(x, y) \end{bmatrix}$  with  $\begin{bmatrix} f(x, y) \\ g(x, y) \end{bmatrix} = \begin{bmatrix} x \cdot (y - 1) \\ y \cdot (x - 1) \end{bmatrix}$ .

The Jacobian matrix is  $J(x, y) = \begin{bmatrix} f_x & f_y \\ g_x & g_y \end{bmatrix} = \begin{bmatrix} y - 1 & x \\ y & x - 1 \end{bmatrix}$ .

- At  $(0, 0)$ , the Jacobian matrix is  $J(0, 0) = \begin{bmatrix} -1 & 0 \\ 0 & -1 \end{bmatrix}$ . We can read off that the eigenvalues are  $-1, -1$ . Since they are both negative,  $(0, 0)$  is asymptotically stable.

Since this is a real repeated eigenvalue, we cannot immediately tell whether  $(0, 0)$  is a nodal sink (it is a nodal sink for the linearization!) or a nodal spiral. (Since our system is nonlinear, the linearization is just an approximation. Similarly, you can think of the eigenvalues  $-1, -1$  as being somewhat approximate. Slight jiggling could change them to something like  $-1 \pm 0.001i$  which would correspond to a nodal spiral.)

- At  $(1, 1)$ , the Jacobian matrix is  $J(1, 1) = \begin{bmatrix} 0 & 1 \\ 1 & 0 \end{bmatrix}$ .

The characteristic polynomial is  $\det \left( \begin{bmatrix} -\lambda & 1 \\ 1 & -\lambda \end{bmatrix} \right) = \lambda^2 - 1$ , which has roots  $\pm 1$ . These are the eigenvalues. Since one is positive and the other is negative,  $(1, 1)$  is a saddle. In particular,  $(1, 1)$  is unstable.

**Example 85.** Consider again the system  $\frac{d}{dt} \begin{bmatrix} x \\ y \end{bmatrix} = \begin{bmatrix} 2y - x^2 \\ (x-3)(x-y) \end{bmatrix}$ . Without consulting a plot, determine the equilibrium points and classify their stability.

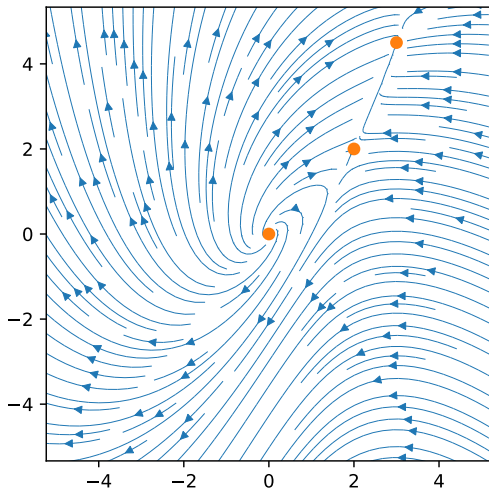
**Solution.** To find the equilibrium points, we solve  $2y - x^2 = 0$  and  $(x-3)(x-y) = 0$ . It follows from the second equation that  $x = 3$  or  $x = y$ :

- If  $x = 3$ , then the first equation implies  $y = \frac{9}{2}$ .
- If  $x = y$ , then the first equation becomes  $2y - y^2 = 0$ , which has solutions  $y = 0$  and  $y = 2$ .

Hence, the equilibrium points are  $(0, 0)$ ,  $(2, 2)$  and  $(3, \frac{9}{2})$ .

The Jacobian matrix of  $\begin{bmatrix} f \\ g \end{bmatrix} = \begin{bmatrix} 2y - x^2 \\ (x-3)(x-y) \end{bmatrix}$  is  $J = \begin{bmatrix} f_x & f_y \\ g_x & g_y \end{bmatrix} = \begin{bmatrix} -2x & 2 \\ 2x - y - 3 & -x + 3 \end{bmatrix}$ .

- At  $(0, 0)$ , the Jacobian matrix is  $J = \begin{bmatrix} 0 & 2 \\ -3 & 3 \end{bmatrix}$ . The eigenvalues are  $\frac{1}{2}(3 \pm i\sqrt{15})$ . Since these are complex with positive real part,  $(0, 0)$  is a spiral source and, in particular, unstable.
- At  $(2, 2)$ , the Jacobian matrix is  $J = \begin{bmatrix} -4 & 2 \\ -1 & 1 \end{bmatrix}$ . The eigenvalues are  $\frac{1}{2}(-3 \pm \sqrt{17}) \approx -3.562, 0.562$ . Since these are real with opposite signs,  $(2, 2)$  is a saddle and, in particular, unstable.
- At  $(3, \frac{9}{2})$ , the Jacobian matrix is  $J = \begin{bmatrix} -6 & 2 \\ -\frac{3}{2} & 0 \end{bmatrix}$ . The eigenvalues are  $-3 \pm \sqrt{6} \approx -5.449, -0.551$ . Since these are real and both negative,  $(3, \frac{9}{2})$  is a nodal sink and, in particular, asymptotically stable.



**Comment.** Can you confirm our analysis in the above plot? Note that it is becoming hard to see the details. One solution would be to make separate phase portraits focusing on the vicinity of each equilibrium plot. Do it!

## Modeling &amp; Applications

## Application: Lotka–Volterra predator–prey model

**Review.** Exponential model, logistic model, ...

The Lotka–Volterra equations

$$\frac{dx}{dt} = \alpha x - \beta xy, \quad \frac{dy}{dt} = \delta xy - \gamma y,$$

are used, for instance, in biology to describe the dynamics of two species that interact, one as a predator and the other as prey. (Here,  $\alpha, \beta, \gamma, \delta$  are positive real constants.)

Can you put into words how these equations might indeed describe the interactions between predator and prey?

To begin with, which of  $x$  and  $y$  is the predator and which is the prey? What are the equations saying about a population of only predator or only prey?

For more information: [https://en.wikipedia.org/wiki/Lotka-Volterra\\_equations](https://en.wikipedia.org/wiki/Lotka-Volterra_equations)

**Example 86.** Determine the equilibrium points of the Lotka–Volterra equations and classify their stability. What does this mean for this problem?

**Solution.** Solving  $\alpha x - \beta xy = x(\alpha - \beta y) = 0$  and  $\delta xy - \gamma y = (\delta x - \gamma)y = 0$ , we find that there are two equilibrium points:  $(0, 0)$  and  $(\frac{\gamma}{\delta}, \frac{\alpha}{\beta})$ .

The Jacobian matrix of  $\begin{bmatrix} f \\ g \end{bmatrix} = \begin{bmatrix} \alpha x - \beta xy \\ \delta xy - \gamma y \end{bmatrix}$  is  $J = \begin{bmatrix} f_x & f_y \\ g_x & g_y \end{bmatrix} = \begin{bmatrix} \alpha - \beta y & -\beta x \\ \delta y & \delta x - \gamma \end{bmatrix}$ .

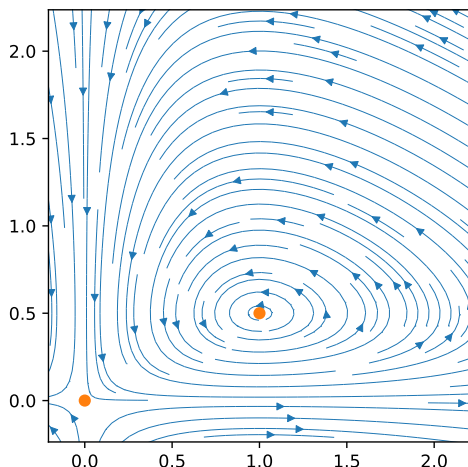
- At  $(0, 0)$ , the Jacobian matrix is  $J = \begin{bmatrix} \alpha & 0 \\ 0 & -\gamma \end{bmatrix}$ . The eigenvalues are  $\alpha$  and  $-\gamma$ .

Since these are real with opposite signs,  $(0, 0)$  (“extinction”) is a saddle and, in particular, unstable.

- At  $(\frac{\gamma}{\delta}, \frac{\alpha}{\beta})$ , the Jacobian matrix is  $J = \begin{bmatrix} 0 & -\beta\gamma/\delta \\ \alpha\delta/\beta & 0 \end{bmatrix}$ . The characteristic polynomial is  $\lambda^2 + \alpha\gamma$  so that the eigenvalues are  $\pm i\sqrt{\alpha\gamma}$ .

Since the eigenvalues are pure imaginary, we cannot immediately predict stability (the equilibrium point of the linearization is a center but our equilibrium point could be either a center or a spiral source/sink).

A closer inspection shows that the equilibrium point here is a center (see the comment below). This is confirmed by the following phase portrait for  $\alpha = \frac{2}{3}$ ,  $\beta = \frac{4}{3}$ ,  $\gamma = \delta = 1$ .



**Comment.** The equilibrium point  $\left(\frac{\gamma}{\delta}, \frac{\alpha}{\beta}\right)$  has the interesting feature that the stable population for  $x$  (the prey) depends on the growth parameters for  $y$  (the predator) and vice versa. This is somewhat paradoxical: for instance, if we increase the birth rate  $\alpha$  of the prey (for instance, by improving the environment for the prey), we would expect the long-term population levels of the prey to increase. But our calculations say that this is not the case: instead only the long-term levels of the predator increase. (See the wikipedia article for links with the “paradox of enrichment” and how such effects can indeed be observed in actual populations.)

**Comment.** Here is one way to conclude that  $\left(\frac{\gamma}{\delta}, \frac{\alpha}{\beta}\right)$  is a center and, therefore, stable.

We can eliminate  $t$  from the DEs to arrive at  $\frac{dy}{dx} = \frac{(\delta x - \gamma)y}{x(\alpha - \beta y)}$ .

In general, solutions to this DE describe the trajectories in our phase plots.

Here, the DE for  $\frac{dy}{dx}$  is separable:  $\frac{\alpha - \beta y}{y} dy = \frac{\delta x - \gamma}{x} dx$ . Integrating (and using that  $x, y > 0$ ), we find that

$$\alpha \ln(y) - \beta y = \delta \ln(x) - \gamma x + C.$$

This means that the trajectories in our phase portrait are level curves of the function  $\alpha \ln(y) - \beta y - \delta \ln(x) + \gamma x$ . Since there are no anomalies for  $x, y > 0$ , these level curves cannot be spiralling towards the equilibrium point (for instance, we can fix values for  $x > 0$  and  $C$ , and then observe that  $\alpha \ln(y) - \beta y = D$  with  $D = \delta \ln(x) - \gamma x + C$  has at most two solutions for  $y$  and certainly not infinitely many). Thus, the equilibrium point is a center.

### Bonus: Two more applications of systems of DEs

**Example 87. (epidemiology)** Let us indicate the popular SIR model for short outbreaks of diseases among a population of constant size  $N$ .

In a SIR model, the population is compartmentalized into  $S(t)$  susceptible,  $I(t)$  infected and  $R(t)$  recovered (or resistant) individuals ( $N = S(t) + I(t) + R(t)$ ). In the Kermack-McKendrick model, the outbreak of a disease is modeled by

$$\frac{dR}{dt} = \gamma I, \quad \frac{dS}{dt} = -\beta SI, \quad \frac{dI}{dt} = \beta SI - \gamma I,$$

with  $\gamma$  modeling the recovery rate and  $\beta$  the infection rate. Note that this is a nonlinear system of differential equations. For more details and many variations used in epidemiology, see:

[https://en.wikipedia.org/wiki/Compartmental\\_models\\_in\\_epidemiology](https://en.wikipedia.org/wiki/Compartmental_models_in_epidemiology)

**Comment.** The following variation

$$\frac{dR}{dt} = \gamma IR, \quad \frac{dS}{dt} = -\beta SI, \quad \frac{dI}{dt} = \beta SI - \gamma IR,$$

which assumes “infectious recovery”, was used in 2014 to predict that facebook might lose 80% of its users by 2017. It’s that claim, not mathematics (or even the modeling), which attracted a lot of media attention.

<http://blogs.wsj.com/digits/2014/01/22/controversial-paper-predicts-facebook-decline/>

**Example 88. (military strategy)** Lanchester’s equations model two opposing forces during “aimed fire” battle.

Let  $x(t)$  and  $y(t)$  describe the number of troops on each side. Then Lanchester (during World War I) assumed that the rates  $-x'(t)$  and  $-y'(t)$ , at which soldiers are put out of action, are proportional to the number of opposing forces. That is:

$$\begin{bmatrix} x'(t) \\ y'(t) \end{bmatrix} = \begin{bmatrix} -\alpha y(t) \\ -\beta x(t) \end{bmatrix}, \quad \text{or, in matrix form: } \begin{bmatrix} x' \\ y' \end{bmatrix} = \begin{bmatrix} 0 & -\alpha \\ -\beta & 0 \end{bmatrix} \begin{bmatrix} x \\ y \end{bmatrix}.$$

The proportionality constants  $\alpha, \beta > 0$  indicate the strength of the forces (“fighting effectiveness coefficients”). These are simple linear DEs with constant coefficients, which we have learned how to solve.

For more details, see: [https://en.wikipedia.org/wiki/Lanchester%27s\\_laws](https://en.wikipedia.org/wiki/Lanchester%27s_laws)

**Comment.** The “aimed fire” means that all combatants are engaged, as is common in modern combat with long-range weapons. This is rather different than ancient combat where soldiers were engaging one opponent at a time.

## Application: Mixing problems

**Example 89.** Consider two brine tanks. Tank  $T_1$  contains 24gal water containing 3lb salt, and tank  $T_2$  contains 9gal pure water.

- $T_1$  is being filled with 54gal/min water containing 0.5lb/gal salt.
- 72gal/min well-mixed solution flows out of  $T_1$  into  $T_2$ .
- 18gal/min well-mixed solution flows out of  $T_2$  into  $T_1$ .
- Finally, 54gal/min well-mixed solution is leaving  $T_2$ .

We wish to understand how much salt is in the tanks after  $t$  minutes.

- Derive a system of differential equations.
- Determine the equilibrium points and classify their stability. What does this mean here?
- Solve the system to find explicit formulas for how much salt is in the tanks after  $t$  minutes.

**Solution.**

- Note that the amount of water in each tank is constant because the flows balance each other.

Let  $y_i(t)$  denote the amount of salt (in lb) in tank  $T_i$  after time  $t$  (in min). In time interval  $[t, t + \Delta t]$ :

$$\Delta y_1 \approx 54 \cdot \frac{1}{2} \cdot \Delta t - 72 \cdot \frac{y_1}{24} \cdot \Delta t + 18 \cdot \frac{y_2}{9} \cdot \Delta t, \text{ so } y_1' = 27 - 3y_1 + 2y_2. \text{ Also, } y_1(0) = 3.$$

$$\Delta y_2 \approx 72 \cdot \frac{y_1}{24} \cdot \Delta t - 72 \cdot \frac{y_2}{9} \cdot \Delta t, \text{ so } y_2' = 3y_1 - 8y_2. \text{ Also, } y_2(0) = 0.$$

Using matrix notation and writing  $\mathbf{y} = \begin{bmatrix} y_1 \\ y_2 \end{bmatrix}$ , this is  $\frac{d}{dt}\mathbf{y} = \begin{bmatrix} -3 & 2 \\ 3 & -8 \end{bmatrix}\mathbf{y} + \begin{bmatrix} 27 \\ 0 \end{bmatrix}$ ,  $\mathbf{y}(0) = \begin{bmatrix} 3 \\ 0 \end{bmatrix}$ .

- Note that this system is autonomous! Otherwise, we could not pursue our stability analysis.

To find the equilibrium point (since the system is linear, there should be just one), we set  $\frac{d}{dt}\mathbf{y} = \begin{bmatrix} 0 \\ 0 \end{bmatrix}$  and solve  $\begin{bmatrix} -3 & 2 \\ 3 & -8 \end{bmatrix}\mathbf{y} + \begin{bmatrix} 27 \\ 0 \end{bmatrix} = \begin{bmatrix} 0 \\ 0 \end{bmatrix}$ . We find  $\mathbf{y} = \begin{bmatrix} -3 & 2 \\ 3 & -8 \end{bmatrix}^{-1} \begin{bmatrix} -27 \\ 0 \end{bmatrix} = \begin{bmatrix} 12 \\ 4.5 \end{bmatrix}$ .

The characteristic polynomial of  $\begin{bmatrix} -3 & 2 \\ 3 & -8 \end{bmatrix}$  is  $(-3 - \lambda)(-8 - \lambda) - 6 = \lambda^2 + 11\lambda + 18 = (\lambda + 9)(\lambda + 2)$ .

Hence, the eigenvalues are  $-9, -2$ . Since they are both negative, the equilibrium point is a nodal sink and, in particular, asymptotically stable.

Having an equilibrium point at  $(12, 4.5)$ , means that, if the salt amounts are  $y_1 = 12, y_2 = 4.5$ , then they won't change over time (but will remain unchanged at these levels). The fact that it is asymptotically stable means that salt amounts close to these balanced levels will, over time, approach the equilibrium levels. (Because the system is linear, this is also true for levels that are not "close".)

**We could have "seen" the equilibrium point!**

Indeed, noticing that, for a constant (equilibrium) particular solution  $\mathbf{y}$ , each tank has to have a constant concentration of 0.5lb/gal of salt, we find directly  $\mathbf{y} = 0.5 \begin{bmatrix} 24 \\ 9 \end{bmatrix} = \begin{bmatrix} 12 \\ 4.5 \end{bmatrix}$ .

- We sketch the computation. From the previous part, we know that a particular solution is  $\mathbf{y}_p = \begin{bmatrix} 12 \\ 4.5 \end{bmatrix}$ .

A fundamental matrix of the homogeneous system is  $\Phi(t) = \begin{bmatrix} e^{-9t} & 2e^{-2t} \\ -3e^{-9t} & e^{-2t} \end{bmatrix}$  (compute eigenvectors!).

Hence, the general solution to the inhomogeneous system is  $\mathbf{y}(t) = \begin{bmatrix} 12 \\ 4.5 \end{bmatrix} + C_1 \begin{bmatrix} 1 \\ -3 \end{bmatrix} e^{-9t} + C_2 \begin{bmatrix} 2 \\ 1 \end{bmatrix} e^{-2t}$ .

Using the initial condition  $\mathbf{y}(0) = \begin{bmatrix} 3 \\ 0 \end{bmatrix}$ , we get the equation  $\begin{bmatrix} 12 \\ 4.5 \end{bmatrix} + C_1 \begin{bmatrix} 1 \\ -3 \end{bmatrix} + C_2 \begin{bmatrix} 2 \\ 1 \end{bmatrix} = \begin{bmatrix} 3 \\ 0 \end{bmatrix}$ .

Solving this, we find  $C_1 = 0$  and  $C_2 = -4.5$ .

In conclusion, the unique solution to the IVP is  $\mathbf{y}(t) = \begin{bmatrix} 12 - 9e^{-2t} \\ 4.5 - 4.5e^{-2t} \end{bmatrix}$ .

**Comment.** We will soon discuss inhomogeneous linear systems in general.

**Example 90.** Consider two brine tanks. Initially, tank  $T_1$  is filled with 10gal water containing 2lb salt, and tank  $T_2$  with 5gal pure water.

- $T_1$  is being filled with 4gal/min water containing 0.5lb/gal salt.
- 5gal/min well-mixed solution flows out of  $T_1$  into  $T_2$ .
- 2gal/min well-mixed solution flows out of  $T_2$  into  $T_1$ .
- Finally, 1gal/min well-mixed solution is leaving  $T_2$ .

Derive a system of equations for the amount of salt in the tanks after  $t$  minutes.

**Solution.** Let  $V_i(t)$  denote the amount of solution (in gal) in tank  $T_i$  after time  $t$  (in min). Then  $V_1(t) = 10 + 4t - 5t + 2t = 10 + t$  while  $V_2(t) = 5 + 5t - 2t - t = 5 + 2t$ .

Let  $y_i(t)$  denote the amount of salt (in lb) in tank  $T_i$  after time  $t$  (in min). In the time interval  $[t, t + \Delta t]$ :

$\Delta y_1 \approx 4 \cdot \frac{1}{2} \cdot \Delta t - 5 \cdot \frac{y_1}{V_1} \cdot \Delta t + 2 \cdot \frac{y_2}{V_2} \cdot \Delta t$ , so  $y_1' = 2 - 5\frac{y_1}{V_1} + 2\frac{y_2}{V_2}$ . Also,  $y_1(0) = 2$ .

$\Delta y_2 \approx 5 \cdot \frac{y_1}{V_1} \cdot \Delta t - (2 + 1) \cdot \frac{y_2}{V_2} \cdot \Delta t$ , so  $y_2' = 5\frac{y_1}{V_1} - 3\frac{y_2}{V_2}$ . Also,  $y_2(0) = 0$ .

In conclusion, we have obtained the system of equations

$$\begin{aligned} y_1' &= -\frac{5}{10+t} y_1 + \frac{2}{5+2t} y_2 + 2, & y_1(0) &= 2, \\ y_2' &= \frac{5}{10+t} y_1 - \frac{3}{5+2t} y_2, & y_2(0) &= 0. \end{aligned}$$

Note that this is a system of linear DEs. It is inhomogeneous (because of the +2 in the first equation). Its coefficients are not constant. As a consequence, this system is not autonomous and so we cannot apply our stability analysis.

**In matrix-vector form.** If we write  $\mathbf{y} = \begin{bmatrix} y_1 \\ y_2 \end{bmatrix}$ , then the system becomes

$$\mathbf{y}' = \begin{bmatrix} -\frac{5}{10+t} & \frac{2}{5+2t} \\ \frac{5}{10+t} & -\frac{3}{5+2t} \end{bmatrix} \mathbf{y} + \begin{bmatrix} 2 \\ 0 \end{bmatrix}, \quad \mathbf{y}(0) = \begin{bmatrix} 2 \\ 0 \end{bmatrix}.$$

### Review: Linear first-order DEs

The most general first-order linear DE is  $P(t)y' + Q(t)y + R(t) = 0$ .

By dividing by  $P(t)$  and rearranging, we can always write it in the form  $y' = a(t)y + f(t)$ .

The corresponding **homogeneous** linear DE is  $y' = a(t)y$ .

Its general solution is  $y(t) = Ce^{\int a(t)dt}$ .

**Why?** Compute  $y'$  and verify that the DE is indeed satisfied. Alternatively, we can derive the formula using separation of variables as illustrated in the next example.

**Example 91. (review homework)** Solve  $y' = t^2y$ .

**Solution.** This DE is separable as well:  $\frac{1}{y}dy = t^2 dt$  (note that we just lost the solution  $y = 0$ ).

Integrating gives  $\ln|y| = \frac{1}{3}t^3 + A$ , so that  $|y| = e^{\frac{1}{3}t^3 + A}$ . Since the RHS is never zero, we must have either  $y = e^{\frac{1}{3}t^3 + A}$  or  $y = -e^{\frac{1}{3}t^3 + A}$ .

Hence  $y = \pm e^A e^{\frac{1}{3}t^3} = C e^{\frac{1}{3}t^3}$  (with  $C = \pm e^A$ ). Note that  $C = 0$  corresponds to the singular solution  $y = 0$ .

In summary, the general solution is  $y = C e^{\frac{1}{3}t^3}$  (with  $C$  any real number).

### Solving linear first-order DEs using variation of constants

Recall that, to find the general solution of the **inhomogeneous DE**

$$y' = a(t)y + f(t),$$

we only need to find a particular solution  $y_p$ .

Then the general solution is  $y_p + Cy_h$ , where  $y_h$  is any solution of the homogeneous DE  $y' = a(t)y$ .

**Comment.** In applications,  $f(t)$  often represents an external force. As such, the inhomogeneous DE is sometimes called “driven” while the homogeneous DE would be called “undriven”.

**Theorem 92. (variation of constants)**  $y' = a(t)y + f(t)$  has the particular solution

$$y_p(t) = c(t)y_h(t) \quad \text{with} \quad c(t) = \int \frac{f(t)}{y_h(t)} dt,$$

where  $y_h(t) = e^{\int a(t)dt}$  is a solution to the homogeneous equation  $y' = a(t)y$ .

**Proof.** Let us plug  $y_p(t) = y_h(t) \int \frac{f(t)}{y_h(t)} dt$  into the DE to verify that it is a solution:

$$y_p'(t) = y_h'(t) \int \frac{f(t)}{y_h(t)} dt + y_h(t) \frac{d}{dt} \int \frac{f(t)}{y_h(t)} dt = a(t)y_h(t) \int \frac{f(t)}{y_h(t)} dt + f(t) = a(t)y_p(t) + f(t) \quad \square$$

**Comment.** Note that the formula for  $y_p(t)$  gives the general solution if we let  $\int \frac{f(t)}{y_h(t)} dx$  be the general antiderivative. (Think about the effect of the constant of integration!)

**Example 93.** Solve  $x^2y' = 1 - xy + 2x$ ,  $y(1) = 3$ .

**Solution.** To apply Theorem 92, we write as  $\frac{dy}{dx} = a(x)y + f(x)$  with  $a(x) = -\frac{1}{x}$  and  $f(x) = \frac{1}{x^2} + \frac{2}{x}$ .  
 $y_h(x) = e^{\int a(x)dx} = e^{-\ln x} = \frac{1}{x}$ . (Why can we write  $\ln x$  instead of  $\ln|x|$ ? See comment below.) Hence:

$$y_p(x) = y_h(x) \int \frac{f(x)}{y_h(x)} dx = \frac{1}{x} \int \left(\frac{1}{x} + 2\right) dx = \frac{\ln x + 2x + C}{x}$$

Using  $y(1) = 3$ , we find  $C = 1$ . In summary, the solution is  $y = \frac{\ln(x) + 2x + 1}{x}$ .

**Comment.** Note that  $x = 1 > 0$  in the initial condition. Because of that we know that (at least locally) our solution will have  $x > 0$ . Accordingly, we can use  $\ln x$  instead of  $\ln|x|$ . (If the initial condition had been  $y(-1) = 3$ , then we would have  $x < 0$ , in which case we can use  $\ln(-x)$  instead of  $\ln|x|$ .)

**Comment.** Observe how the general solution (with parameter  $C$ ) is indeed obtained from any particular solution (say,  $\frac{\ln x + 2x}{x}$ ) plus the general solution to the homogeneous equation, which is  $\frac{C}{x}$ .

### How to find the formula for variation of constants?

- **Variation of constants** means that we look for a solution of the form  $y_p(t) = c(t)y_h(t)$ .

Keep in mind that  $cy_h(t)$  is the solution to the homogeneous DE. Going from a constant  $c$  (for the homogeneous case) to  $c(t)$  (for the inhomogeneous case) is why this is called “**variation of constants**” (or, sometimes, variation of parameters).

- To find a  $c(t)$  that works, we plug into the DE  $y' = ay + f$  which results in

$$c'y_h + cy_h' = acy_h + f.$$

Since  $y_h' = ay_h$ , this simplifies to  $c'y_h = f$  or, equivalently,  $c' = \frac{f}{y_h}$ .

- We integrate to find  $c(t) = \int \frac{f(t)}{y_h(t)} dt$ , which is the formula in Theorem 92.

**How does this compare to the integrating factor method?** Instead of variation of constants, you may have solved linear DEs using **integrating factors** instead. In that case, the DE is first written as  $y' - a(t)y = f(t)$  and then both sides are multiplied with the integrating factor

$$g(t) = \exp\left(\int -a(t)dt\right).$$

Because  $g'(t) = -a(t)g(t)$ , we then have

$$\frac{g(t)y' - a(t)g(t)y}{= \frac{d}{dt}g(t)y} = f(t)g(t).$$

Integrating both sides gives

$$g(t)y = \int f(t)g(t)dt.$$

Since  $g(t) = 1/y_h(t)$ , this then produces the same formula for  $y$  that we found using variation of constants.

## Systems of linear DEs: the inhomogeneous case

Recall that any linear DE can be transformed into a first-order system. Hence, any linear DE (or any system of linear DEs) can be written as

$$\mathbf{y}' = A(t) \mathbf{y} + \mathbf{f}(t).$$

**Note.** The DE is allowed to have nonconstant coefficients ( $A$  depends on  $t$ ). On the other hand, this is an autonomous DE (those for which we can analyze phase portraits) only if  $A(t)$  and  $\mathbf{f}(t)$  actually don't depend on  $t$ .

The same arguments as for Theorem 92 with the same result apply to systems of linear equations!

Recall that we showed in Theorem 92 that  $y' = a(t)y + f(t)$  has the particular solution

$$y_p(t) = y_h(t) \int \frac{f(t)}{y_h(t)} dt,$$

where  $y_h(t) = e^{\int a(t) dt}$  is a solution to the homogeneous equation  $y' = a(t)y$ .

**Theorem 94. (variation of constants)**  $\mathbf{y}' = A(t) \mathbf{y} + \mathbf{f}(t)$  has the particular solution

$$\mathbf{y}_p(t) = \Phi(t) \int \Phi(t)^{-1} \mathbf{f}(t) dt,$$

where  $\Phi(t)$  is a fundamental matrix solution to  $\mathbf{y}' = A(t) \mathbf{y}$ .

**Proof.** Since the general solution of the homogeneous equation  $\mathbf{y}' = A(t) \mathbf{y}$  is  $\mathbf{y}_h = \Phi(t)\mathbf{c}$ , we are going to vary the constant  $\mathbf{c}$  and look for a particular solution of the form  $\mathbf{y}_p = \Phi(t)\mathbf{c}(t)$ . Plugging into the DE, we get:

$$\mathbf{y}'_p = \Phi' \mathbf{c} + \Phi \mathbf{c}' = A\Phi \mathbf{c} + \Phi \mathbf{c}' \stackrel{!}{=} A\mathbf{y}_p + \mathbf{f} = A\Phi \mathbf{c} + \mathbf{f}$$

For the first equality, we used the matrix version of the usual product rule (which holds since differentiation is defined entry-wise). For the second equality, we used  $\Phi' = A\Phi$ .

Hence,  $\mathbf{y}_p = \Phi(t)\mathbf{c}(t)$  is a particular solution if and only if  $\Phi \mathbf{c}' = \mathbf{f}$ .

The latter condition means  $\mathbf{c}' = \Phi^{-1} \mathbf{f}$  so that  $\mathbf{c} = \int \Phi(t)^{-1} \mathbf{f}(t) dt$ , which gives the claimed formula for  $\mathbf{y}_p$ .  $\square$

**Example 95.** Find a particular solution to  $\mathbf{y}' = \begin{bmatrix} 2 & 3 \\ 2 & 1 \end{bmatrix} \mathbf{y} + \begin{bmatrix} 0 \\ -2e^{3t} \end{bmatrix}$ .

**Solution.** First, we determine (do it!) a fundamental matrix solution for  $\mathbf{y}' = \begin{bmatrix} 2 & 3 \\ 2 & 1 \end{bmatrix} \mathbf{y}$ :  $\Phi(x) = \begin{bmatrix} e^{-t} & 3e^{4t} \\ -e^{-t} & 2e^{4t} \end{bmatrix}$

Using  $\det(\Phi(t)) = 5e^{3t}$ , we find  $\Phi(t)^{-1} = \frac{1}{5} \begin{bmatrix} 2e^t & -3e^t \\ e^{-4t} & e^{-4t} \end{bmatrix}$ .

Hence,  $\Phi(t)^{-1} \mathbf{f}(t) = \frac{2}{5} \begin{bmatrix} 3e^{4t} \\ -e^{-t} \end{bmatrix}$  and  $\int \Phi(t)^{-1} \mathbf{f}(t) dx = \frac{2}{5} \begin{bmatrix} 3/4e^{4t} \\ e^{-t} \end{bmatrix}$ .

By variation of constants,  $\mathbf{y}_p(t) = \Phi(t) \int \Phi(t)^{-1} \mathbf{f}(t) dt = \begin{bmatrix} e^{-t} & 3e^{4t} \\ -e^{-t} & 2e^{4t} \end{bmatrix} \frac{2}{5} \begin{bmatrix} 3/4e^{4t} \\ e^{-t} \end{bmatrix} = \begin{bmatrix} 3/2 \\ 1/2 \end{bmatrix} e^{3t}$ .

**Comment.** Note that the solution is of the form that we anticipate from the method of undetermined coefficients (which we only discussed in the case of a single DE but which works similarly for systems).

**Sage.** Here is a way to have Sage do these computations for us. Keep in mind that we can choose  $\Phi(t) = e^{At}$ .

```
>>> s, t = var('s, t')
>>> A = matrix([[2,3],[2,1]])
>>> y = exp(A*t)*integrate(exp(-A*t)*vector([0,-2*e^(3*t)]), t)
>>> y.simplify_full()
```

$$\left( \frac{3}{2} e^{(3t)}, \frac{1}{2} e^{(3t)} \right)$$

In the special case that  $\Phi(t) = e^{At}$ , some things become easier. For instance,  $\Phi(t)^{-1} = e^{-At}$ . In that case, we can explicitly write down solutions to IVPs:

- $y' = Ay$ ,  $y(0) = c$  has (unique) solution  $y(t) = e^{At}c$ .
- $y' = Ay + f(t)$ ,  $y(0) = c$  has (unique) solution  $y(t) = e^{At}c + e^{At} \int_0^t e^{-As} f(s) ds$ .

**Example 96.** Let  $A = \begin{bmatrix} 1 & 2 \\ -1 & 4 \end{bmatrix}$ .

- (a) Determine  $e^{At}$ .
- (b) Solve  $y' = Ay$ ,  $y(0) = \begin{bmatrix} 1 \\ 2 \end{bmatrix}$ .
- (c) Solve  $y' = Ay + \begin{bmatrix} 0 \\ 2e^t \end{bmatrix}$ ,  $y(0) = \begin{bmatrix} 1 \\ 2 \end{bmatrix}$ .

**Solution.**

(a) By proceeding as in Example 67 (do it!), we find  $e^{At} = \begin{bmatrix} 2e^{2t} - e^{3t} & -2e^{2t} + 2e^{3t} \\ e^{2t} - e^{3t} & -e^{2t} + 2e^{3t} \end{bmatrix}$ .

(b)  $y(t) = e^{At} \begin{bmatrix} 1 \\ 2 \end{bmatrix} = \begin{bmatrix} -2e^{2t} + 3e^{3t} \\ -e^{2t} + 3e^{3t} \end{bmatrix}$

(c)  $y(t) = e^{At} \begin{bmatrix} 1 \\ 2 \end{bmatrix} + e^{At} \int_0^t e^{-As} f(s) ds$ . We compute:

$$\int_0^t e^{-As} f(s) ds = \int_0^t \begin{bmatrix} 2e^{-2s} - e^{-3s} & -2e^{-2s} + 2e^{-3s} \\ e^{-2s} - e^{-3s} & -e^{-2s} + 2e^{-3s} \end{bmatrix} \begin{bmatrix} 0 \\ 2e^s \end{bmatrix} ds = \int_0^t \begin{bmatrix} -4e^{-s} + 4e^{-2s} \\ -2e^{-s} + 4e^{-2s} \end{bmatrix} ds = \begin{bmatrix} 4e^{-t} - 2e^{-2t} - 2 \\ 2e^{-t} - 2e^{-2t} \end{bmatrix}$$

$$\text{Hence, } e^{At} \int_0^t e^{-As} f(s) ds = \begin{bmatrix} 2e^{2t} - e^{3t} & -2e^{2t} + 2e^{3t} \\ e^{2t} - e^{3t} & -e^{2t} + 2e^{3t} \end{bmatrix} \begin{bmatrix} 4e^{-t} - 2e^{-2t} - 2 \\ 2e^{-t} - 2e^{-2t} \end{bmatrix} = \begin{bmatrix} 2e^t - 4e^{2t} + 2e^{3t} \\ -2e^{2t} + 2e^{3t} \end{bmatrix}.$$

$$\text{Finally, } y(t) = \begin{bmatrix} -2e^{2t} + 3e^{3t} \\ -e^{2t} + 3e^{3t} \end{bmatrix} + \begin{bmatrix} 2e^t - 4e^{2t} + 2e^{3t} \\ -2e^{2t} + 2e^{3t} \end{bmatrix} = \begin{bmatrix} 2e^t - 6e^{2t} + 5e^{3t} \\ -3e^{2t} + 5e^{3t} \end{bmatrix}.$$

**Sage.** Here is how we can let Sage do these computations for us:

```
>>> s, t = var('s, t')
>>> A = matrix([[1,2],[-1,4]])
>>> y = exp(A*t)*vector([1,2]) + exp(A*t)*integrate(exp(-A*s)*vector([0,2*e^s]), s,0,t)
>>> y.simplify_full()
(5 e^(3 t) - 6 e^(2 t) + 2 e^t, 5 e^(3 t) - 3 e^(2 t))
```

**Comment.** Can you see that the solution is of the form that we anticipate from the method of undetermined coefficients?

Indeed,  $y(t) = y_p(t) + y_h(t)$  where the simplest particular solution is  $y_p(t) = \begin{bmatrix} 2e^t \\ 0 \end{bmatrix}$ .

**Example 97.** In Example 89, we derived the IVP  $\frac{d}{dt}y = \begin{bmatrix} -3 & 2 \\ 3 & -8 \end{bmatrix}y + \begin{bmatrix} 27 \\ 0 \end{bmatrix}$ ,  $y(0) = \begin{bmatrix} 3 \\ 0 \end{bmatrix}$ .

Solve it using our new tools.

**Solution.** This is an IVP that we can solve (with some work). Do it! For instance, we can apply variation of constants. (Alternatively, leverage our particular solution from the previous part!) Skipping most work, we find:

- If  $A = \begin{bmatrix} -3 & 2 \\ 3 & -8 \end{bmatrix}$ , then  $e^{At} = \frac{1}{7} \begin{bmatrix} e^{-9t} + 6e^{-2t} & -2e^{-9t} + 2e^{-2t} \\ -3e^{-9t} + 3e^{-2t} & 6e^{-9t} + e^{-2t} \end{bmatrix}$
- $\mathbf{y} = e^{At} \begin{bmatrix} 1 \\ 0 \end{bmatrix} + e^{At} \int_0^t e^{-As} \begin{bmatrix} 27 \\ 0 \end{bmatrix} ds = \frac{1}{7} \begin{bmatrix} e^{-9t} + 6e^{-2t} \\ -3e^{-9t} + 3e^{-2t} \end{bmatrix} + \frac{3}{14} e^{At} \begin{bmatrix} 2e^{9t} + 54e^{2t} - 56 \\ -6e^{9t} + 27e^{2t} - 21 \end{bmatrix}$   
 $= \begin{bmatrix} 12 - 9e^{-2t} \\ 4.5 - 4.5e^{-2t} \end{bmatrix}$

### Application of variation of constants: the second order case

**Review.** In Theorem 94 we showed that  $\mathbf{y}' = A(t)\mathbf{y} + \mathbf{f}(t)$  has the particular solution

$$\mathbf{y}_p(t) = \Phi(t) \int \Phi(t)^{-1} \mathbf{f}(t) dt,$$

where  $\Phi(t)$  is a fundamental matrix solution to  $\mathbf{y}' = A(t)\mathbf{y}$ .

Let us apply this result to the case of a second-order LDE

$$y'' + P(t)y' + Q(t)y = F(t).$$

We can write this DE as a first-order system by introducing the vector  $\mathbf{y} = \begin{bmatrix} y \\ y' \end{bmatrix}$ :

$$\mathbf{y}' = \begin{bmatrix} 0 & 1 \\ -Q(t) & -P(t) \end{bmatrix} \mathbf{y} + \begin{bmatrix} 0 \\ F(t) \end{bmatrix}$$

If the second-order homogeneous DE (that is,  $y'' + P(t)y' + Q(t)y = 0$ ) has general solution  $C_1y_1(t) + C_2y_2(t)$ , then a fundamental matrix for the first-order homogeneous system is

$$\Phi(t) = \begin{bmatrix} y_1 & y_2 \\ y_1' & y_2' \end{bmatrix}$$

(recall that each column of  $\Phi(t)$  represents a solution  $\mathbf{y}$  of the system). Our formula from Theorem 94 now gives us a particular solution of the inhomogeneous system:

$$\begin{aligned} \mathbf{y}_p(t) &= \Phi(t) \int \Phi(t)^{-1} \mathbf{f}(t) dt \\ &= \begin{bmatrix} y_1 & y_2 \\ y_1' & y_2' \end{bmatrix} \int \frac{1}{y_1y_2' - y_1'y_2} \begin{bmatrix} y_2' & -y_2 \\ -y_1' & y_1 \end{bmatrix} \begin{bmatrix} 0 \\ F \end{bmatrix} dt \\ &= \begin{bmatrix} y_1 & y_2 \\ y_1' & y_2' \end{bmatrix} \int \frac{F}{y_1y_2' - y_1'y_2} \begin{bmatrix} -y_2 \\ y_1 \end{bmatrix} dt \\ &= \int \frac{-y_2F}{y_1y_2' - y_1'y_2} dt \begin{bmatrix} y_1 \\ y_1' \end{bmatrix} + \int \frac{y_1F}{y_1y_2' - y_1'y_2} dt \begin{bmatrix} y_2 \\ y_2' \end{bmatrix} \end{aligned}$$

The first entry of  $\mathbf{y}_p$  is the corresponding particular solution to the second-order inhomogeneous DE:

$$y_p(t) = C_1(t)y_1(t) + C_2(t)y_2(t), \quad C_1(t) = \int \frac{-y_2(t)F(t)}{W(t)} dt, \quad C_2(t) = \int \frac{y_1(t)F(t)}{W(t)} dt.$$

where  $W(t) = y_1(t)y_2'(t) - y_1'(t)y_2(t)$  is the **Wronskian**.

## Some special functions and the power series method

## Review: power series

**Definition 98.** A function  $y(x)$  is analytic around  $x = x_0$  if it has a power series

$$y(x) = \sum_{n=0}^{\infty} a_n(x - x_0)^n.$$

**Note.** In the next theorem, we will see that this power series is the Taylor series of  $y(x)$  around  $x = x_0$ .

Power series are very pleasant to work with because they behave just like polynomials. For instance, we can differentiate and integrate them:

- If  $y(x) = \sum_{n=0}^{\infty} a_n(x - x_0)^n$ , then  $y'(x) = \sum_{n=1}^{\infty} n a_n(x - x_0)^{n-1}$  (another power series!).

$$\text{We can rewrite the series as } y'(x) = \sum_{n=1}^{\infty} n a_n(x - x_0)^{n-1} = \sum_{n=0}^{\infty} (n+1) a_{n+1}(x - x_0)^n.$$

The result is a power series just like the one we started with. Likewise, for higher derivatives.

- $\int y(x) dx = \sum_{n=0}^{\infty} \frac{a_n}{n+1} (x - x_0)^{n+1} + C$

**Theorem 99.** If  $y(x)$  is analytic around  $x = x_0$ , then  $y(x)$  is infinitely differentiable and

$$y(x) = \sum_{n=0}^{\infty} a_n(x - x_0)^n \quad \text{with} \quad a_n = \frac{y^{(n)}(x_0)}{n!}.$$

**Caution.** Analyticity is needed in this theorem; being infinitely differentiable is not enough. For instance,  $y(x) = e^{-1/x^2}$  is infinitely differentiable around  $x = 0$  (and everywhere else). However,  $y^{(n)}(0) = 0$  for all  $n$ .

In particular, if  $y(x)$  is analytic at  $x = 0$ , then

$$y(x) = \sum_{n=0}^{\infty} \frac{y^{(n)}(0)}{n!} x^n = y(0) + y'(0)x + \frac{1}{2}y''(0)x^2 + \frac{1}{6}y'''(0)x^3 + \dots$$

We have already seen the following example.

**Example 100.**  $e^x = \sum_{n=0}^{\infty} \frac{x^n}{n!} = 1 + x + \frac{1}{2}x^2 + \frac{1}{3!}x^3 + \dots$

Once again, notice how the power series clearly has the property that  $y' = y$  (as well as  $y(0) = 1$ ).

It follows from here that, for instance,  $e^{2x} = \sum_{n=0}^{\infty} \frac{(2x)^n}{n!} = 1 + 2x + 2x^2 + \frac{4}{3}x^3 + \dots$

**Example 101.** Determine the power series for  $7e^{3x}$  (at  $x = 0$ ).

**Solution.** Instead of starting from scratch, we can use that  $e^x = \sum_{n=0}^{\infty} \frac{x^n}{n!}$  to conclude that

$$7e^{3x} = 7 \sum_{n=0}^{\infty} \frac{(3x)^n}{n!} = \sum_{n=0}^{\infty} \frac{7 \cdot 3^n}{n!} x^n = 7 + 21x + \frac{63}{2}x^2 + \frac{63}{2}x^3 + \frac{189}{8}x^4 + \dots$$

## Power series solutions to DE

Given any DE, we can approximate analytic solutions by working with the first few terms of the power series.

**Example 102. (Airy equation, part I)** Let  $y(x)$  be the unique solution to the IVP  $y'' = xy$ ,  $y(0) = a$ ,  $y'(0) = b$ . Determine the first several terms (up to  $x^6$ ) in the power series of  $y(x)$ .

**Solution. (successive differentiation)** From the DE,  $y''(0) = 0 \cdot y(0) = 0$ .

Differentiating both sides of the DE, we obtain  $y''' = y + xy'$  so that  $y'''(0) = y(0) + 0 \cdot y'(0) = a$ .

Likewise,  $y^{(4)} = 2y' + xy''$  shows  $y^{(4)}(0) = 2y'(0) = 2b$ .

Continuing,  $y^{(5)} = 3y'' + xy'''$  so that  $y^{(5)}(0) = 3y''(0) = 0$ .

Continuing,  $y^{(6)} = 4y''' + xy^{(4)}$  so that  $y^{(6)}(0) = 4y'''(0) = 4a$ .

Hence,  $y(x) = a + bx + \frac{1}{2}y''(0)x^2 + \frac{1}{6}y'''(0)x^3 + \frac{1}{24}y^{(4)}(0)x^4 + \frac{1}{120}y^{(5)}(0)x^5 + \frac{1}{720}y^{(6)}(0)x^6 + \dots$   
 $= a + bx + \frac{a}{6}x^3 + \frac{b}{12}x^4 + \frac{a}{180}x^6 + \dots$

**Comment.** Do you see the general pattern? We will revisit this example soon.

**Solution. (plug in power series)** The powers series  $y = a_0 + a_1x + a_2x^2 + a_3x^3 + a_4x^4 + \dots$  becomes  $y = a + bx + a_2x^2 + a_3x^3 + a_4x^4 + \dots$  because of the initial conditions.

To determine  $a_2, a_3, a_4, a_5, a_6$ , we equate the coefficients of:

$$\begin{aligned} y'' &= 2a_2 + 6a_3x + 12a_4x^2 + 20a_5x^3 + 30a_6x^4 + \dots \\ xy &= ax + bx^2 + a_2x^3 + a_3x^4 + \dots \end{aligned}$$

We find  $2a_2 = 0$ ,  $6a_3 = a$ ,  $12a_4 = b$ ,  $20a_5 = a_2$ ,  $30a_6 = a_3$ .

So  $a_2 = 0$ ,  $a_3 = \frac{a}{6}$ ,  $a_4 = \frac{b}{12}$ ,  $a_5 = \frac{a_2}{20} = 0$ ,  $a_6 = \frac{a_3}{30} = \frac{a}{180}$ . Hence,  $y(x) = a + bx + \frac{a}{6}x^3 + \frac{b}{12}x^4 + \frac{a}{180}x^6 + \dots$

**Notation.** When working with power series  $\sum_{n=0}^{\infty} a_nx^n$ , we sometimes write  $O(x^n)$  to indicate that we omit terms that are multiples of  $x^n$ :

**For instance.**  $e^x = 1 + x + \frac{1}{2}x^2 + O(x^3)$  or  $\cos(x) = 1 - \frac{1}{2}x^2 + \frac{1}{24}x^4 + O(x^6)$ .

**Example 103.** Let  $y(x)$  be the unique solution to the IVP  $y' = x^2 + y^2$ ,  $y(0) = 1$ .

Determine the first several terms (up to  $x^4$ ) in the power series of  $y(x)$ .

**Solution. (successive differentiation—for humans)** From the DE,  $y'(0) = 0^2 + y(0)^2 = 1$ .

Differentiating both sides of the DE, we obtain  $y'' = 2x + 2yy'$ . In particular,  $y''(0) = 2$ .

Continuing,  $y''' = 2 + 2(y')^2 + 2yy''$  so that  $y'''(0) = 2 + 2 + 2 \cdot 2 = 8$ .

Likewise,  $y^{(4)} = 6y'y'' + 2yy'''$  so that  $y^{(4)}(0) = 12 + 16 = 28$ .

Hence,  $y(x) = y(0) + y'(0)x + \frac{1}{2}y''(0)x^2 + \frac{1}{6}y'''(0)x^3 + \frac{1}{24}y^{(4)}(0)x^4 + \dots = 1 + x + x^2 + \frac{4}{3}x^3 + \frac{7}{6}x^4 + \dots$

**Comment.** This approach requires the (symbolic) computation of intermediate derivatives. This is costly (even just the size of the simplified formulas is quickly increasing) and so the solution below is usually preferable for practical purposes. However, successive differentiation works well when working by hand.

**Solution. (plug in power series—for computers)** The powers series  $y = a_0 + a_1x + a_2x^2 + a_3x^3 + a_4x^4 + \dots$  simplifies to  $y = 1 + a_1x + a_2x^2 + a_3x^3 + a_4x^4 + \dots$  because of the initial condition.

Therefore,  $y' = a_1 + 2a_2x + 3a_3x^2 + 4a_4x^3 + \dots$

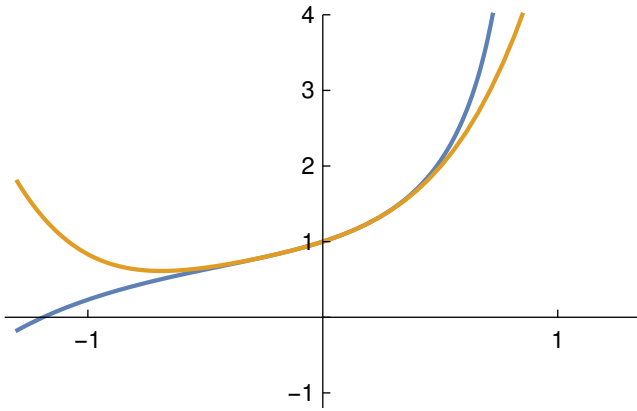
To determine  $a_2, a_3, a_4, a_5$ , we need to expand  $x^2 + y^2$  into a power series:

$$y^2 = 1 + 2a_1x + (2a_2 + a_1^2)x^2 + (2a_3 + 2a_1a_2)x^3 + (2a_4 + 2a_1a_3 + a_2^2)x^4 + \dots \quad [\text{we don't need the last term}]$$

Equating coefficients of  $y'$  and  $x^2 + y^2$ , we find  $a_1 = 1$ ,  $2a_2 = 2a_1$ ,  $3a_3 = 1 + 2a_2 + a_1^2$ ,  $4a_4 = 2a_3 + 2a_1a_2$ .

So  $a_1 = 1$ ,  $a_2 = 1$ ,  $a_3 = \frac{4}{3}$ ,  $a_4 = \frac{7}{6}$  and, hence,  $y(x) = 1 + x + x^2 + \frac{4}{3}x^3 + \frac{7}{6}x^4 + \dots$

Below is a plot of  $y(x)$  (in blue) and our approximation:



Note how the approximation is very good close to 0 but does not provide us with a “global picture”.

**Example 104.** Let  $y(x)$  be the unique solution to the IVP  $y'' = \cos(x + y)$ ,  $y(0) = 0$ ,  $y'(0) = 1$ . Determine the first several terms (up to  $x^5$ ) in the power series of  $y(x)$ .

**Solution. (successive differentiation—for humans)** From the DE,  $y''(0) = \cos(0 + y(0)) = 1$ .

Differentiating both sides of the DE, we obtain  $y''' = -\sin(x + y)(1 + y')$ .

In particular,  $y'''(0) = -\sin(0 + y(0))(1 + y'(0)) = 0$ .

Likewise,  $y^{(4)} = -\cos(x + y)(1 + y')^2 - \sin(x + y)y''$  shows  $y^{(4)}(0) = -1 \cdot 2^2 - 0 = -4$ .

Continuing,  $y^{(5)} = \sin(x + y)(1 + y')^3 - 3\cos(x + y)(1 + y')y'' - \sin(x + y)y'''$  so that  $y^{(5)}(0) = -6$ .

Hence,  $y(x) = x + \frac{1}{2}y''(0)x^2 + \frac{1}{6}y'''(0)x^3 + \frac{1}{24}y^{(4)}(0)x^4 + \frac{1}{120}y^{(5)}(0)x^5 + \dots = x + \frac{1}{2}x^2 - \frac{1}{6}x^4 - \frac{1}{20}x^5 + \dots$

**Solution. (plug in power series—for computers)** The powers series  $y = a_0 + a_1x + a_2x^2 + a_3x^3 + a_4x^4 + \dots$  simplifies to  $y = x + a_2x^2 + a_3x^3 + a_4x^4 + \dots$  because of the initial conditions.

Therefore,  $y' = 1 + 2a_2x + 3a_3x^2 + 4a_4x^3 + \dots$  and  $y'' = 2a_2 + 6a_3x + 12a_4x^2 + 20a_5x^3 + \dots$

To determine  $a_2, a_3, a_4, a_5$ , we need to expand  $\cos(x + y)$  into a power series:

Recall that  $\cos(x) = 1 - \frac{1}{2}x^2 + \frac{1}{24}x^4 + \dots$

Hence,  $\cos(x + y) = 1 - \frac{1}{2}(x + y)^2 + \frac{1}{24}(x + y)^4 + \dots = 1 - \frac{1}{2}x^2 - xy - \frac{1}{2}y^2 + O(x^4)$ .

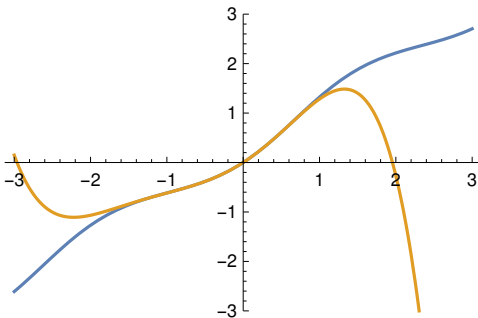
Since  $y^2 = (x + a_2x^2 + a_3x^3 + \dots)^2 = x^2 + 2a_2x^3 + O(x^4)$ ,

$\cos(x + y) = 1 - \frac{1}{2}x^2 - x(x + a_2x^2) - \frac{1}{2}(x^2 + 2a_2x^3) + O(x^4) = 1 - 2x^2 - 2a_2x^3 + O(x^4)$ .

Equating coefficients of  $y''$  and  $\cos(x + y)$ , we find  $2a_2 = 1$ ,  $6a_3 = 0$ ,  $12a_4 = -2$ ,  $20a_5 = -2a_2$ .

So  $a_2 = \frac{1}{2}$ ,  $a_3 = 0$ ,  $a_4 = -\frac{1}{6}$ ,  $a_5 = -\frac{1}{20}$  and, hence,  $y(x) = x + \frac{1}{2}x^2 - \frac{1}{6}x^4 - \frac{1}{20}x^5 + \dots$

Below is a plot of  $y(x)$  (in blue) and our approximation:



**Review.** If  $y(x)$  is “nice” at  $x = x_0$  (i.e. analytic around  $x = x_0$ ), then

$$y(x) = \sum_{n=0}^{\infty} a_n(x - x_0)^n \quad \text{with} \quad a_n = \frac{y^{(n)}(x_0)}{n!}.$$

In particular, at  $x = 0$ ,

$$y(x) = \sum_{n=0}^{\infty} \frac{y^{(n)}(0)}{n!} x^n = y(0) + y'(0)x + \frac{1}{2}y''(0)x^2 + \frac{1}{6}y'''(0)x^3 + \dots$$

### Power series solutions to linear DEs

Note how in the last two examples the “plug in power series” approach was complicated by the fact that the DE was not linear (we had to expand  $y^2$  as well as  $\cos(x + y)$ , respectively).

For linear DEs, this complication does not arise and we can readily determine the complete power series expansion of analytic solutions (with a recursive description of the coefficients).

**Example 105. (Airy equation, part II)** Let  $y(x)$  be the unique solution to the IVP  $y'' = xy$ ,  $y(0) = a$ ,  $y'(0) = b$ . Determine the power series of  $y(x)$ .

**Solution. (plug in power series)** Let us spell out the power series for  $y$ ,  $y'$ ,  $y''$  and  $xy$ :

$$y(x) = \sum_{n=0}^{\infty} a_n x^n$$

$$y'(x) = \sum_{n=1}^{\infty} n a_n x^{n-1} = \sum_{n=0}^{\infty} (n+1) a_{n+1} x^n$$

$$y''(x) = \sum_{n=2}^{\infty} n(n-1) a_n x^{n-2} = \sum_{n=0}^{\infty} (n+2)(n+1) a_{n+2} x^n$$

$$xy(x) = \sum_{n=0}^{\infty} a_n x^{n+1} = \sum_{n=1}^{\infty} a_{n-1} x^n$$

Hence,  $y'' = xy$  becomes  $\sum_{n=0}^{\infty} (n+2)(n+1) a_{n+2} x^n = \sum_{n=1}^{\infty} a_{n-1} x^n$ . We compare coefficients of  $x^n$ :

- $n = 0$ :  $2 \cdot 1 a_2 = 0$ , so that  $a_2 = 0$ .

- $n \geq 1$ :  $(n+2)(n+1) a_{n+2} = a_{n-1}$

Replacing  $n$  by  $n-2$ , this is equivalent to  $n(n-1) a_n = a_{n-3}$  for  $n \geq 3$ .

In conclusion,  $y(x) = \sum_{n=0}^{\infty} a_n x^n$  with  $a_0 = a$ ,  $a_1 = b$ ,  $a_2 = 0$  as well as, for  $n \geq 3$ ,  $a_n = \frac{1}{n(n-1)} a_{n-3}$ .

**First few terms.** In particular,  $y = a \left( 1 + \frac{x^3}{2 \cdot 3} + \frac{x^6}{(2 \cdot 3)(5 \cdot 6)} + \dots \right) + b \left( x + \frac{x^4}{3 \cdot 4} + \frac{x^7}{(3 \cdot 4)(6 \cdot 7)} + \dots \right)$ .

**Advanced.** The solution with  $y(0) = \frac{1}{3^{2/3} \Gamma(2/3)}$  and  $y'(0) = -\frac{1}{3^{1/3} \Gamma(1/3)}$  is known as the **Airy function**  $\text{Ai}(x)$ .  
[A more natural property of  $\text{Ai}(x)$  is that it satisfies  $y(x) \rightarrow 0$  as  $x \rightarrow \infty$ .]

## Power series of familiar functions

(Unless we specify otherwise, power series are meant to be about  $x = 0$ .)

**Example 106.** Determine the power series for  $\cos(x)$  at  $x = 0$ .

**Solution.** Let  $y(x) = \cos(x)$ . After computing a few derivatives, we realize that  $y^{(2n)}(x) = (-1)^n \cos(x)$  and  $y^{(2n+1)}(x) = -(-1)^n \sin(x)$ . In particular,  $y^{(2n)}(0) = (-1)^n$  and  $y^{(2n+1)}(0) = 0$ . It follows that

$$\cos(x) = \sum_{n=0}^{\infty} \frac{y^{(n)}(0)}{n!} x^n = \sum_{n=0}^{\infty} \frac{(-1)^n}{(2n)!} x^{2n} = 1 - \frac{x^2}{2} + \frac{x^4}{4!} - \frac{x^6}{6!} + \dots$$

**Comment.** Note that the above observations on  $y^{(2n)}$  and  $y^{(2n+1)}$  simply reflect the fact that  $\cos(x)$  is the unique solution to the IVP  $y'' = -y$ ,  $y(0) = 1$ ,  $y'(0) = 0$ .

**Alternatively.** We can also deduce the power series via Euler's formula:  $e^{ix} = \cos(x) + i \sin(x)$ . Since

$$e^{ix} = \sum_{n=0}^{\infty} \frac{(ix)^n}{n!} = \sum_{m=0}^{\infty} \frac{(ix)^{2m}}{(2m)!} + \sum_{m=0}^{\infty} \frac{(ix)^{2m+1}}{(2m+1)!} = \sum_{m=0}^{\infty} \frac{(-1)^m x^{2m}}{(2m)!} + i \sum_{m=0}^{\infty} \frac{(-1)^m x^{2m+1}}{(2m+1)!},$$

we conclude that  $\cos(x) = \sum_{n=0}^{\infty} \frac{(-1)^n}{(2n)!} x^{2n}$  and  $\sin(x) = \sum_{n=0}^{\infty} \frac{(-1)^n}{(2n+1)!} x^{2n+1}$ .

**Example 107.** Determine the first several terms in the power series of  $\sin(2x^3)$  at  $x = 0$ .

**Solution. (direct—unpleasant)** If  $f(x) = \sin(2x^3)$ , then  $f'(x) = 6x^2 \cos(2x^3)$  as well as  $f''(x) = 12x \cos(2x^3) - 36x^4 \sin(2x^3)$  and  $f'''(x) = 12 \cos(2x^3) - 216x^3 \sin(2x^3) + 216x^6 \cos(2x^3)$ .

In particular,  $f(0) = 0$ ,  $f'(0) = 0$ ,  $f''(0) = 0$  and  $f'''(0) = 12$ .

It follows that  $f(x) = f(0) + f'(0)x + \frac{1}{2}f''(0)x^2 + \dots = 0 + 0x + 0x^2 + \frac{12}{3!}x^3 + \dots = 2x^3 + \dots$

**Solution. (via series for sine)** As done in the previous example for  $\cos(x)$ , we can derive that

$$\sin(x) = \sum_{n=0}^{\infty} \frac{(-1)^n}{(2n+1)!} x^{2n+1} = x - \frac{1}{6}x^3 + \frac{1}{120}x^5 - \dots$$

It follows that

$$\begin{aligned} \sin(2x^3) &= \sum_{n=0}^{\infty} \frac{(-1)^n}{(2n+1)!} (2x^3)^{2n+1} = \sum_{n=0}^{\infty} \frac{(-1)^n 2^{2n+1}}{(2n+1)!} x^{6n+3} \\ &= \frac{2^1}{1!} x^3 - \frac{2^3}{3!} x^9 + \frac{2^5}{5!} x^{15} - \dots = 2x^3 - \frac{4}{3}x^9 + \frac{4}{15}x^{15} - \dots \end{aligned}$$

## Power series solutions to linear DEs: radius of convergence

Once we have a power series solution  $y(x)$ , a natural question is: for which  $x$  does the series converge?

**Recall.** A power series  $y(x) = \sum_{n=0}^{\infty} a_n(x-x_0)^n$  has a **radius of convergence**  $R$ .

The series converges for all  $x$  with  $|x-x_0| < R$  and it diverges for all  $x$  with  $|x-x_0| > R$ .

**Definition 108.** Consider the linear DE  $y^{(n)} + p_{n-1}(x)y^{(n-1)} + \dots + p_1(x)y' + p_0(x)y = f(x)$ .  $x_0$  is called an **ordinary point** if the coefficients  $p_j(x)$ , as well as  $f(x)$ , are analytic at  $x = x_0$ . Otherwise,  $x_0$  is called a **singular point**.

**Example 109.** Determine the singular points of  $(x+2)y'' - x^2y' + 3y = 0$ .

**Solution.** Rewriting the DE as  $y'' - \frac{x^2}{x+2}y' + \frac{3}{x+2}y = 0$ , we see that the only singular point is  $x = -2$ .

**Example 110.** Determine the singular points of  $(x^2+1)y''' = \frac{y}{x-5}$ .

**Solution.** Rewriting the DE as  $y''' - \frac{1}{(x-5)(x^2+1)}y = 0$ , we see that the singular points are  $x = \pm i, 5$ .

**Theorem 111.** Consider the linear DE  $y^{(n)} + p_{n-1}(x)y^{(n-1)} + \dots + p_1(x)y' + p_0(x)y = f(x)$ . Suppose that  $x_0$  is an ordinary point and that  $R$  is the distance to the closest singular point. Then any IVP specifying  $y(x_0), y'(x_0), \dots, y^{(n-1)}(x_0)$  has a power series solution  $y(x) = \sum_{n=0}^{\infty} a_n(x-x_0)^n$  and that series has radius of convergence at least  $R$ .

**In particular.** The DE has a general solution consisting of  $n$  solutions  $y(x)$  that are analytic at  $x = x_0$ .

**Comment.** Most textbooks only discuss the case of 2nd order DEs. For a discussion of the higher order case (in terms of first order systems!) see, for instance, Chapter 4.5 in *Ordinary Differential Equations* by N. Lebovitz. The book is freely available at: <http://people.cs.uchicago.edu/~lebovitz/odes.html>

**Example 112.** Find a minimum value for the radius of convergence of a power series solution to  $(x+2)y'' - x^2y' + 3y = 0$  at  $x = 3$ .

**Solution.** As before, rewriting the DE as  $y'' - \frac{x^2}{x+2}y' + \frac{3}{x+2}y = 0$ , we see that the only singular point is  $x = -2$ .

Note that  $x = 3$  is an ordinary point of the DE and that the distance to the singular point is  $|3 - (-2)| = 5$ .

Hence, the DE has power series solutions about  $x = 3$  with radius of convergence at least 5.

**Example 113.** Find a minimum value for the radius of convergence of a power series solution to  $(x^2+1)y''' = \frac{y}{x-5}$  at  $x = 2$ .

**Solution.** As before, rewriting the DE as  $y''' - \frac{1}{(x-5)(x^2+1)}y = 0$ , we see that the singular points are  $x = \pm i, 5$ .

Note that  $x = 2$  is an ordinary point of the DE and that the distance to the nearest singular point is  $|2 - i| = \sqrt{5}$  (the distances are  $|2 - 5| = 3$ ,  $|2 - i| = |2 - (-i)| = \sqrt{2^2 + 1^2} = \sqrt{5}$ ).

Hence, the DE has power series solutions about  $x = 2$  with radius of convergence at least  $\sqrt{5}$ .

**Example 114. (Airy equation, once more)** Let  $y(x)$  be the solution to the IVP  $y'' = xy$ ,  $y(0) = a$ ,  $y'(0) = b$ . Earlier, we determined the power series of  $y(x)$ . What is its radius of convergence?

**Solution.**  $y'' = xy$  has no singular points. Hence, the radius of convergence is  $\infty$ . (In other words, the power series converges for all  $x$ .)

**Review.** Theorem 111: If  $x_0$  is an ordinary point of a linear IVP, then it is guaranteed to have a power series solution  $y(x) = \sum_{n=0}^{\infty} a_n(x - x_0)^n$ .

Moreover, its radius of convergence is at least the distance between  $x_0$  and the closest singular point.

**Example 115.** Find a minimum value for the radius of convergence of a power series solution to  $(x^2 + 4)y'' - 3xy' + \frac{1}{x+1}y = 0$  at  $x = 2$ .

**Solution.** The singular points are  $x = \pm 2i, -1$ . Hence,  $x = 2$  is an ordinary point of the DE and the distance to the nearest singular point is  $|2 - 2i| = \sqrt{2^2 + 2^2} = \sqrt{8}$  (the distances are  $|2 - (-1)| = 3, |2 - (\pm 2i)| = \sqrt{8}$ ). By Theorem 111, the DE has power series solutions about  $x = 2$  with radius of convergence at least  $\sqrt{8}$ .

**Example 116. (caution!)** Theorem 111 only holds for linear DEs! For nonlinear DEs, it is very hard to predict whether there is a power series solution and what its radius of convergence is.

Consider, for instance, the nonlinear DE  $y' - y^2 = 0$ .

Its coefficients have no singularities. A solution to this DE is  $y(x) = \frac{1}{1-x} = \sum_{n=0}^{\infty} x^n$  (see Example 120), which clearly has a problem at  $x = 1$  (the radius of convergence is 1).

**On the other hand.**  $y(x)$  also solves the linear DE  $(1-x)y' - y = 0$  (or, even simpler, the order 0 "differential" equation  $(1-x)y = 1$ ). Note how the DE has the singular point  $x = 1$ . Theorem 111 then allows us to predict that  $y(x)$  must have a power series with radius of convergence at least 1.

**Example 117. (Bessel functions)** Consider the DE  $x^2y'' + xy' + x^2y = 0$ . Derive a recursive description of a power series solutions  $y(x)$  at  $x = 0$ .

**Caution!** Note that  $x = 0$  is a singular point (the only) of the DE. Theorem 111 therefore does not guarantee a basis of power series solutions. [However,  $x = 0$  is what is called a **regular singular point**; for these, we are guaranteed one power series solution, as well as additional solutions expressed using logarithms and power series.]

**Comment.** We could divide the DE by  $x$  (but that wouldn't really change the computations below). The reason for not dividing that  $x$  is that this DE is the special case  $\alpha = 0$  of the **Bessel equation**  $x^2y'' + xy' + (x^2 - \alpha^2)y = 0$  (for which no such dividing is possible).

**Solution. (plug in power series)** Let us spell out power series for  $x^2y, xy', x^2y''$  starting with  $y(x) = \sum_{n=0}^{\infty} a_n x^n$ :

$$x^2y(x) = \sum_{n=0}^{\infty} a_n x^{n+2} = \sum_{n=2}^{\infty} a_{n-2} x^n$$

$$xy'(x) = \sum_{n=1}^{\infty} n a_n x^n \quad (\text{because } y'(x) = \sum_{n=1}^{\infty} n a_n x^{n-1})$$

$$x^2y''(x) = \sum_{n=2}^{\infty} n(n-1) a_n x^n \quad (\text{because } y''(x) = \sum_{n=2}^{\infty} n(n-1) a_n x^{n-2})$$

Hence, the DE becomes  $\sum_{n=2}^{\infty} n(n-1) a_n x^n + \sum_{n=1}^{\infty} n a_n x^n + \sum_{n=2}^{\infty} a_{n-2} x^n = 0$ . We compare coefficients of  $x^n$ :

- $n = 1: a_1 = 0$
- $n \geq 2: n(n-1)a_n + n a_n + a_{n-2} = 0$ , which simplifies to  $n^2 a_n = -a_{n-2}$ .

It follows that  $a_{2n} = \frac{(-1)^n}{4^n n!^2} a_0$  and  $a_{2n+1} = 0$ .

**Observation.** The fact that we found  $a_1 = 0$  reflects the fact that we cannot represent the general solution through power series alone.

**Comment.** If  $a_0 = 1$ , the function we found is a **Bessel function** and denoted as  $J_0(x) = \sum_{n=0}^{\infty} \frac{(-1)^n}{n!^2} \left(\frac{x}{2}\right)^{2n}$ .

The more general Bessel functions  $J_\alpha(x)$  are solutions to the DE  $x^2y'' + xy' + (x^2 - \alpha^2)y = 0$ .

**Example 118. (caution!)** Consider the linear DE  $x^2y' = y - x$ . Does it have a convergent power series solution at  $x = 0$ ?

**Important note.** The DE  $x^2y' = y - x$  has the singular point  $x = 0$ . Hence, Theorem 111 does not apply.

**Advanced.** Moreover, in contrast to the previous example,  $x = 0$  is not a **regular singular point**. Indeed, as we see below, there is no power series solution of the DE at all.

**Solution.** Let us look for a power series solution  $y(x) = \sum_{n=0}^{\infty} a_n x^n$ .

$$x^2y'(x) = x^2 \sum_{n=1}^{\infty} n a_n x^{n-1} = \sum_{n=1}^{\infty} n a_n x^{n+1} = \sum_{n=2}^{\infty} (n-1) a_{n-1} x^n$$

Hence,  $x^2y' = y - x$  becomes  $\sum_{n=2}^{\infty} (n-1) a_{n-1} x^n = \sum_{n=0}^{\infty} a_n x^n - x$ . We compare coefficients of  $x^n$ :

- $n = 0$ :  $a_0 = 0$ .
- $n = 1$ :  $0 = a_1 - 1$ , so that  $a_1 = 1$ .
- $n \geq 2$ :  $(n-1)a_{n-1} = a_n$ , from which it follows that  $a_n = (n-1)a_{n-1} = (n-1)(n-2)a_{n-2} = \cdots = (n-1)!a_1 = (n-1)!$ .

Hence the DE has the “formal” power series solution  $y(x) = \sum_{n=1}^{\infty} (n-1)!x^n$ .

However, that series is divergent for all  $x \neq 0$ ; that is, the radius of convergence is 0.

**Power series of familiar functions, continued**

**Example 119.** The **hyperbolic cosine**  $\cosh(x)$  is defined to be the even part of  $e^x$ . In other words,  $\cosh(x) = \frac{1}{2}(e^x + e^{-x})$ . Determine its power series.

**Solution.** It follows from  $e^x = \sum_{n=0}^{\infty} \frac{x^n}{n!}$  that  $\cosh(x) = \sum_{n=0}^{\infty} \frac{x^{2n}}{(2n)!}$ .

**Comment.** Note that  $\cosh(ix) = \cos(x)$  (because  $\cos(x) = \frac{1}{2}(e^{ix} + e^{-ix})$ ).

**Comment.** The hyperbolic sine  $\sinh(x) = \sum_{n=0}^{\infty} \frac{x^{2n+1}}{(2n+1)!}$  is similarly defined to be the odd part of  $e^x$ .

**Example 120. (geometric series)**  $\sum_{n=0}^{\infty} x^n = \frac{1}{1-x}$

**Why?** If  $y(x) = \sum_{n=0}^{\infty} x^n$ , then  $xy = y - 1$  (write down the power series for both sides!). Hence,  $y = \frac{1}{1-x}$ .

Alternatively, start with  $y = \frac{1}{1-x}$  and note that  $y$  solves the order 0 “differential” (inhomogeneous) equation  $(1-x)y = 1$ . We can then determine a power series solution as we did in Example 105 to find  $y = \sum_{n=0}^{\infty} x^n$ .

**Example 121.** Determine a power series for  $\frac{1}{1+x^2}$ .

**Solution.** Replace  $x$  with  $-x^2$  in  $\frac{1}{1-x} = \sum_{n=0}^{\infty} x^n$  (geometric series!) to get  $\frac{1}{1+x^2} = \sum_{n=0}^{\infty} (-1)^n x^{2n}$ .

**Example 122.** Determine a power series for  $\arctan(x)$ .

**Solution.** Recall that  $\arctan(x) = \int \frac{dx}{1+x^2} + C$ . Hence, we need to integrate  $\frac{1}{1+x^2} = \sum_{n=0}^{\infty} (-1)^n x^{2n}$ .

It follows that  $\arctan(x) = \sum_{n=0}^{\infty} (-1)^n \frac{x^{2n+1}}{2n+1} + C$ . Since  $\arctan(0) = 0$ , we conclude that  $C = 0$ .

**Example 123.** Determine a power series for  $\ln(x)$  around  $x = 1$ .

**Solution.** This is equivalent to finding a power series for  $\ln(x+1)$  around  $x = 0$  (see the final step).

Observe that  $\ln(x+1) = \int \frac{dx}{1+x} + C$  and that  $\frac{1}{1+x} = \sum_{n=0}^{\infty} (-1)^n x^n$ .

Integrating,  $\ln(x+1) = \sum_{n=0}^{\infty} (-1)^n \frac{x^{n+1}}{n+1} + C$ . Since  $\ln(1) = 0$ , we conclude that  $C = 0$ .

Finally,  $\ln(x+1) = \sum_{n=0}^{\infty} (-1)^n \frac{x^{n+1}}{n+1}$  is equivalent to  $\ln(x) = \sum_{n=0}^{\infty} \frac{(-1)^n}{n+1} (x-1)^{n+1}$ .

**Comment.** Choosing  $x = 2$  in  $\ln(x) = \sum_{n=0}^{\infty} \frac{(-1)^n}{n+1} (x-1)^{n+1}$  results in  $\ln(2) = \sum_{n=0}^{\infty} \frac{(-1)^n}{n+1} = 1 - \frac{1}{2} + \frac{1}{3} - \frac{1}{4} + \dots$

The latter is the alternating harmonic sum.

Can you see from the series for  $\ln(x)$  why the harmonic sum  $1 + \frac{1}{2} + \frac{1}{3} + \frac{1}{4} + \dots$  diverges?

**Example 124. (error function)** Determine a power series for  $\operatorname{erf}(x) = \frac{2}{\sqrt{\pi}} \int_0^x e^{-t^2} dt$ .

**Solution.** It follows from  $e^x = \sum_{n=0}^{\infty} \frac{x^n}{n!}$  that  $e^{-t^2} = \sum_{n=0}^{\infty} \frac{(-1)^n t^{2n}}{n!}$ .

Integrating, we obtain  $\operatorname{erf}(x) = \frac{2}{\sqrt{\pi}} \int_0^x e^{-t^2} dt = \frac{2}{\sqrt{\pi}} \sum_{n=0}^{\infty} \frac{(-1)^n x^{2n+1}}{n!(2n+1)}$ .

**Example 125.** Determine the first several terms (up to  $x^5$ ) in the power series of  $\tan(x)$ .

**Solution.** Observe that  $y(x) = \tan(x)$  is the unique solution to the IVP  $y' = 1 + y^2$ ,  $y(0) = 0$ .

We can therefore proceed to determine the first few power series coefficients as we did earlier.

That is, we plug  $y = a_0 + a_1x + a_2x^2 + a_3x^3 + a_4x^4 + \dots$  into the DE. Note that  $y(0) = 0$  means  $a_0 = 0$ .

$$y' = a_1 + 2a_2x + 3a_3x^2 + 4a_4x^3 + 5a_5x^4 + \dots$$

$$1 + y^2 = 1 + (a_1x + a_2x^2 + a_3x^3 + \dots)^2 = 1 + a_1^2x^2 + (2a_1a_2)x^3 + (2a_1a_3 + a_2^2)x^4 + \dots$$

Comparing coefficients, we find:  $a_1 = 1$ ,  $2a_2 = 0$ ,  $3a_3 = a_1^2$ ,  $4a_4 = 2a_1a_2$ ,  $5a_5 = 2a_1a_3 + a_2^2$ .

Solving for  $a_2, a_3, \dots$ , we conclude that  $\tan(x) = x + \frac{x^3}{3} + \frac{2x^5}{15} + \frac{17x^7}{315} + \dots$

**Comment.** The fact that  $\tan(x)$  is an odd function translates into  $a_n = 0$  when  $n$  is even. If we had realized that at the beginning, our computation would have been simplified.

**Advanced comment.** The full power series is  $\tan(x) = \sum_{n=1}^{\infty} \frac{(-1)^{n-1} 2^{2n} (2^{2n} - 1) B_{2n}}{(2n)!} x^{2n-1}$ .

Here, the numbers  $B_{2n}$  are (rather mysterious) rational numbers known as **Bernoulli numbers**.

The radius of convergence is  $\pi/2$ . Note that this is not at all obvious from the DE  $y' = 1 + y^2$ . This illustrates the fact that nonlinear DEs are much more complicated than linear ones. (There is no analog of Theorem 111.)

## Inverses of power series

**Review.** By the geometric series,  $\sum_{n=0}^{\infty} x^n = \frac{1}{1-x}$  (provided that  $|x| < 1$ ).

**Example 126.** Derive a recursive description of the power series for  $y(x) = \frac{1}{1-x-x^2}$ .

**Solution.** Note that  $y(x)$  satisfies the “differential” equation  $(1-x-x^2)y = 1$  of order 0 (as such, we need 0 initial conditions). We can therefore determine a power series solution as we did in Example 105:

Write  $y(x) = \sum_{n=0}^{\infty} a_n x^n$ . Then

$$\begin{aligned} 1 = (1-x-x^2) \sum_{n=0}^{\infty} a_n x^n &= \sum_{n=0}^{\infty} a_n x^n - \sum_{n=0}^{\infty} a_n x^{n+1} - \sum_{n=0}^{\infty} a_n x^{n+2} \\ &= \sum_{n=0}^{\infty} a_n x^n - \sum_{n=1}^{\infty} a_{n-1} x^n - \sum_{n=2}^{\infty} a_{n-2} x^n. \end{aligned}$$

We compare coefficients of  $x^n$ :

- $n=0$ :  $1 = a_0$ .
- $n=1$ :  $0 = a_1 - a_0$ , so that  $a_1 = a_0 = 1$ .
- $n \geq 2$ :  $0 = a_n - a_{n-1} - a_{n-2}$  or, equivalently,  $a_n = a_{n-1} + a_{n-2}$ .

This is the recursive description of the Fibonacci numbers  $F_n$ ! In particular  $a_n = F_n$ .

**The first few terms.**  $\frac{1}{1-x-x^2} = 1 + x + 2x^2 + 3x^3 + 5x^4 + 8x^5 + 13x^6 + \dots$

**Comment.** The function  $y(x)$  is said to be a **generating function** for the Fibonacci numbers.

**Challenge.** Can you rederive Binet's formula from partial fractions and the geometric series?

**Example 127. (HW)** Derive a recursive description of the power series for  $y(x) = \frac{1+7x}{1-x-2x^2}$ .

**Solution.** Write  $y(x) = \sum_{n=0}^{\infty} a_n x^n$ . Then

$$\begin{aligned} 1+7x = (1-x-2x^2) \sum_{n=0}^{\infty} a_n x^n &= \sum_{n=0}^{\infty} a_n x^n - \sum_{n=0}^{\infty} a_n x^{n+1} - 2 \sum_{n=0}^{\infty} a_n x^{n+2} \\ &= \sum_{n=0}^{\infty} a_n x^n - \sum_{n=1}^{\infty} a_{n-1} x^n - 2 \sum_{n=2}^{\infty} a_{n-2} x^n. \end{aligned}$$

We compare coefficients of  $x^n$ :

- $n=0$ :  $1 = a_0$ .
- $n=1$ :  $7 = a_1 - a_0$ , so that  $a_1 = 7 + a_0 = 8$ .
- $n \geq 2$ :  $0 = a_n - a_{n-1} - 2a_{n-2}$ .

If we prefer, we can rewrite the final recurrence as  $a_{n+2} - a_{n+1} - 2a_n = 0$  for  $n \geq 0$ . The initial conditions are  $a_0 = 1$ ,  $a_1 = 8$ .

**Comment.** In terms of the recurrence operator  $N$ , the recurrence is  $(N^2 - N - 2)a_n = 0$ .

**Comment.** As in Example 44, we can solve this recurrence and obtain a Binet-like formula for  $a_n$ . In this particular case, we find  $a_n = 3 \cdot 2^n - 2(-1)^n$ .

**Example 128. (extra)** For each of the following compute the first few terms of the power series.

(a)  $(a_0 + a_1x + a_2x^2 + \dots)(b_0 + b_1x + b_2x^2\dots)$

(b)  $\frac{1}{a_0 + a_1x + a_2x^2 + \dots}$

(c)  $\frac{1}{1 + x + \frac{1}{2}x^2 + \frac{1}{6}x^3 + \dots}$

**Solution.**

(a)  $a_0b_0 + (a_0b_1 + a_1b_0)x + (a_0b_2 + a_1b_1 + a_2b_0)x^2 + O(x^3)$

(b) The answer is  $b_0 + b_1x + \dots$  with the property that  $(a_0 + a_1x + a_2x^2 + \dots)(b_0 + b_1x + b_2x^2\dots) = 1$ .

By the first part, and comparing coefficients,  $a_0b_0 = 1$ ,  $a_0b_1 + a_1b_0 = 0$ ,  $a_0b_2 + a_1b_1 + a_2b_0 = 0$ , ...

Hence,  $b_0 = \frac{1}{a_0}$ ,  $b_1 = -\frac{1}{a_0}(a_1b_0) = -\frac{a_1}{a_0^2}$ ,  $b_2 = -\frac{1}{a_0}(a_1b_1 + a_2b_0) = \frac{a_1^2}{a_0^3} - \frac{a_2}{a_0^2}$ .

(c)  $\frac{1}{1 + x + \frac{1}{2}x^2 + \frac{1}{6}x^3 + \dots} = 1 - x + \frac{1}{2}x^2 - \frac{1}{6}x^3 + \dots$

**Comment.** This reflects  $\frac{1}{e^x} = e^{-x}$ .

## Fourier series

The following amazing fact is saying that any  $2\pi$ -periodic function can be written as a sum of cosines and sines.

**Advertisement.** In Linear Algebra II, we will see the following natural way to look at Fourier series: the functions  $1, \cos(t), \sin(t), \cos(2t), \sin(2t), \dots$  are orthogonal to each other (for that to make sense, we need to think of functions as vectors and introduce a natural inner product). In fact, they form an orthogonal basis for the space of piecewise smooth functions. In that setting, the formulas for the coefficients  $a_n$  and  $b_n$  are nothing but the usual projection formulas for orthogonal projection onto a single vector.

**Theorem 129.** Every\*  $2\pi$ -periodic function  $f$  can be written as a **Fourier series**

$$f(t) = \frac{a_0}{2} + \sum_{n=1}^{\infty} (a_n \cos(nt) + b_n \sin(nt)).$$

Technical detail\*:  $f$  needs to be, e.g., piecewise smooth.

Also, if  $t$  is a discontinuity of  $f$ , then the Fourier series converges to the average  $\frac{f(t^-) + f(t^+)}{2}$ .

The **Fourier coefficients**  $a_n, b_n$  are unique and can be computed as

$$a_n = \frac{1}{\pi} \int_{-\pi}^{\pi} f(t) \cos(nt) dt, \quad b_n = \frac{1}{\pi} \int_{-\pi}^{\pi} f(t) \sin(nt) dt.$$

**Comment.** Another common way to write Fourier series is  $f(t) = \sum_{n=-\infty}^{\infty} c_n e^{int}$ .

These two ways are equivalent; we can convert between them using Euler's identity  $e^{int} = \cos(nt) + i \sin(nt)$ .

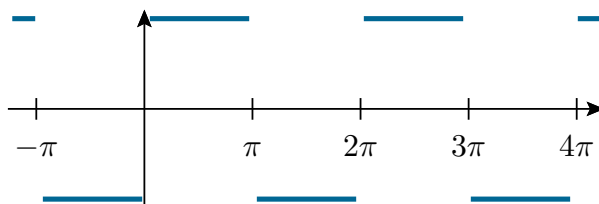
**Definition 130.** Let  $L > 0$ .  $f(t)$  is  **$L$ -periodic** if  $f(t+L) = f(t)$  for all  $t$ . The smallest such  $L$  is called the **(fundamental) period** of  $f$ .

**Example 131.** The fundamental period of  $\cos(nt)$  is  $2\pi/n$ .

**Example 132.** The trigonometric functions  $\cos(nt)$  and  $\sin(nt)$  are  $2\pi$ -periodic for every integer  $n$ . And so are their linear combinations. (Thus,  $2\pi$ -periodic functions form a vector space!)

**Example 133.** Find the Fourier series of the  $2\pi$ -periodic function  $f(t)$  defined by

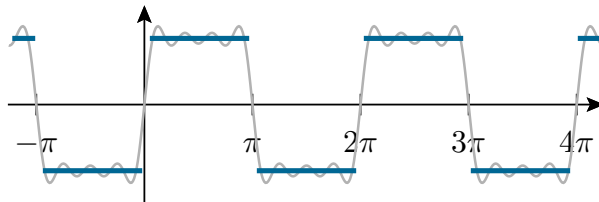
$$f(t) = \begin{cases} -1, & \text{for } t \in (-\pi, 0), \\ +1, & \text{for } t \in (0, \pi), \\ 0, & \text{for } t = -\pi, 0, \pi. \end{cases}$$



**Solution.** We compute  $a_0 = \frac{1}{\pi} \int_{-\pi}^{\pi} f(t) dt = 0$ , as well as

$$\begin{aligned} a_n &= \frac{1}{\pi} \int_{-\pi}^{\pi} f(t) \cos(nt) dt = \frac{1}{\pi} \left[ - \int_{-\pi}^0 \cos(nt) dt + \int_0^{\pi} \cos(nt) dt \right] = 0 \\ b_n &= \frac{1}{\pi} \int_{-\pi}^{\pi} f(t) \sin(nt) dt = \frac{1}{\pi} \left[ - \int_{-\pi}^0 \sin(nt) dt + \int_0^{\pi} \sin(nt) dt \right] = \frac{2}{\pi n} [1 - \cos(n\pi)] \\ &= \frac{2}{\pi n} [1 - (-1)^n] = \begin{cases} \frac{4}{\pi n} & \text{if } n \text{ is odd} \\ 0 & \text{if } n \text{ is even} \end{cases} \end{aligned}$$

In conclusion,  $f(t) = \sum_{\substack{n=1 \\ n \text{ odd}}}^{\infty} \frac{4}{\pi n} \sin(nt) = \frac{4}{\pi} \left( \sin(t) + \frac{1}{3} \sin(3t) + \frac{1}{5} \sin(5t) + \dots \right)$ .



**Observation.** The coefficients  $a_n$  are zero for all  $n$  if and only if  $f(t)$  is odd.

**Comment.** The value of  $f(t)$  for  $t = -\pi, 0, \pi$  is irrelevant to the computation of the Fourier series. They are chosen so that  $f(t)$  is equal to the Fourier series for all  $t$  (recall that, at a jump discontinuity  $t$ , the Fourier series converges to the average  $\frac{f(t^-) + f(t^+)}{2}$ ).

**Comment.** Plot the (sum of the) first few terms of the Fourier series. What do you observe? The “overshooting” is known as the **Gibbs phenomenon**: [https://en.wikipedia.org/wiki/Gibbs\\_phenomenon](https://en.wikipedia.org/wiki/Gibbs_phenomenon)

**Comment.** Set  $t = \frac{\pi}{2}$  in the Fourier series we just computed, to get Leibniz' series  $\pi = 4 \left[ 1 - \frac{1}{3} + \frac{1}{5} - \frac{1}{7} + \dots \right]$ . For such an alternating series, the error made by stopping at the term  $1/n$  is on the order of  $1/n$ . To compute the 768 digits of  $\pi$  to get to the Feynman point (3.14159265...721134999999...), we would (roughly) need  $1/n < 10^{-768}$ , or  $n > 10^{768}$ . That's a lot of terms! (Roger Penrose, for instance, estimates that there are about  $10^{80}$  atoms in the observable universe.)

**Remark.** Convergence of such series is not completely obvious. (Do you recall, for instance, the alternating sign test from Calculus II?) For instance, the (odd part of) the harmonic series  $1 + \frac{1}{3} + \frac{1}{5} + \frac{1}{7} + \dots$  diverges.

**Fourier series with general period**

The case of  $2\pi$ -periodic functions generalizes easily to the case of general periodic functions.

Note that  $\cos(\pi t/L)$  and  $\sin(\pi t/L)$  have period  $2L$ .

**Theorem 134.** Every\*  $2L$ -periodic function  $f$  can be written as a **Fourier series**

$$f(t) = \frac{a_0}{2} + \sum_{n=1}^{\infty} \left( a_n \cos\left(\frac{n\pi t}{L}\right) + b_n \sin\left(\frac{n\pi t}{L}\right) \right).$$

Technical detail\*:  $f$  needs to be, e.g., piecewise smooth.

Also, if  $t$  is a discontinuity, then the Fourier series converges to the average  $\frac{f(t^-) + f(t^+)}{2}$ .

The **Fourier coefficients**  $a_n, b_n$  are unique and can be computed as

$$a_n = \frac{1}{L} \int_{-L}^L f(t) \cos\left(\frac{n\pi t}{L}\right) dt, \quad b_n = \frac{1}{L} \int_{-L}^L f(t) \sin\left(\frac{n\pi t}{L}\right) dt.$$

**Comment.** This follows from Theorem 129 because, if  $f(t)$  has period  $2L$ , then  $\tilde{f}(t) := f(Lt/\pi)$  has period  $2\pi$ .

**Example 135.** Find the Fourier series of the 2-periodic function  $g(t) = \begin{cases} -1 & \text{for } t \in (-1, 0) \\ +1 & \text{for } t \in (0, 1) \\ 0 & \text{for } t = -1, 0, 1 \end{cases}$ .

**Solution.** Instead of computing from scratch, we can use the fact that  $g(t) = f(\pi t)$ , with  $f$  as in the previous example, to get

$$g(t) = f(\pi t) = \sum_{\substack{n=1 \\ n \text{ odd}}}^{\infty} \frac{4}{\pi n} \sin(n\pi t).$$

### Fourier cosine series and Fourier sine series

Suppose we have a function  $f(t)$  which is defined on a finite interval  $[0, L]$ . Depending on the kind of application, we can extend  $f(t)$  to a periodic function in three natural ways; in each case, we can then compute a Fourier series for  $f(t)$  (which will agree with  $f(t)$  on  $[0, L]$ ).

**Comment.** Here, we do not worry about the definition of  $f(t)$  at specific individual points like  $t=0$  and  $t=L$ , or at jump discontinuities. Recall that, at a discontinuity, a Fourier series takes the average value.

(a) We can extend  $f(t)$  to an  $L$ -periodic function.

$$\text{In that case, we obtain the Fourier series } f(t) = \frac{a_0}{2} + \sum_{n=1}^{\infty} \left( a_n \cos\left(\frac{2\pi n t}{L}\right) + b_n \sin\left(\frac{2\pi n t}{L}\right) \right).$$

(b) We can extend  $f(t)$  to an even  $2L$ -periodic function.

$$\text{In that case, we obtain the Fourier cosine series } f(t) = \frac{\tilde{a}_0}{2} + \sum_{n=1}^{\infty} \tilde{a}_n \cos\left(\frac{\pi n t}{L}\right).$$

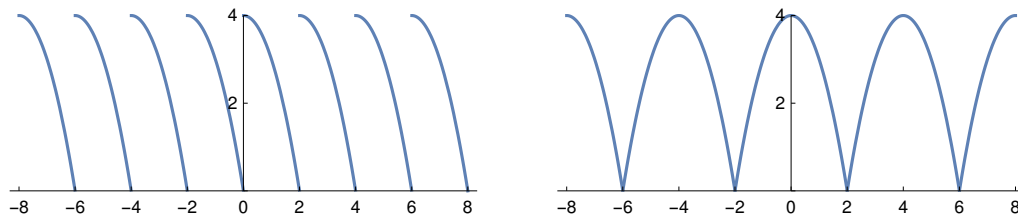
(c) We can extend  $f(t)$  to an odd  $2L$ -periodic function.

$$\text{In that case, we obtain the Fourier sine series } f(t) = \sum_{n=1}^{\infty} \tilde{b}_n \sin\left(\frac{\pi n t}{L}\right).$$

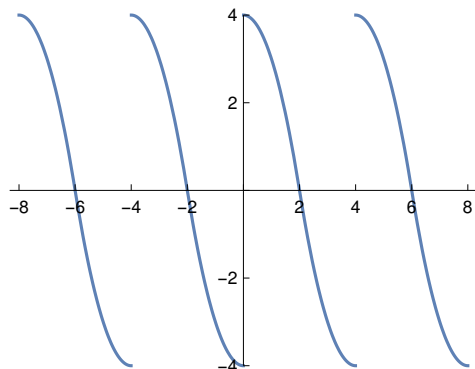
**Example 136.** Consider the function  $f(t) = 4 - t^2$ , defined for  $t \in [0, 2]$ .

- Sketch the 2-periodic extension of  $f(t)$ .
- Sketch the 4-periodic even extension of  $f(t)$ .
- Sketch the 4-periodic odd extension of  $f(t)$ .

**Solution.** The 2-periodic extension as well as the 4-periodic even extension:



The 4-periodic odd extension:



**Example 137.** As in the previous example, consider the function  $f(t) = 4 - t^2$ , defined for  $t \in [0, 2]$ .

- (a) Let  $F(t)$  be the Fourier series of  $f(t)$  (meaning the 2-periodic extension of  $f(t)$ ). Determine  $F(2)$ ,  $F\left(\frac{5}{2}\right)$  and  $F\left(-\frac{1}{2}\right)$ .
- (b) Let  $G(t)$  be the Fourier cosine series of  $f(t)$ . Determine  $G(2)$ ,  $G\left(\frac{5}{2}\right)$  and  $G\left(-\frac{1}{2}\right)$ .
- (c) Let  $H(t)$  be the Fourier sine series of  $f(t)$ . Determine  $H(2)$ ,  $H\left(\frac{5}{2}\right)$  and  $H\left(-\frac{1}{2}\right)$ .

**Solution.**

- (a) Note that the extension of  $f(t)$  has discontinuities at  $\dots, -2, 0, 2, 4, \dots$  (see plot in previous example) and recall that the Fourier series takes average values at these discontinuities:

$$F(2) = \frac{1}{2}(F(2^-) + F(2^+)) = \frac{1}{2}(0 + 4) = 2$$

$$F\left(\frac{5}{2}\right) = F\left(\frac{5}{2} - 2\right) = f\left(\frac{1}{2}\right) = \frac{15}{4}$$

$$F\left(-\frac{1}{2}\right) = F\left(-\frac{1}{2} + 2\right) = f\left(\frac{3}{2}\right) = \frac{7}{4}$$

- (b)  $G(2) = f(2) = 0$  (see plot!)

[Note that  $G(2^+) = G(2^+ - 4) = G(-2^+) = G(2^-)$  where we used that  $G$  is even in the last step; in fact, we can show like this that the Fourier cosine series of a continuous function is always continuous.]

$$G\left(\frac{5}{2}\right) = G\left(\frac{5}{2} - 4\right) = G\left(-\frac{3}{2}\right) = f\left(\frac{3}{2}\right) = \frac{7}{4}$$

$$G\left(-\frac{1}{2}\right) \stackrel{\text{even}}{=} G\left(\frac{1}{2}\right) = f\left(\frac{1}{2}\right) = \frac{15}{4}$$

- (c)  $H(2) = \frac{1}{2}(f(2^-) - f(2^+)) = 0$  (see plot!)

[Note that  $H(2^+) = H(2^+ - 4) = H(-2^+) = -H(2^-)$  where we used that  $H$  is odd in the last step; in fact, we can show like this that the Fourier sine series of a continuous function is always 0 at the jumps.]

$$H\left(\frac{5}{2}\right) = H\left(\frac{5}{2} - 4\right) = H\left(-\frac{3}{2}\right) = -f\left(\frac{3}{2}\right) = -\frac{7}{4}$$

$$H\left(-\frac{1}{2}\right) \stackrel{\text{odd}}{=} -H\left(\frac{1}{2}\right) = -f\left(\frac{1}{2}\right) = -\frac{15}{4}$$

**Differentiating and integrating Fourier series**

**Theorem 138.** If  $f(t)$  is **continuous** and  $f(t) = \frac{a_0}{2} + \sum_{n=1}^{\infty} (a_n \cos(\frac{n\pi t}{L}) + b_n \sin(\frac{n\pi t}{L}))$ , then\*  $f'(t) = \sum_{n=1}^{\infty} (\frac{n\pi}{L} b_n \cos(\frac{n\pi t}{L}) - \frac{n\pi}{L} a_n \sin(\frac{n\pi t}{L}))$  (i.e., we can differentiate termwise).

Technical detail\*:  $f'$  needs to be, e.g., piecewise smooth (so that it has a Fourier series itself).

**Caution!** We cannot simply differentiate termwise if  $f(t)$  is lacking continuity. See the next example.

**Comment.** On the other hand, we can integrate termwise (going from the Fourier series of  $f' = g$  to the Fourier series of  $f = \int g$  because the latter will be continuous). This is illustrated in the example after the next.

**Example 139. (caution!)** The function  $g(t) = \sum_{n \text{ odd}} \frac{4}{\pi n} \sin(n\pi t)$  from Example 135 is not continuous. For all values, except the discontinuities, we have  $g'(t) = 0$ . On the other hand, differentiating the Fourier series termwise, results in  $4 \sum_{n \text{ odd}} \cos(n\pi t)$ , which diverges for most values of  $t$  (that's easy to check for  $t = 0$ ). This illustrates that we cannot apply Theorem 138 because  $g(t)$  is lacking continuity.

[The issues we are facing here can be fixed by generalizing the notion of function to distributions. (Maybe you have heard of the Dirac delta "function".)]

**Example 140.** Let  $h(t)$  be the 2-periodic function with  $h(t) = |t|$  for  $t \in [-1, 1]$ . Compute the Fourier series of  $h(t)$ .

**Solution.** We could just use the integral formulas to compute  $a_n$  and  $b_n$ . Since  $h(t)$  is even (plot it!), we will find that  $b_n = 0$ . Computing  $a_n$  is left as an exercise.

**Solution.** Note that  $h(t) = \begin{cases} -t & \text{for } t \in (-1, 0) \\ +t & \text{for } t \in (0, 1) \end{cases}$  is continuous and  $h'(t) = g(t)$ , with  $g(t)$  as in Example 135. Hence, we can apply Theorem 138 to conclude

$$h'(t) = g(t) = \sum_{\substack{n=1 \\ n \text{ odd}}}^{\infty} \frac{4}{\pi n} \sin(n\pi t) \implies h(t) = \sum_{\substack{n=1 \\ n \text{ odd}}}^{\infty} \frac{4}{\pi n} \left(-\frac{1}{\pi n}\right) \cos(n\pi t) + C,$$

where  $C = \frac{a_0}{2} = \frac{1}{2} \int_{-1}^1 h(t) dt = \frac{1}{2}$  is the constant of integration. Thus,  $h(t) = \frac{1}{2} - \sum_{\substack{n=1 \\ n \text{ odd}}}^{\infty} \frac{4}{\pi^2 n^2} \cos(n\pi t)$ .

**Remark.** Note that  $t = 0$  in the last Fourier series, gives us  $\frac{\pi^2}{8} = \frac{1}{1} + \frac{1}{3^2} + \frac{1}{5^2} + \dots$ . As an exercise, you can try to find from here the fact that  $\sum_{n \geq 1} \frac{1}{n^2} = \frac{\pi^2}{6}$ . Similarly, we can use Fourier series to find that  $\sum_{n \geq 1} \frac{1}{n^4} = \frac{\pi^4}{90}$ .

**Just for fun.** These are the values  $\zeta(2)$  and  $\zeta(4)$  of the Riemann zeta function  $\zeta(s)$ . No such evaluations are known for  $\zeta(3), \zeta(5), \dots$  and we don't even know (for sure) whether these are rational numbers. Nobody believes these to be rational numbers, but it was only in 1978 that Apéry proved that  $\zeta(3)$  is not a rational number.

## Review: the motion of a mass on a spring

The motion of a mass  $m$  attached to a spring is described by

$$my'' + ky = 0$$

where  $y$  is the displacement from the equilibrium position and  $k > 0$  is the spring constant.

**Why?** This follows from Hooke's law  $F = -ky$  combined with Newton's second law  $F = ma = my''$ . (Note that the minus sign is needed because the force on the mass is in direction opposite to the displacement.)

**Comment.** By measuring  $y$  as the displacement from equilibrium, it doesn't matter whether the mass is attached horizontally or vertically (gravity is taken into account by the extra stretch in the spring due to the mass).

Solving this DE, we find that the general solution is

$$y(t) = A \cos(\omega t) + B \sin(\omega t)$$

where  $\omega = \sqrt{k/m}$  (note that the characteristic roots are  $\pm i \sqrt{k/m}$ ). We observe that:

- The motion  $y(t)$  is periodic with **period**  $2\pi/\omega$ . Equivalently, its (circular) **frequency** is  $\omega$ .  
This follows from the fact that both  $\cos(t)$  and  $\sin(t)$  have period  $2\pi$ .
- The **amplitude** of the motion  $y(t)$  is  $\sqrt{A^2 + B^2}$ .  
This follows from the fact that  $y(t) = A \cos(\omega t) + B \sin(\omega t) = r \cos(\omega t - \alpha)$  (can you explain/prove this?) where  $(r, \alpha)$  are the **polar coordinates** for  $(A, B)$ . In particular, the amplitude is  $r = \sqrt{A^2 + B^2}$ .

More generally, the motion of a mass  $m$  on a spring, with damping and with an external force  $f(t)$  taken into account, can be modeled by the DE

$$my'' + dy' + ky = f(t).$$

Note that each term is representing a force:  $my'' = ma$  is the force due to Newton's second law ( $F = ma$ ), the term  $dy'$  models damping (proportional to the velocity), the term  $ky$  represents the force due to Hooke's law, and the term  $f(t)$  represents an external force that acts on the mass at time  $t$ .

## Fourier series and linear differential equations

In the following examples, we consider inhomogeneous linear DEs  $p(D)y = F(t)$  where  $F(t)$  is a periodic function that can be expressed as a Fourier series. We first review the notion of **resonance** (and how to predict it) and then solve such DEs.

**Example 141.** Consider the linear DE  $my'' + ky = \cos(\omega t)$ . For which (external) **frequencies**  $\omega > 0$  does **resonance** occur?

**Solution.** The characteristic roots (the roots of  $p(D) = mD^2 + k$ ) are  $\pm i \sqrt{k/m}$ . Correspondingly, the solutions of the homogeneous equation  $my'' + ky = 0$  are combinations of  $\cos(\omega_0 t)$  and  $\sin(\omega_0 t)$ , where  $\omega_0 = \sqrt{k/m}$  ( $\omega_0$  is called the **natural frequency** of the DE). Resonance occurs in the case  $\omega = \omega_0$  when the external frequency matches the natural frequency.

**Review.** If  $\omega \neq \omega_0$  (overlapping roots), then there is particular solution of the form  $y_p(t) = A \cos(\omega t) + B \sin(\omega t)$  (for specific values of  $A$  and  $B$ ). The general solution is  $y(t) = A \cos(\omega t) + B \sin(\omega t) + C_1 \cos(\omega_0 t) + C_2 \sin(\omega_0 t)$ , which is a bounded function of  $t$ . In contrast, if  $\omega = \omega_0$ , then the general solution is  $y(t) = (C_1 + At) \cos(\omega_0 t) + (C_2 + Bt) \sin(\omega_0 t)$  and this function is unbounded.

**Example 142.** A mass-spring system is described by the DE  $2y'' + 32y = \sum_{n=1}^{\infty} \frac{\cos(n\omega t)}{n^2 + 1}$ .

For which  $\omega$  does resonance occur?

**Solution.** The roots of  $p(D) = 2D^2 + 32$  are  $\pm 4i$ , so that the natural frequency is 4. Resonance therefore occurs if 4 equals  $n\omega$  for some  $n \in \{1, 2, 3, \dots\}$ . Equivalently, resonance occurs if  $\omega = 4/n$  for some  $n \in \{1, 2, 3, \dots\}$ .

**Example 143.** A mass-spring system is described by the DE  $my'' + y = \sum_{n=1}^{\infty} \frac{1}{n^2} \sin\left(\frac{nt}{3}\right)$ .

For which  $m$  does resonance occur?

**Solution.** The roots of  $p(D) = mD^2 + 1$  are  $\pm i/\sqrt{m}$ , so that the natural frequency is  $1/\sqrt{m}$ . Resonance therefore occurs if  $1/\sqrt{m} = n/3$  for some  $n \in \{1, 2, 3, \dots\}$ . Equivalently, resonance occurs if  $m = 9/n^2$  for some  $n \in \{1, 2, 3, \dots\}$ .

**Example 144.** A mass-spring system is described by the DE  $3y'' + ky = F(t)$  where  $F(t)$  is an external force with period 5. For which values of  $k$  can resonance occur?

**Solution.**  $F(t)$  has a Fourier series of the form  $F(t) = \frac{a_0}{2} + \sum_{n=1}^{\infty} \left( a_n \cos\left(\frac{2\pi n t}{5}\right) + b_n \sin\left(\frac{2\pi n t}{5}\right) \right)$ .

The roots of  $p(D) = 3D^2 + k$  are  $\pm i\sqrt{\frac{k}{3}}$ , so that the natural frequency is  $\sqrt{\frac{k}{3}}$ . Resonance therefore can occur if  $\sqrt{\frac{k}{3}} = \frac{2\pi n}{5}$  for some  $n \in \{1, 2, 3, \dots\}$ . Equivalently, resonance can occur if  $k = \frac{12\pi^2 n^2}{25}$  for some  $n \in \{1, 2, 3, \dots\}$ .

**Note.** Resonance will occur for  $k = \frac{12\pi^2 n^2}{25}$  unless both of the corresponding Fourier coefficients  $a_n$  and  $b_n$  are 0.

**Note.** The term  $a_0/2$  in  $F(t)$  corresponds to a characteristic root of 0 and cannot lead to resonance.

Though it requires some effort, we already know how to solve  $p(D)y = F(t)$  for periodic forces  $F(t)$ , once we have a Fourier series for  $F(t)$ .

The same approach works for linear differential equations of higher order, or even systems of equations.

**Example 145.** Find a particular solution of  $2y'' + 32y = F(t)$ , with  $F(t) = \begin{cases} 10 & \text{if } t \in (0, 1) \\ -10 & \text{if } t \in (1, 2) \end{cases}$ , extended 2-periodically.

**Solution.**

- From earlier, we already know  $F(t) = 10 \sum_{n \text{ odd}} \frac{4}{\pi n} \sin(\pi n t)$ .
- We next solve the equation  $2y'' + 32y = \sin(\pi n t)$  for  $n = 1, 3, 5, \dots$ . First, we note that the external frequency is  $\pi n$ , which is never equal to the natural frequency  $\omega_0 = 4$ . Hence, there exists a particular solution of the form  $y_p(t) = A \cos(\pi n t) + B \sin(\pi n t)$ . To determine the coefficients  $A, B$ , we plug into the DE. Noting that  $y_p'' = -\pi^2 n^2 y_p$  (can you see why without computing two derivatives?), we get

$$2y_p'' + 32y_p = (32 - 2\pi^2 n^2)(A \cos(\pi n t) + B \sin(\pi n t)) \stackrel{!}{=} \sin(\pi n t).$$

We conclude  $A = 0$  and  $B = \frac{1}{32 - 2\pi^2 n^2}$ , so that  $y_p(t) = \frac{\sin(\pi n t)}{32 - 2\pi^2 n^2}$ .

- We combine the particular solutions found in the previous step, to see that

$$2y'' + 32y = 10 \sum_{\substack{n=1 \\ n \text{ odd}}}^{\infty} \frac{4}{\pi n} \sin(\pi n t) \quad \text{is solved by} \quad y_p = 10 \sum_{\substack{n=1 \\ n \text{ odd}}}^{\infty} \frac{4}{\pi n} \frac{\sin(\pi n t)}{32 - 2\pi^2 n^2}.$$

**Example 146.** Find a particular solution of  $2y'' + 32y = F(t)$ , with  $F(t)$  the  $2\pi$ -periodic function such that  $F(t) = 10t$  for  $t \in (-\pi, \pi)$ .

**Solution.**

- The Fourier series of  $F(t)$  is  $F(t) = \sum_{n=1}^{\infty} (-1)^{n+1} \frac{20}{n} \sin(nt)$ . [Exercise!]
- We next solve the equation  $2y'' + 32y = \sin(nt)$  for  $n = 1, 2, 3, \dots$ . Note, however, that **resonance** occurs for  $n = 4$ , so we need to treat that case separately. If  $n \neq 4$  then we find, as in the previous example, that  $y_p(t) = \frac{\sin(nt)}{32 - 2n^2}$ . [Note how this fails for  $n = 4$ !]

For  $2y'' + 32y = \sin(4t)$ , we begin with  $y_p = At \cos(4t) + Bt \sin(4t)$ . Then  $y_p' = (A + 4Bt)\cos(4t) + (B - 4At)\sin(4t)$ , and  $y_p'' = (8B - 16At)\cos(4t) + (-8A - 16Bt)\sin(4t)$ . Plugging into the DE, we get  $2y_p'' + 32y_p = 16B \cos(4t) - 16A \sin(4t) \stackrel{!}{=} \sin(4t)$ , and thus  $B = 0$ ,  $A = -\frac{1}{16}$ . So,  $y_p = -\frac{1}{16}t \cos(4t)$ .

- We combine the particular solutions to get that our DE

$$2y'' + 32y = -5\sin(4t) + \sum_{\substack{n=1 \\ n \neq 4}}^{\infty} (-1)^{n+1} \frac{20}{n} \sin(nt)$$

is solved by

$$y_p(t) = \frac{5}{16}t \cos(4t) + \sum_{\substack{n=1 \\ n \neq 4}}^{\infty} (-1)^{n+1} \frac{20}{n} \frac{\sin(nt)}{32 - 2n^2}.$$

As in the previous example, this solution cannot really be simplified. Make some plots to appreciate the dominating character of the term resulting from resonance!

**Important comment.** Note that the general solution is

$$y(t) = \frac{5}{16}t \cos(4t) + \sum_{\substack{n=1 \\ n \neq 4}}^{\infty} (-1)^{n+1} \frac{20}{n} \frac{\sin(nt)}{32 - 2n^2} + C_1 \cos(4t) + C_2 \sin(4t)$$

and that it always features the resonant term.

## Boundary value problems

**Example 147.** The IVP (initial value problem)  $y'' + 4y = 0$ ,  $y(0) = 0$ ,  $y'(0) = 0$  has the unique solution  $y(x) = 0$ .

Initial value problems are often used when the problem depends on time. Then,  $y(0)$  and  $y'(0)$  describe the initial configuration at  $t = 0$ .

For problems which instead depend on spatial variables, such as position, it may be natural to specify values at positions on the boundary (for instance, if  $y(x)$  describes the steady-state temperature of a rod at position  $x$ , we might know the temperature at the two end points).

The next example illustrates that such a boundary value problem (BVP) may or may not have a unique solution.

**Example 148.** Verify the following claims.

- (a) The BVP  $y'' + 4y = 0$ ,  $y(0) = 0$ ,  $y(1) = 0$  has the unique solution  $y(x) = 0$ .
- (b) The BVP  $y'' + \pi^2 y = 0$ ,  $y(0) = 0$ ,  $y(1) = 0$  is solved by  $y(x) = B \sin(\pi x)$  for any value  $B$ .

**Solution.**

- (a) We know that the general solution to the DE is  $y(x) = A \cos(2x) + B \sin(2x)$ . The boundary conditions imply  $y(0) = A \stackrel{!}{=} 0$  and, using that  $A = 0$ ,  $y(1) = B \sin(2) \stackrel{!}{=} 0$  shows that  $B = 0$  as well.
- (b) This time, the general solution to the DE is  $y(x) = A \cos(\pi x) + B \sin(\pi x)$ . The boundary conditions imply  $y(0) = A \stackrel{!}{=} 0$  and, using that  $A = 0$ ,  $y(1) = B \sin(\pi) \stackrel{!}{=} 0$ . This second condition is true for every  $B$ .

It is therefore natural to ask: for which  $\lambda$  does the BVP  $y'' + \lambda y = 0$ ,  $y(0) = 0$ ,  $y(L) = 0$  have nonzero solutions? (We assume that  $L > 0$ .)

Such solutions are called **eigenfunctions** and  $\lambda$  is the corresponding **eigenvalue**.

**Remark.** Compare that to our previous use of the term eigenvalue: given a matrix  $A$ , we asked: for which  $\lambda$  does  $Av - \lambda v = 0$  have nonzero solutions  $v$ ? Such solutions were called eigenvectors and  $\lambda$  was the corresponding eigenvalue.

**Example 149.** Find all eigenfunctions and eigenvalues of  $y'' + \lambda y = 0$ ,  $y(0) = 0$ ,  $y(L) = 0$ .

Such a problem is called an **eigenvalue problem**.

**Solution.** The solutions of the DE look different in the cases  $\lambda < 0$ ,  $\lambda = 0$ ,  $\lambda > 0$ , so we consider them individually.

$\lambda = 0$ . Then  $y(x) = Ax + B$  and  $y(0) = y(L) = 0$  implies that  $y(x) = 0$ . No eigenfunction here.

$\lambda < 0$ . The roots of the characteristic polynomial are  $\pm\sqrt{-\lambda}$ . Writing  $\rho = \sqrt{-\lambda}$ , the general solution therefore is  $y(x) = Ae^{\rho x} + Be^{-\rho x}$ .  $y(0) = A + B \stackrel{!}{=} 0$  implies  $B = -A$ . Using that, we get  $y(L) = A(e^{\rho L} - e^{-\rho L}) \stackrel{!}{=} 0$ . For eigenfunctions we need  $A \neq 0$ , so  $e^{\rho L} = e^{-\rho L}$  which implies  $\rho L = -\rho L$ . This cannot happen since  $\rho \neq 0$  and  $L \neq 0$ . Again, no eigenfunctions in this case.

$\lambda > 0$ . The roots of the characteristic polynomial are  $\pm i\sqrt{\lambda}$ . Writing  $\rho = \sqrt{\lambda}$ , the general solution thus is  $y(x) = A \cos(\rho x) + B \sin(\rho x)$ .  $y(0) = A \stackrel{!}{=} 0$ . Using that,  $y(L) = B \sin(\rho L) \stackrel{!}{=} 0$ . Since  $B \neq 0$  for eigenfunctions, we need  $\sin(\rho L) = 0$ . This happens if  $\rho L = n\pi$  for  $n = 1, 2, 3, \dots$  (since  $\rho$  and  $L$  are both positive,  $n$  must be positive as well). Equivalently,  $\rho = \frac{n\pi}{L}$ . Consequently, we find the eigenfunctions  $y_n(x) = \sin\left(\frac{n\pi x}{L}\right)$ ,  $n = 1, 2, 3, \dots$ , with eigenvalue  $\lambda = \left(\frac{n\pi}{L}\right)^2$ .